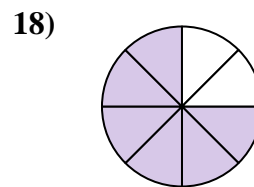
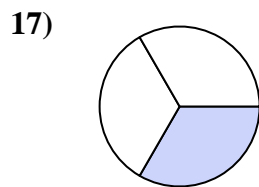
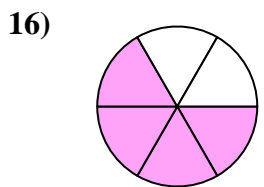
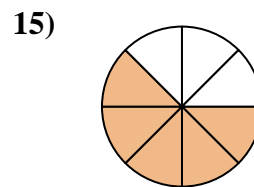
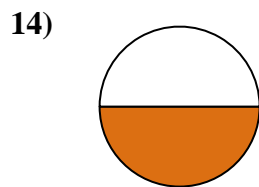
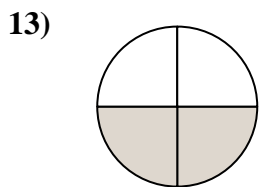
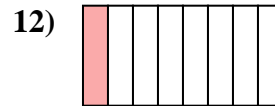

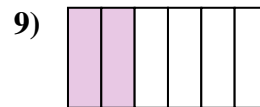
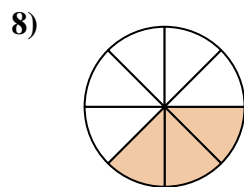

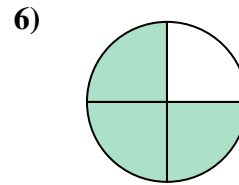
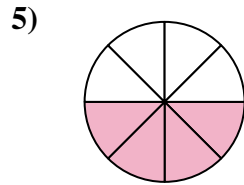
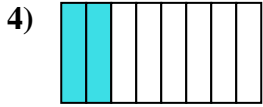
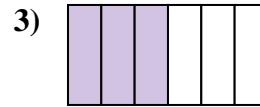
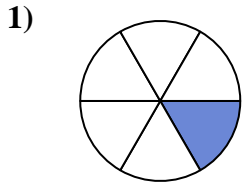




Escribe la cantidad sombreada como una fracción de la cantidad total.

Respuestas

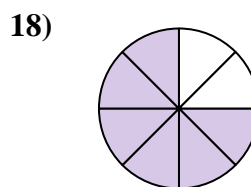
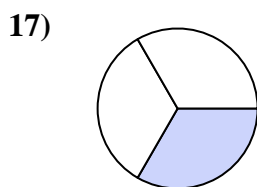
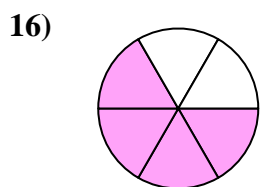
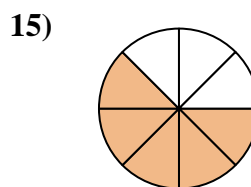
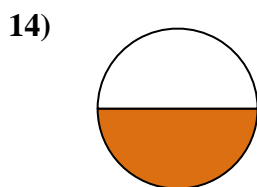
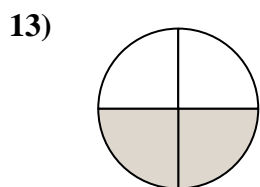
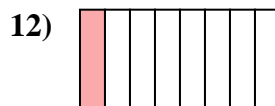

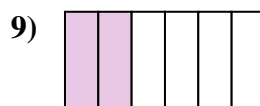
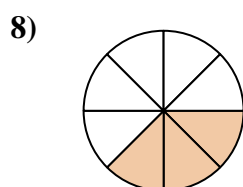
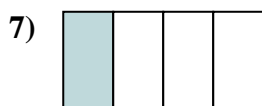
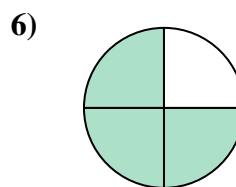
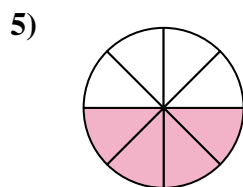
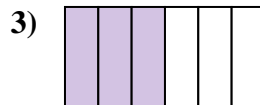

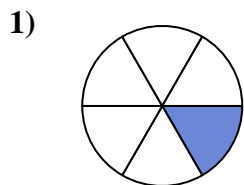


1. _____
2. _____
3. _____
4. _____
5. _____
6. _____
7. _____
8. _____
9. _____
10. _____
11. _____
12. _____
13. _____
14. _____
15. _____
16. _____
17. _____
18. _____



Escribe la cantidad sombreada como una fracción de la cantidad total.

Respuestas



1. 1/6

2. 5/6

3. 3/6

4. 2/8

5. 4/8

6. 3/4

7. 1/4

8. 3/8

9. 2/6

10. 2/3

11. 7/8

12. 1/8

13. 2/4

14. 1/2

15. 5/8

16. 4/6

17. 1/3

18. 6/8