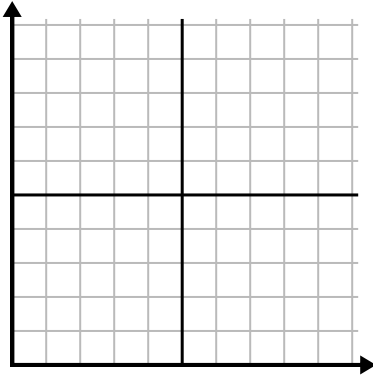




Complete la cuadrícula utilizando la gráfica.

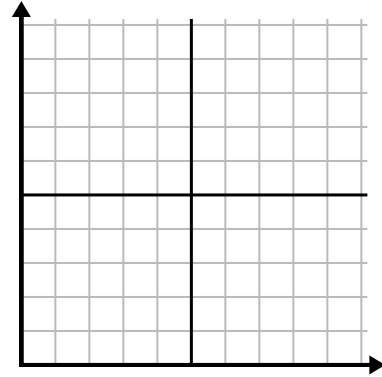
1) 

Semana	1	2	3	4	5	6	7
Horas de televisión vistas	50	25	45	10	15	30	35



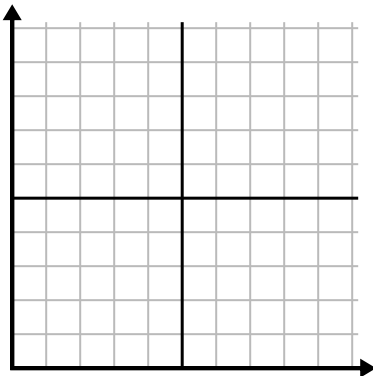
2) 

Día	1	2	3	4	5	6
Mensajes enviados	20	5	50	30	10	15



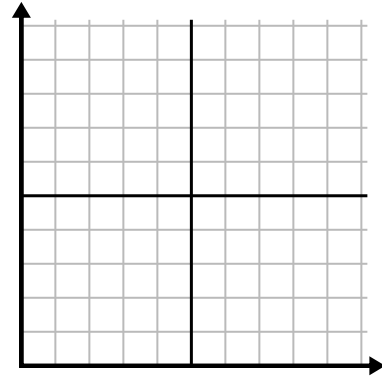
3) 

Día	1	2	3	4	5	6
Vídeos de Youtube vistos	300	240	60	210	180	270



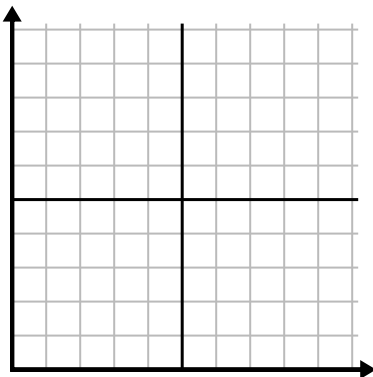
4) 

Día	1	2	3	4	5
Dinero gastado	5	6	7	10	3



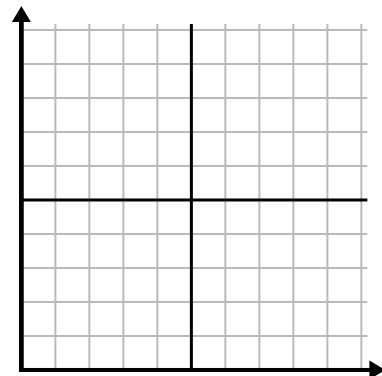
5) 

Hora	1	2	3	4	5	6	7
Cantidad vendida	8	1	6	10	3	7	4



6) 

Mes	1	2	3	4	5
Precio de la factura eléctrica	125	200	150	25	75

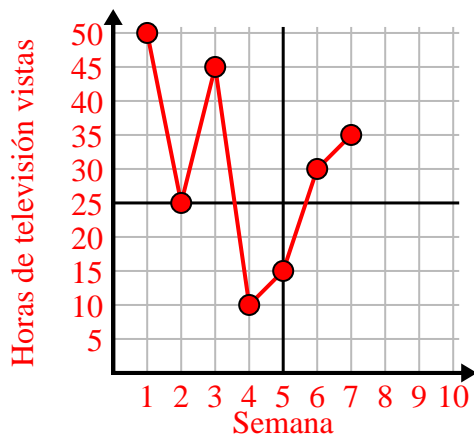




Complete la cuadrícula utilizando la gráfica.

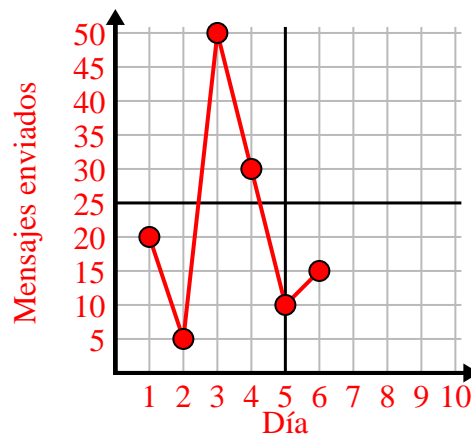
1)

Semana	1	2	3	4	5	6	7
Horas de televisión vistas	50	25	45	10	15	30	35



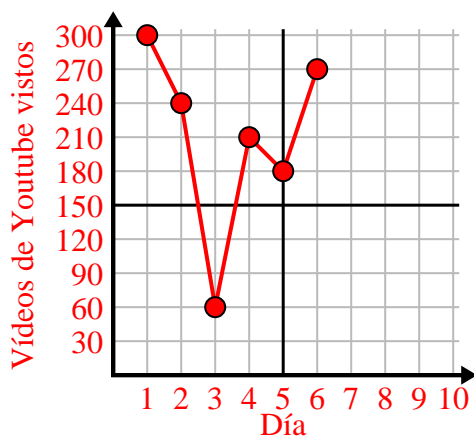
2)

Día	1	2	3	4	5	6
Mensajes enviados	20	5	50	30	10	15



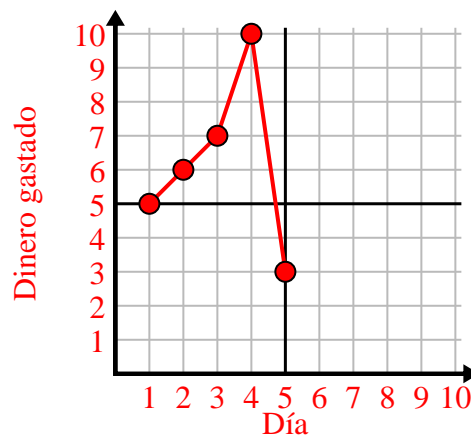
3)

Día	1	2	3	4	5	6
Vídeos de Youtube vistos	300	240	60	210	180	270



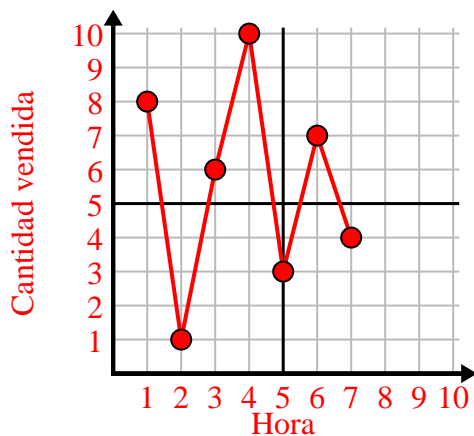
4)

Día	1	2	3	4	5
Dinero gastado	5	6	7	10	3



5)

Hora	1	2	3	4	5	6	7
Cantidad vendida	8	1	6	10	3	7	4



6)

Mes	1	2	3	4	5
Precio de la factura eléctrica	125	200	150	25	75

