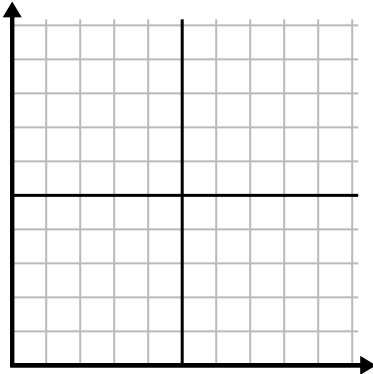




Complete la cuadrícula utilizando la gráfica.

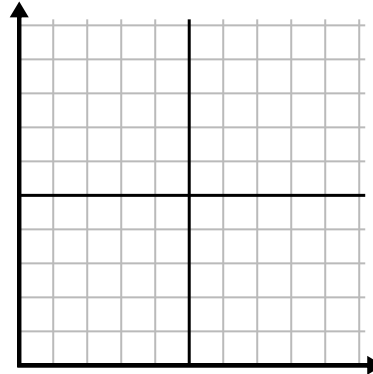
1)

Mes	1	2	3	4	5	6
Precio de la factura eléctrica	50	75	250	150	175	25



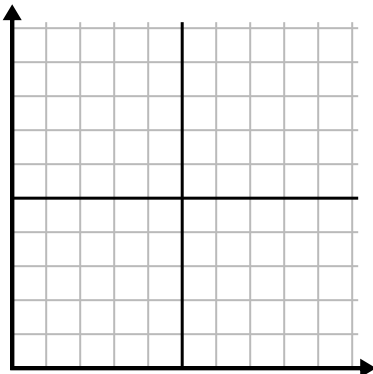
2)

Día	1	2	3	4	5	6	7
Videos de Youtube vistos	90	210	120	150	60	30	300



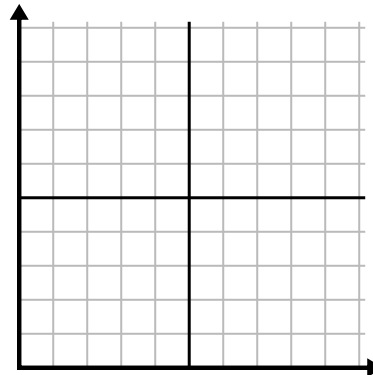
3)

Semana	1	2	3	4	5	6
Horas de televisión vistas	25	30	15	10	20	50



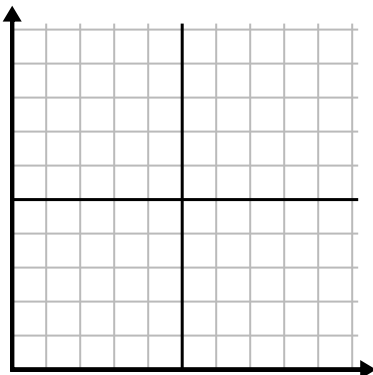
4)

Día	1	2	3	4	5	6	7
Comidas vendidas	900	400	200	800	100	500	300



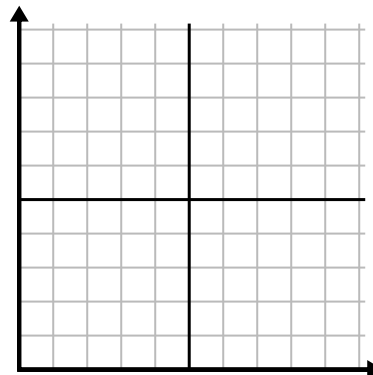
5)

Semana	1	2	3	4	5
Agua usada (galones)	60	80	10	30	20



6)

Día	1	2	3	4	5
Calorías quemadas	140	120	180	200	160

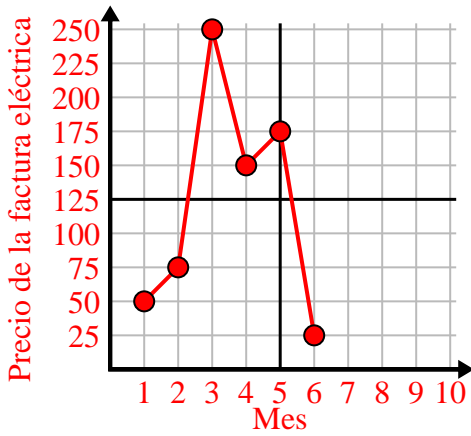




Complete la cuadrícula utilizando la gráfica.

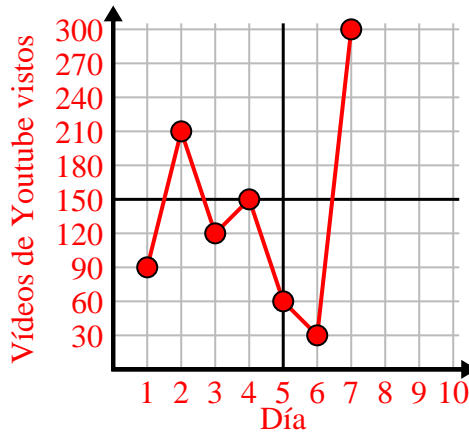
1)

Mes	1	2	3	4	5	6
Precio de la factura eléctrica	50	75	250	150	175	25



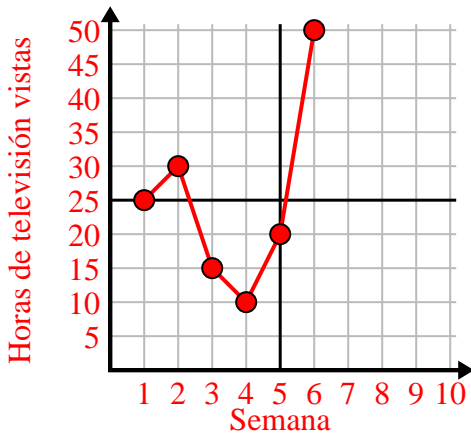
2)

Día	1	2	3	4	5	6	7
Videos de Youtube vistos	90	210	120	150	60	30	300



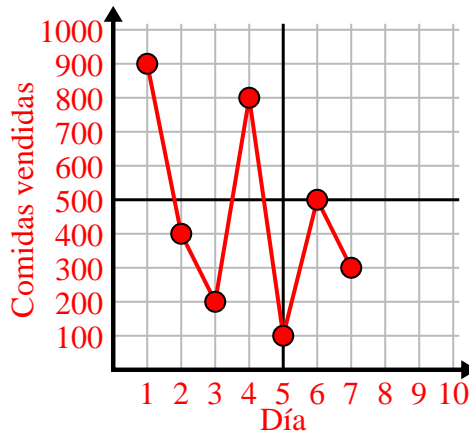
3)

Semana	1	2	3	4	5	6
Horas de televisión vistas	25	30	15	10	20	50



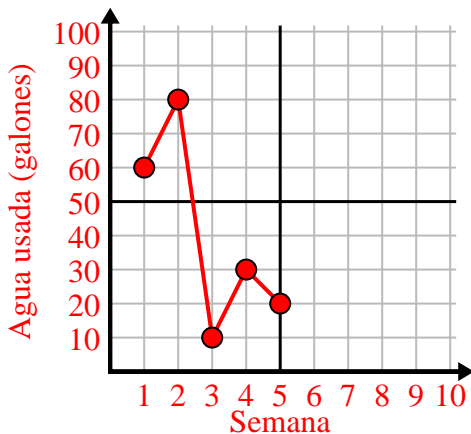
4)

Día	1	2	3	4	5	6	7
Comidas vendidas	900	400	200	800	100	500	300



5)

Semana	1	2	3	4	5
Agua usada (galones)	60	80	10	30	20



6)

Día	1	2	3	4	5
Calorías quemadas	140	120	180	200	160

