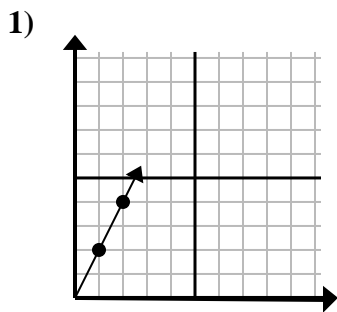


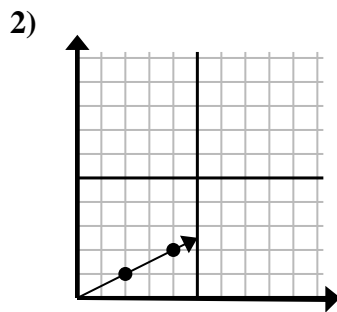


Determine qué opción representa un punto en la línea si continuara.

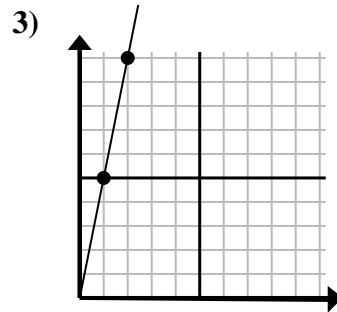
Respuestas



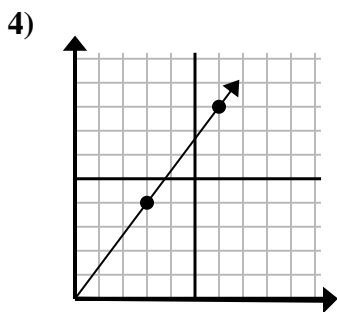
- A. (3, 6)
- B. (7, 3)
- C. (6, 4)
- D. (7, 14)



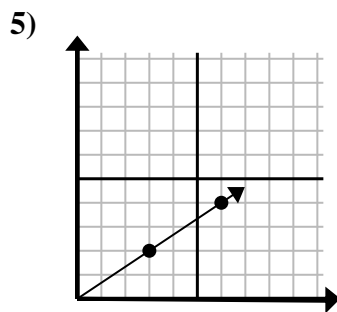
- A. (5, 6)
- B. (5, 4)
- C. (6, 3)
- D. (9, 6)



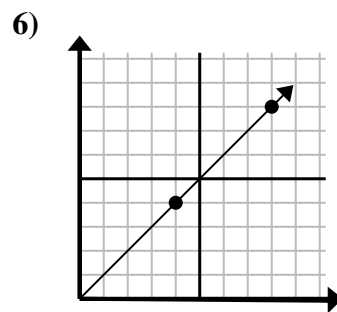
- A. (7, 10)
- B. (3, 15)
- C. (6, 30)
- D. (5, 8)



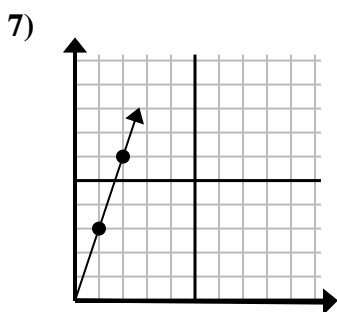
- A. (12, 16)
- B. (10, 6)
- C. (21, 28)
- D. (9, 12)



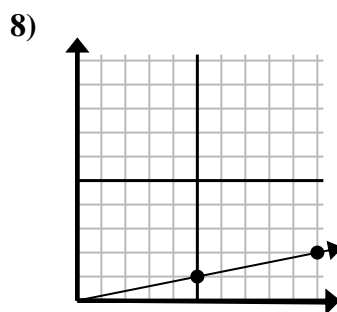
- A. (9, 4)
- B. (9, 6)
- C. (15, 10)
- D. (12, 8)



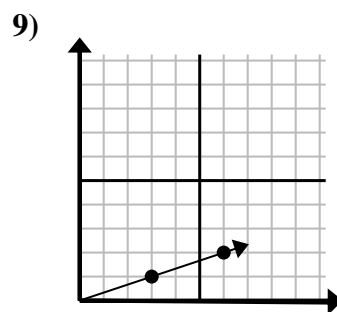
- A. (16, 16)
- B. (12, 12)
- C. (9, 9)
- D. (24, 24)



- A. (5, 8)
- B. (5, 15)
- C. (6, 18)
- D. (3, 9)



- A. (11, 5)
- B. (15, 2)
- C. (15, 3)
- D. (14, 2)



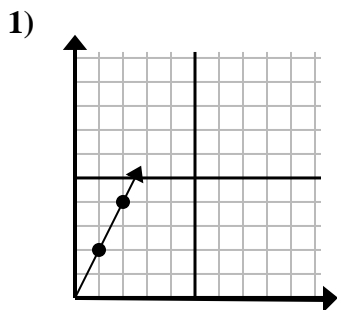
- A. (10, 6)
- B. (9, 3)
- C. (8, 6)
- D. (9, 2)

- 1. _____
- 2. _____
- 3. _____
- 4. _____
- 5. _____
- 6. _____
- 7. _____
- 8. _____
- 9. _____

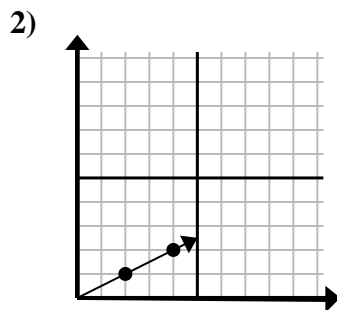


Determine qué opción representa un punto en la línea si continuara.

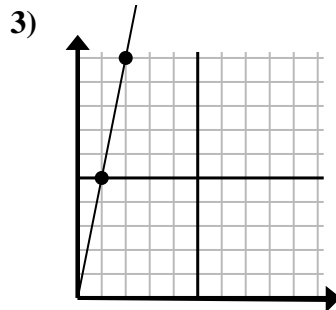
Respuestas



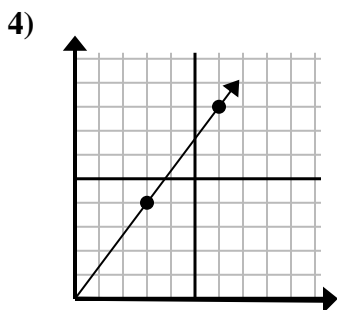
- A. (3 , 6)
- B. (7 , 3)
- C. (6 , 4)
- D. (7 , 14)



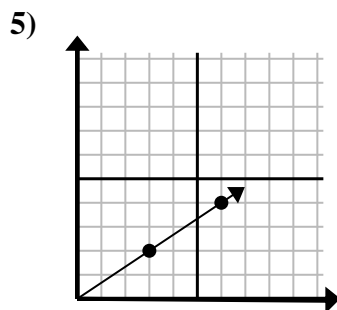
- A. (5 , 6)
- B. (5 , 4)
- C. (6 , 3)
- D. (9 , 6)



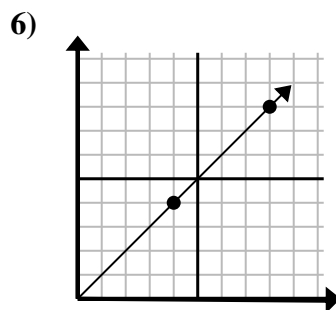
- A. (7 , 10)
- B. (3 , 15)
- C. (6 , 30)
- D. (5 , 8)



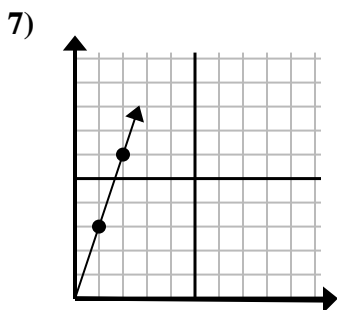
- A. (12 , 16)
- B. (10 , 6)
- C. (21 , 28)
- D. (9 , 12)



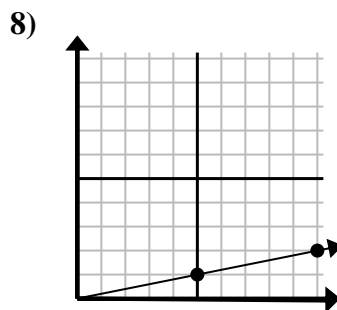
- A. (9 , 4)
- B. (9 , 6)
- C. (15 , 10)
- D. (12 , 8)



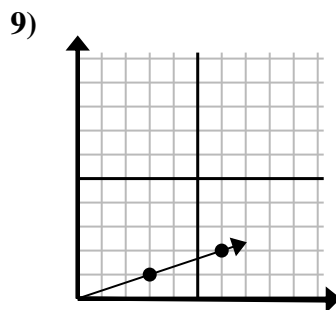
- A. (16 , 16)
- B. (12 , 12)
- C. (9 , 9)
- D. (24 , 24)



- A. (5 , 8)
- B. (5 , 15)
- C. (6 , 18)
- D. (3 , 9)



- A. (11 , 5)
- B. (15 , 2)
- C. (15 , 3)
- D. (14 , 2)



- A. (10 , 6)
- B. (9 , 3)
- C. (8 , 6)
- D. (9 , 2)

- 1. **A**
- 2. **C**
- 3. **B**
- 4. **D**
- 5. **B**
- 6. **B**
- 7. **D**
- 8. **C**
- 9. **B**