



Dibuje un círculo en las coordenadas enumeradas.

1) (8, 8)



2) (4, 0)



3) (7, 7)



4) (2, 2)



5) (4, 5)



6) (1, 3)



7) (2, 5)



8) (7, 5)



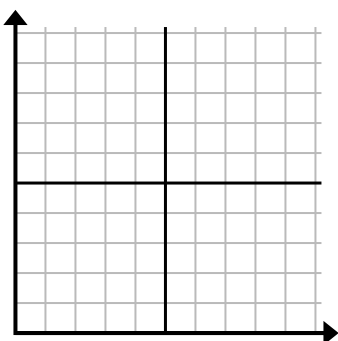
9) (9, 7)



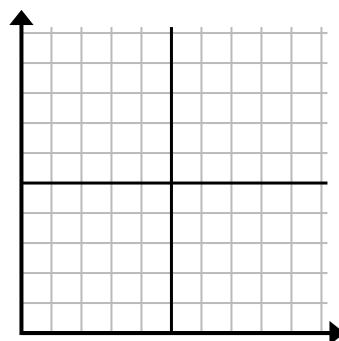
10) (2, 3)



11) (7, 6)



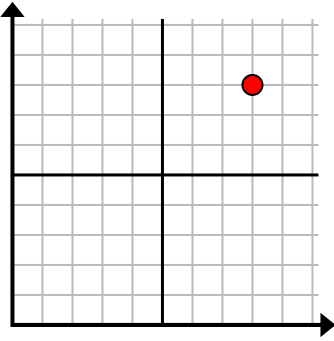
12) (10, 4)



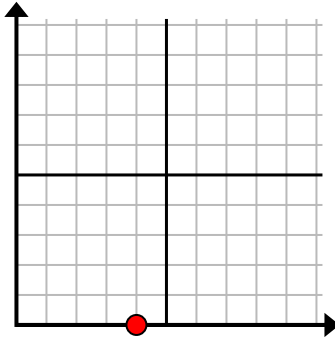


Dibuje un círculo en las coordenadas enumeradas.

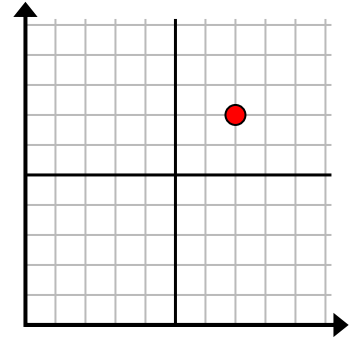
1) (8, 8)



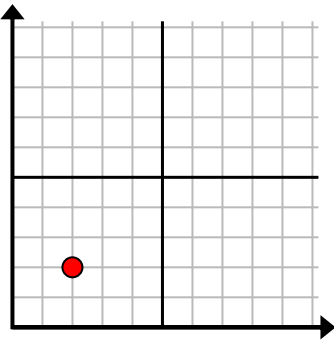
2) (4, 0)



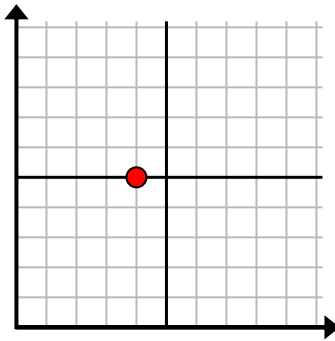
3) (7, 7)



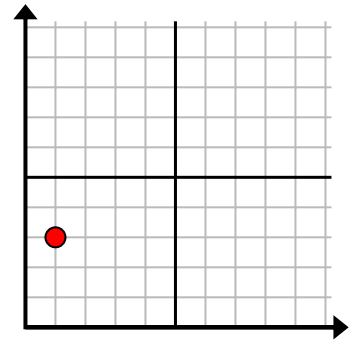
4) (2, 2)



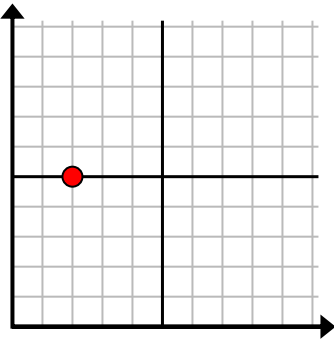
5) (4, 5)



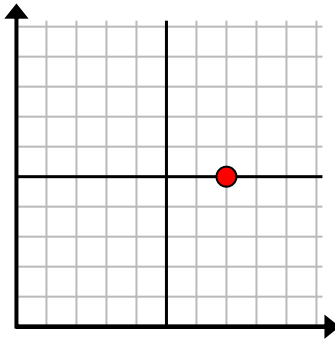
6) (1, 3)



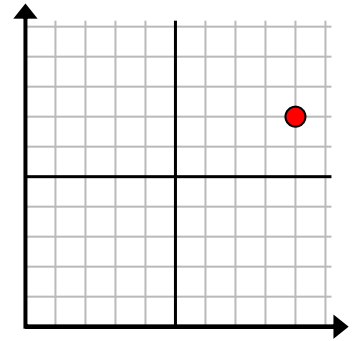
7) (2, 5)



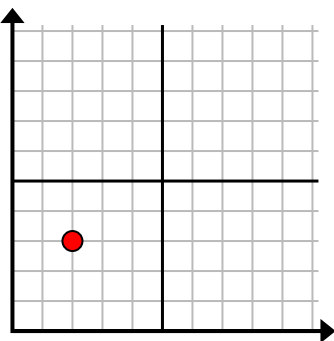
8) (7, 5)



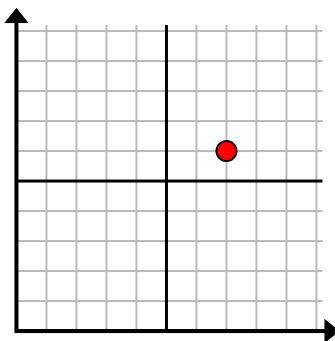
9) (9, 7)



10) (2, 3)



11) (7, 6)



12) (10, 4)

