


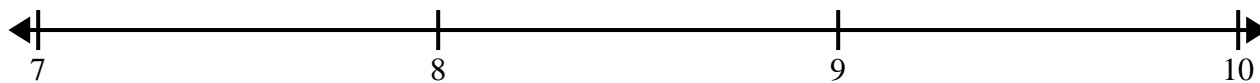


Cree y etiquete el gráfico de líneas usando el conjunto de números proporcionados.


- 1) 7 $8\frac{1}{2}$ $8\frac{1}{2}$ 6 8 6 7 $8\frac{1}{2}$
 6 $7\frac{1}{2}$ $6\frac{1}{2}$ $7\frac{1}{2}$ $6\frac{1}{2}$ 8 $7\frac{1}{2}$ $6\frac{1}{2}$



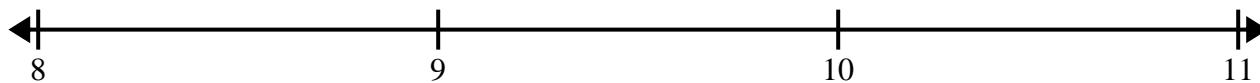
- 2) $7\frac{3}{8}$ $9\frac{1}{8}$ $8\frac{2}{8}$ $8\frac{4}{8}$ 7 $8\frac{2}{8}$ $8\frac{4}{8}$ $9\frac{7}{8}$
 $7\frac{5}{8}$ 7 $8\frac{2}{8}$ $8\frac{4}{8}$ $8\frac{5}{8}$ 8 $9\frac{5}{8}$ $9\frac{4}{8}$




- 3) $4\frac{1}{8}$ 5 $5\frac{4}{8}$ 5 6 $4\frac{7}{8}$ $5\frac{4}{8}$ $6\frac{3}{8}$
 $5\frac{3}{8}$ $6\frac{3}{8}$ $5\frac{4}{8}$ $5\frac{3}{8}$ $6\frac{4}{8}$ $5\frac{2}{8}$ $6\frac{4}{8}$ 6



- 4) 10 10 $8\frac{1}{2}$ $8\frac{1}{2}$ 9 $9\frac{1}{2}$ 9 $10\frac{1}{2}$
 $9\frac{1}{2}$ $8\frac{1}{2}$ 10 $10\frac{1}{2}$ $9\frac{1}{2}$ $10\frac{1}{2}$ 8 9



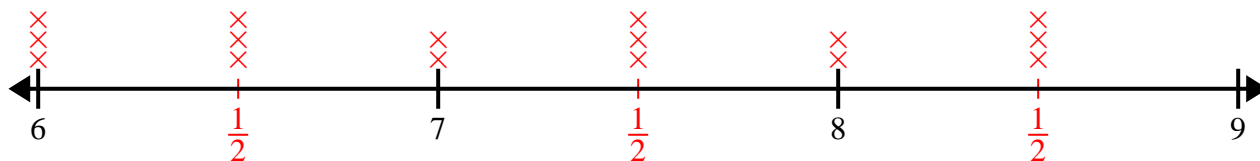
- 5) $6\frac{3}{4}$ $6\frac{3}{4}$ 6 $5\frac{1}{4}$ $4\frac{3}{4}$ $5\frac{2}{4}$ $6\frac{2}{4}$ $5\frac{1}{4}$
 $4\frac{2}{4}$ 4 $6\frac{1}{4}$ $4\frac{1}{4}$ 6 $4\frac{2}{4}$ 5 $4\frac{1}{4}$



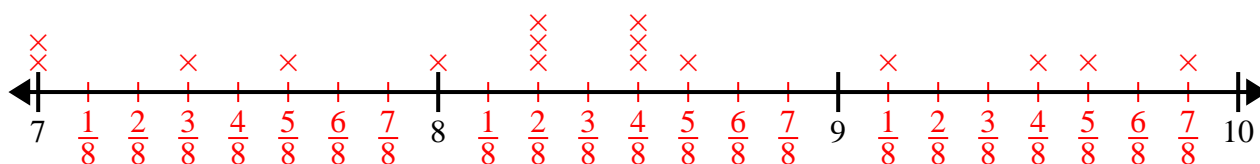


Cree y etiqüete el gráfico de líneas usando el conjunto de números proporcionados.

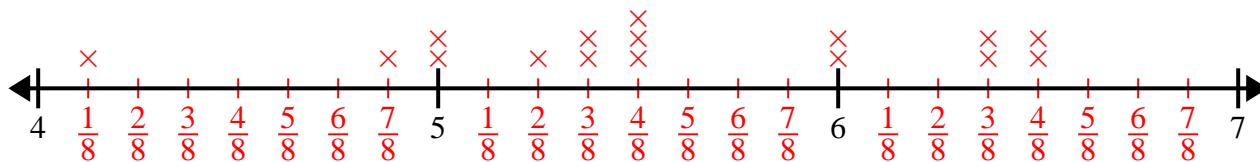
- 1) 7 $8\frac{1}{2}$ $8\frac{1}{2}$ 6 8 6 7 $8\frac{1}{2}$
 6 $7\frac{1}{2}$ $6\frac{1}{2}$ $7\frac{1}{2}$ $6\frac{1}{2}$ 8 $7\frac{1}{2}$ $6\frac{1}{2}$



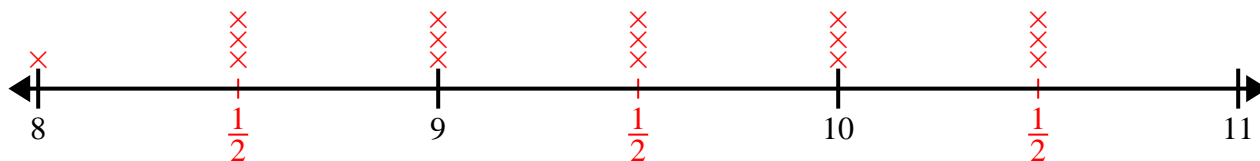
- 2) $7\frac{3}{8}$ $9\frac{1}{8}$ $8\frac{2}{8}$ $8\frac{4}{8}$ 7 $8\frac{2}{8}$ $8\frac{4}{8}$ $9\frac{7}{8}$
 $7\frac{5}{8}$ 7 $8\frac{2}{8}$ $8\frac{4}{8}$ $8\frac{5}{8}$ 8 $9\frac{5}{8}$ $9\frac{4}{8}$



- 3) $4\frac{1}{8}$ 5 $5\frac{4}{8}$ 5 6 $4\frac{7}{8}$ $5\frac{4}{8}$ $6\frac{3}{8}$
 $5\frac{3}{8}$ $6\frac{3}{8}$ $5\frac{4}{8}$ $5\frac{3}{8}$ $6\frac{4}{8}$ $5\frac{2}{8}$ $6\frac{4}{8}$ 6



- 4) 10 10 $8\frac{1}{2}$ $8\frac{1}{2}$ 9 $9\frac{1}{2}$ 9 $10\frac{1}{2}$
 $9\frac{1}{2}$ $8\frac{1}{2}$ 10 $10\frac{1}{2}$ $9\frac{1}{2}$ $10\frac{1}{2}$ 8 9



- 5) $6\frac{3}{4}$ $6\frac{3}{4}$ 6 $5\frac{1}{4}$ $4\frac{3}{4}$ $5\frac{2}{4}$ $6\frac{2}{4}$ $5\frac{1}{4}$
 $4\frac{2}{4}$ 4 $6\frac{1}{4}$ $4\frac{1}{4}$ 6 $4\frac{2}{4}$ 5 $4\frac{1}{4}$

