





Cree y etiquete el gráfico de líneas usando el conjunto de números proporcionados.

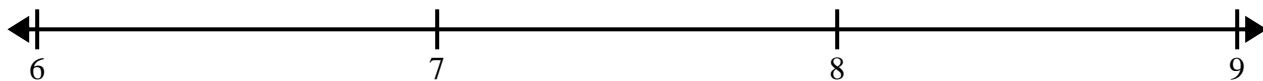
- 1)  $7$        $6\frac{2}{8}$        $7\frac{1}{8}$        $7\frac{2}{8}$        $7\frac{3}{8}$        $7\frac{5}{8}$        $7\frac{2}{8}$        $5\frac{4}{8}$   
 $5\frac{5}{8}$        $5\frac{6}{8}$        $7\frac{4}{8}$        $5\frac{1}{8}$        $7\frac{3}{8}$        $7\frac{3}{8}$        $7\frac{7}{8}$        $5\frac{7}{8}$




- 2)  $9\frac{1}{4}$        $7\frac{1}{4}$        $7\frac{2}{4}$        $7\frac{2}{4}$        $9\frac{3}{4}$        $9\frac{3}{4}$        $9\frac{3}{4}$        $9\frac{1}{4}$   
 $8$        $7\frac{2}{4}$        $8\frac{1}{4}$        $7\frac{3}{4}$        $8$        $7\frac{3}{4}$        $9\frac{1}{4}$        $8\frac{3}{4}$




- 3)  $7\frac{1}{2}$        $8\frac{1}{2}$        $6\frac{1}{2}$        $6\frac{1}{2}$        $6$        $7$        $6$        $8\frac{1}{2}$   
 $7\frac{1}{2}$        $8$        $6\frac{1}{2}$        $7$        $7$        $8$        $8\frac{1}{2}$        $7\frac{1}{2}$



- 4)  $3\frac{3}{4}$        $3$        $5\frac{3}{4}$        $5$        $5\frac{1}{4}$        $3$        $4\frac{1}{4}$        $4\frac{3}{4}$   
 $5$        $4\frac{3}{4}$        $4\frac{2}{4}$        $4\frac{2}{4}$        $5\frac{2}{4}$        $5\frac{3}{4}$        $4\frac{2}{4}$        $5\frac{2}{4}$



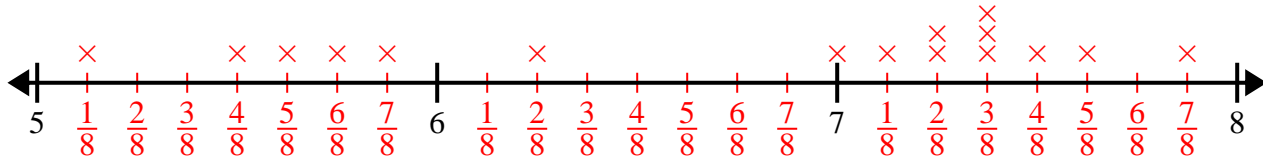
- 5)  $3$        $4\frac{2}{8}$        $2\frac{3}{8}$        $4\frac{1}{8}$        $2\frac{2}{8}$        $2\frac{6}{8}$        $4\frac{6}{8}$        $3\frac{5}{8}$   
 $3\frac{3}{8}$        $3\frac{6}{8}$        $2\frac{4}{8}$        $2$        $4$        $4\frac{2}{8}$        $2\frac{1}{8}$        $2\frac{2}{8}$



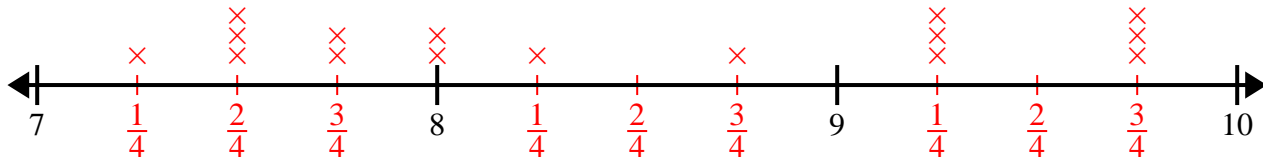


Cree y etiquete el gráfico de líneas usando el conjunto de números proporcionados.

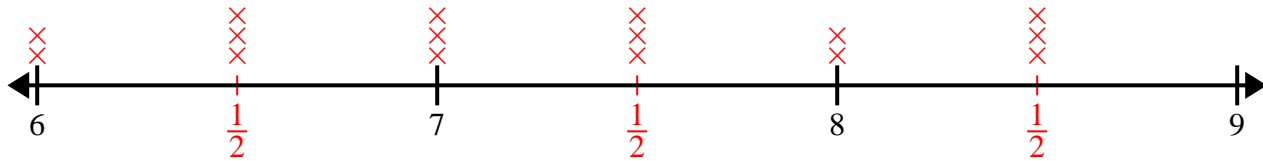
- 1)  $7$        $6\frac{2}{8}$        $7\frac{1}{8}$        $7\frac{2}{8}$        $7\frac{3}{8}$        $7\frac{5}{8}$        $7\frac{2}{8}$        $5\frac{4}{8}$   
 $5\frac{5}{8}$        $5\frac{6}{8}$        $7\frac{4}{8}$        $5\frac{1}{8}$        $7\frac{3}{8}$        $7\frac{3}{8}$        $7\frac{7}{8}$        $5\frac{7}{8}$



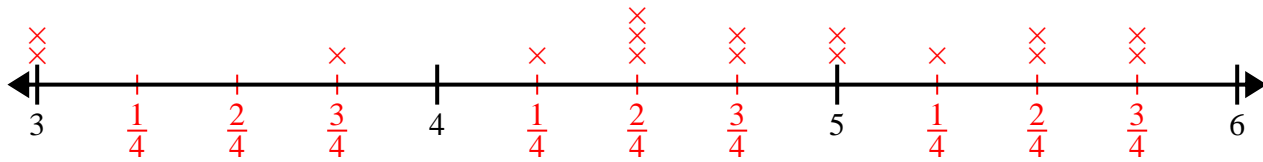
- 2)  $9\frac{1}{4}$        $7\frac{1}{4}$        $7\frac{2}{4}$        $7\frac{2}{4}$        $9\frac{3}{4}$        $9\frac{3}{4}$        $9\frac{3}{4}$        $9\frac{1}{4}$   
 $8$        $7\frac{2}{4}$        $8\frac{1}{4}$        $7\frac{3}{4}$        $8$        $7\frac{3}{4}$        $9\frac{1}{4}$        $8\frac{3}{4}$



- 3)  $7\frac{1}{2}$        $8\frac{1}{2}$        $6\frac{1}{2}$        $6\frac{1}{2}$        $6$        $7$        $6$        $8\frac{1}{2}$   
 $7\frac{1}{2}$        $8$        $6\frac{1}{2}$        $7$        $7$        $8$        $8\frac{1}{2}$        $7\frac{1}{2}$



- 4)  $3\frac{3}{4}$        $3$        $5\frac{3}{4}$        $5$        $5\frac{1}{4}$        $3$        $4\frac{1}{4}$        $4\frac{3}{4}$   
 $5$        $4\frac{3}{4}$        $4\frac{2}{4}$        $4\frac{2}{4}$        $5\frac{2}{4}$        $5\frac{3}{4}$        $4\frac{2}{4}$        $5\frac{2}{4}$



- 5)  $3$        $4\frac{2}{8}$        $2\frac{3}{8}$        $4\frac{1}{8}$        $2\frac{2}{8}$        $2\frac{6}{8}$        $4\frac{6}{8}$        $3\frac{5}{8}$   
 $3\frac{3}{8}$        $3\frac{6}{8}$        $2\frac{4}{8}$        $2$        $4$        $4\frac{2}{8}$        $2\frac{1}{8}$        $2\frac{2}{8}$

