


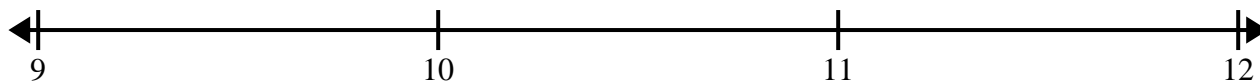


Cree y etiquete el gráfico de líneas usando el conjunto de números proporcionados.

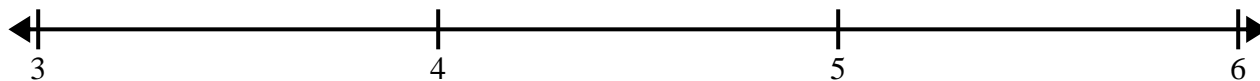
1) $3\frac{5}{8}$ $4\frac{6}{8}$ $4\frac{5}{8}$ $2\frac{7}{8}$ $3\frac{1}{8}$ $2\frac{2}{8}$ $2\frac{1}{8}$ $3\frac{7}{8}$
 $3\frac{5}{8}$ $3\frac{5}{8}$ $4\frac{1}{8}$ $2\frac{6}{8}$ $2\frac{3}{8}$ $3\frac{2}{8}$ $3\frac{2}{8}$ 3



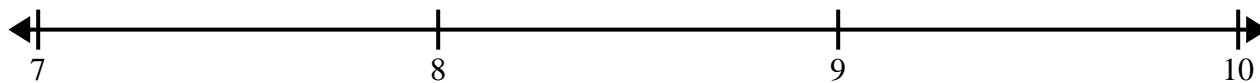
2) 11 9 9 10 $9\frac{1}{2}$ $10\frac{1}{2}$ $10\frac{1}{2}$ $9\frac{1}{2}$
 $11\frac{1}{2}$ $10\frac{1}{2}$ 9 $9\frac{1}{2}$ 10 10 $11\frac{1}{2}$ $11\frac{1}{2}$




3) $3\frac{2}{4}$ 3 $3\frac{3}{4}$ $4\frac{3}{4}$ 4 $3\frac{2}{4}$ $4\frac{1}{4}$ $5\frac{2}{4}$
 $3\frac{1}{4}$ $3\frac{1}{4}$ $4\frac{3}{4}$ $4\frac{1}{4}$ $3\frac{3}{4}$ 3 5 $5\frac{2}{4}$



4) 7 $8\frac{1}{2}$ $9\frac{1}{2}$ 7 9 8 $9\frac{1}{2}$ $9\frac{1}{2}$
 $8\frac{1}{2}$ 9 9 8 $8\frac{1}{2}$ 8 $7\frac{1}{2}$ 7



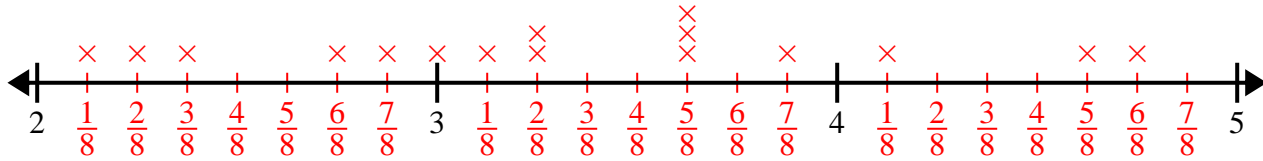
5) $2\frac{2}{4}$ $3\frac{3}{4}$ $4\frac{3}{4}$ $2\frac{2}{4}$ $4\frac{3}{4}$ $4\frac{1}{4}$ $4\frac{2}{4}$ $4\frac{3}{4}$
 $2\frac{3}{4}$ $4\frac{2}{4}$ 3 $2\frac{2}{4}$ 2 2 2 3



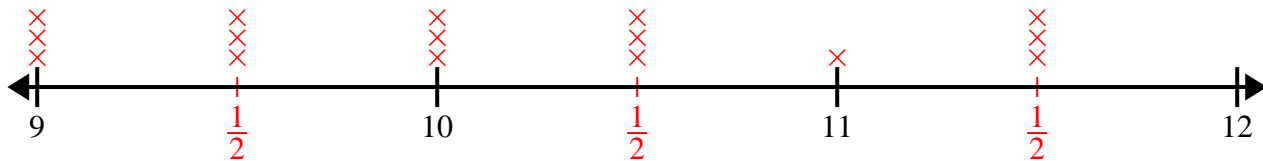


Cree y etiqúete el gráfico de líneas usando el conjunto de números proporcionados.

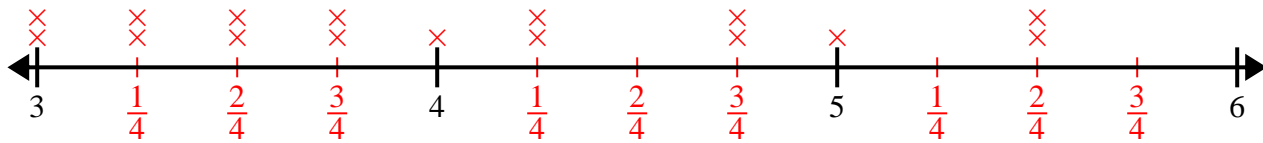
- 1) $3\frac{5}{8}$ $4\frac{6}{8}$ $4\frac{5}{8}$ $2\frac{7}{8}$ $3\frac{1}{8}$ $2\frac{2}{8}$ $2\frac{1}{8}$ $3\frac{7}{8}$
 $3\frac{5}{8}$ $3\frac{5}{8}$ $4\frac{1}{8}$ $2\frac{6}{8}$ $2\frac{3}{8}$ $3\frac{2}{8}$ $3\frac{2}{8}$ 3



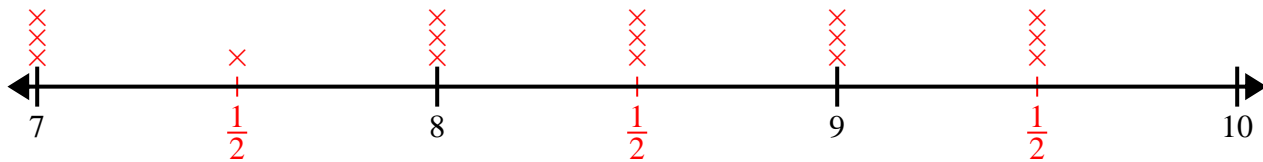
- 2) 11 9 9 10 $9\frac{1}{2}$ $10\frac{1}{2}$ $10\frac{1}{2}$ $9\frac{1}{2}$
 $11\frac{1}{2}$ $10\frac{1}{2}$ 9 $9\frac{1}{2}$ 10 10 $11\frac{1}{2}$ $11\frac{1}{2}$



- 3) $3\frac{2}{4}$ 3 $3\frac{3}{4}$ $4\frac{3}{4}$ 4 $3\frac{2}{4}$ $4\frac{1}{4}$ $5\frac{2}{4}$
 $3\frac{1}{4}$ $3\frac{1}{4}$ $4\frac{3}{4}$ $4\frac{1}{4}$ $3\frac{3}{4}$ 3 5 $5\frac{2}{4}$



- 4) 7 $8\frac{1}{2}$ $9\frac{1}{2}$ 7 9 8 $9\frac{1}{2}$ $9\frac{1}{2}$
 $8\frac{1}{2}$ 9 9 8 $8\frac{1}{2}$ 8 $7\frac{1}{2}$ 7



- 5) $2\frac{2}{4}$ $3\frac{3}{4}$ $4\frac{3}{4}$ $2\frac{2}{4}$ $4\frac{3}{4}$ $4\frac{1}{4}$ $4\frac{2}{4}$ $4\frac{3}{4}$
 $2\frac{3}{4}$ $4\frac{2}{4}$ 3 $2\frac{2}{4}$ 2 2 2 3

