


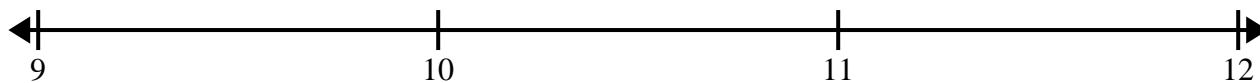


Cree y etiquete el gráfico de líneas usando el conjunto de números proporcionados.


- 1) $3\frac{7}{8}$ 4 $3\frac{3}{8}$ 4 $3\frac{6}{8}$ $3\frac{1}{8}$ $2\frac{6}{8}$ $2\frac{1}{8}$
 $2\frac{1}{8}$ 3 $3\frac{3}{8}$ $2\frac{5}{8}$ $3\frac{7}{8}$ $2\frac{5}{8}$ $2\frac{3}{8}$ $4\frac{6}{8}$



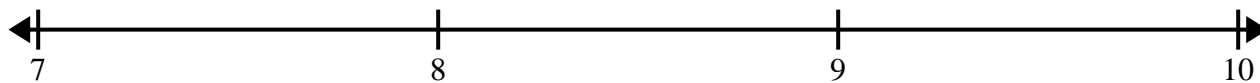
- 2) $10\frac{1}{2}$ 9 $11\frac{1}{2}$ $11\frac{1}{2}$ $9\frac{1}{2}$ 9 9 10
 10 $10\frac{1}{2}$ 10 11 $10\frac{1}{2}$ $9\frac{1}{2}$ $11\frac{1}{2}$ $9\frac{1}{2}$




- 3) 7 $8\frac{1}{2}$ 6 7 8 7 $6\frac{1}{2}$ $7\frac{1}{2}$
 $6\frac{1}{2}$ $6\frac{1}{2}$ 6 $8\frac{1}{2}$ 6 $7\frac{1}{2}$ 8 8



- 4) $7\frac{2}{8}$ $9\frac{4}{8}$ $7\frac{6}{8}$ $9\frac{5}{8}$ $9\frac{3}{8}$ $9\frac{1}{8}$ $7\frac{3}{8}$ $7\frac{1}{8}$
 $8\frac{1}{8}$ $8\frac{4}{8}$ $9\frac{7}{8}$ 8 7 7 8 $9\frac{3}{8}$



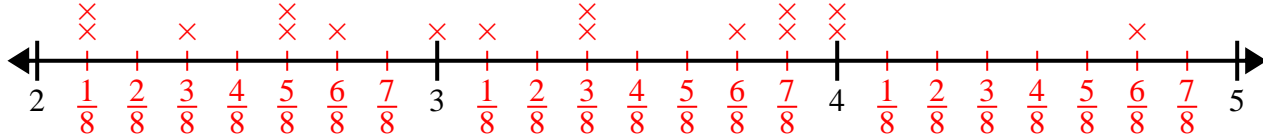
- 5) $2\frac{3}{4}$ $3\frac{1}{4}$ $4\frac{3}{4}$ $3\frac{1}{4}$ 3 3 $2\frac{2}{4}$ 4
 $2\frac{2}{4}$ $3\frac{3}{4}$ 2 $4\frac{1}{4}$ $4\frac{3}{4}$ $4\frac{3}{4}$ 3 $2\frac{3}{4}$



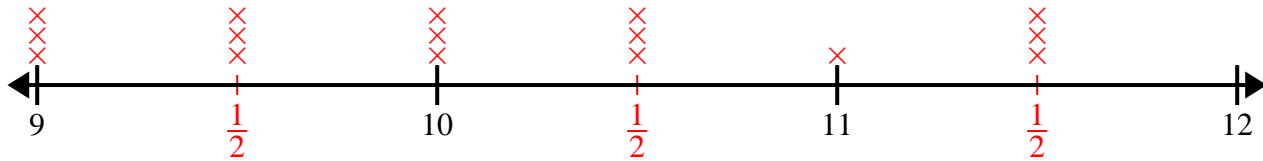


Cree y etiquete el gráfico de líneas usando el conjunto de números proporcionados.

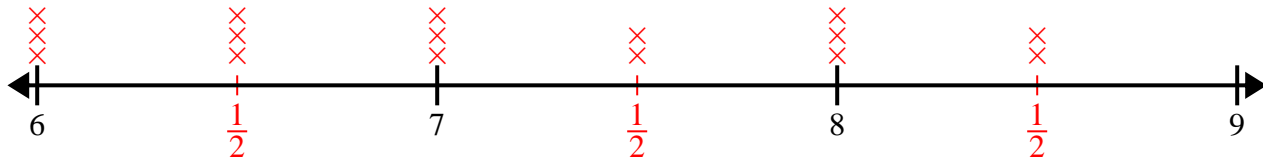
- 1) $3\frac{7}{8}$ 4 $3\frac{3}{8}$ 4 $3\frac{6}{8}$ $3\frac{1}{8}$ $2\frac{6}{8}$ $2\frac{1}{8}$
 $2\frac{1}{8}$ 3 $3\frac{3}{8}$ $2\frac{5}{8}$ $3\frac{7}{8}$ $2\frac{5}{8}$ $2\frac{3}{8}$ $4\frac{6}{8}$



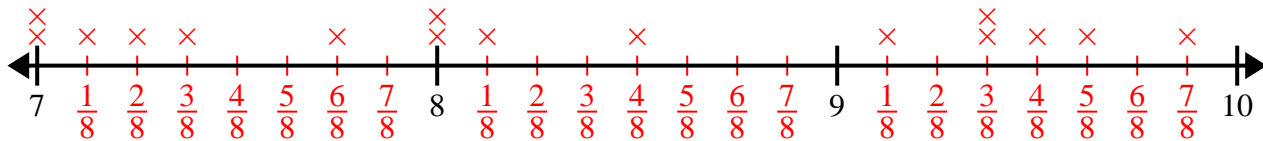
- 2) $10\frac{1}{2}$ 9 $11\frac{1}{2}$ $11\frac{1}{2}$ $9\frac{1}{2}$ 9 9 10
 10 $10\frac{1}{2}$ 10 11 $10\frac{1}{2}$ $9\frac{1}{2}$ $11\frac{1}{2}$ $9\frac{1}{2}$



- 3) 7 $8\frac{1}{2}$ 6 7 8 7 $6\frac{1}{2}$ $7\frac{1}{2}$
 $6\frac{1}{2}$ $6\frac{1}{2}$ 6 $8\frac{1}{2}$ 6 $7\frac{1}{2}$ 8 8



- 4) $7\frac{2}{8}$ $9\frac{4}{8}$ $7\frac{6}{8}$ $9\frac{5}{8}$ $9\frac{3}{8}$ $9\frac{1}{8}$ $7\frac{3}{8}$ $7\frac{1}{8}$
 $8\frac{1}{8}$ $8\frac{4}{8}$ $9\frac{7}{8}$ 8 7 7 8 $9\frac{3}{8}$



- 5) $2\frac{3}{4}$ $3\frac{1}{4}$ $4\frac{3}{4}$ $3\frac{1}{4}$ 3 3 $2\frac{2}{4}$ 4
 $2\frac{2}{4}$ $3\frac{3}{4}$ 2 $4\frac{1}{4}$ $4\frac{3}{4}$ $4\frac{3}{4}$ 3 $2\frac{3}{4}$

