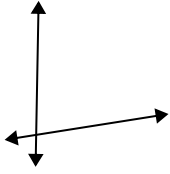




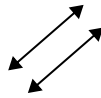
Utilice 'paralelo', 'perpendicular' (perpendicular) o 'inter' (intersección) para describir las líneas.

Respuestas

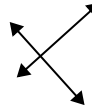
1)



2)



3)



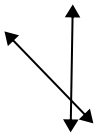
1. _____

2. _____

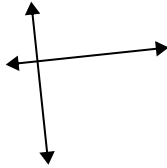
3. _____

4. _____

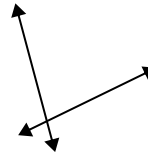
4)



5)



6)



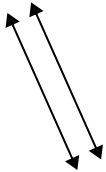
5. _____

6. _____

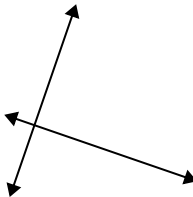
7. _____

8. _____

7)



8)



9)



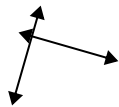
9. _____

10. _____

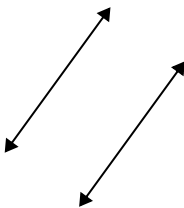
11. _____

12. _____

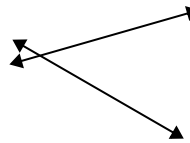
10)



11)



12)

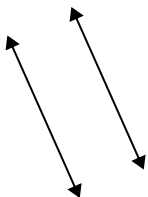


13. _____

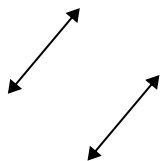
14. _____

15. _____

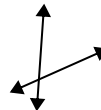
13)



14)



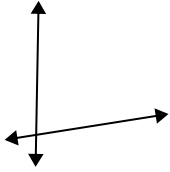
15)



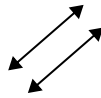


Utilice 'paralelo', 'perpendicular' (perpendicular) o 'inter' (intersección) para describir las líneas.

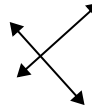
1)



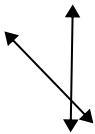
2)



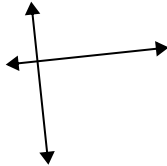
3)



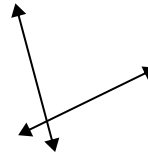
4)



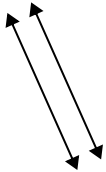
5)



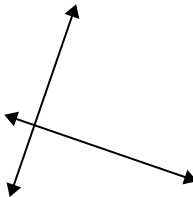
6)



7)



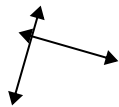
8)



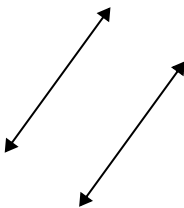
9)



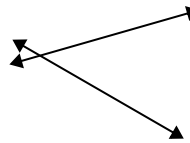
10)



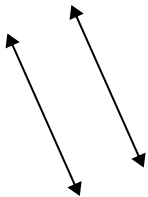
11)



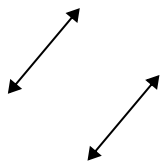
12)



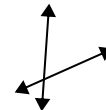
13)



14)



15)



Respuestas

1. inter

2. paralelo

3. perp & inter

4. inter

5. perp & inter

6. inter

7. paralelo

8. perp & inter

9. perp & inter

10. perp & inter

11. paralelo

12. inter

13. paralelo

14. paralelo

15. inter