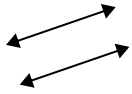




Utilice 'paralelo', 'perpendicular' (perpendicular) o 'inter' (intersección) para describir las líneas.

Respuestas

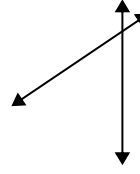
1)



2)



3)



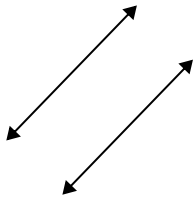
1. _____

2. _____

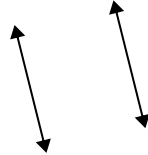
3. _____

4. _____

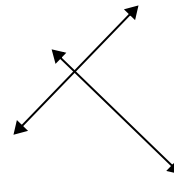
4)



5)



6)



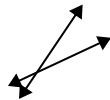
5. _____

6. _____

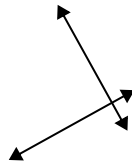
7. _____

8. _____

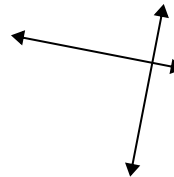
7)



8)



9)



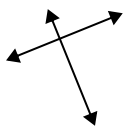
9. _____

10. _____

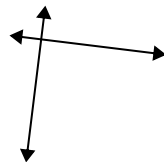
11. _____

12. _____

10)



11)



12)

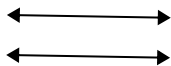


13. _____

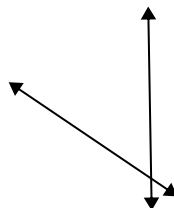
14. _____

15. _____

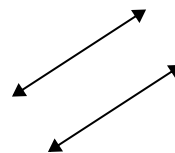
13)



14)



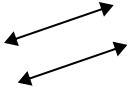
15)





Utilice 'paralelo', 'perpendicular' (perpendicular) o 'inter' (intersección) para describir las líneas.

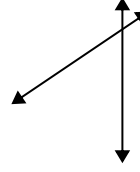
1)



2)



3)



1.

paralelo

2.

inter

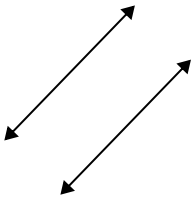
3.

inter

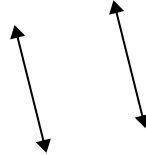
4.

paralelo

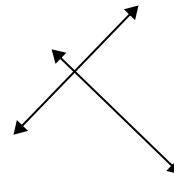
4)



5)



6)



5.

paralelo

6.

perp & inter

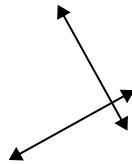
7.

inter

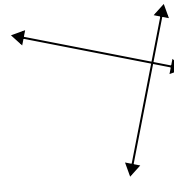
7)



8)



9)



9.

perp & inter

10.

perp & inter

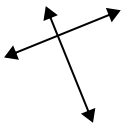
11.

perp & inter

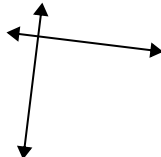
12.

inter

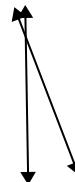
10)



11)



12)



13.

paralelo


14.

inter

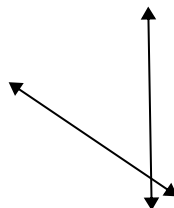
15.

paralelo

13)



14)



15)

