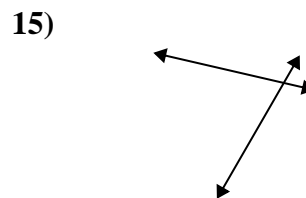
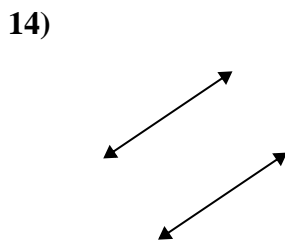
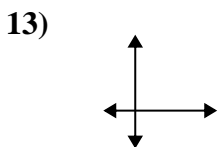
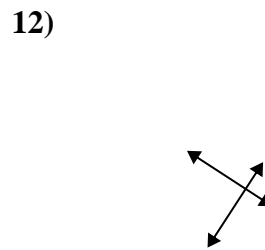
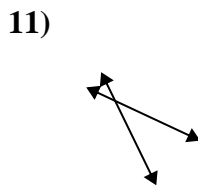
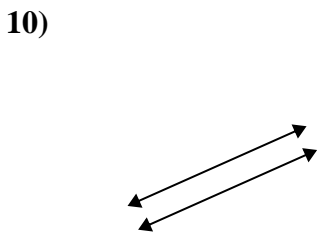
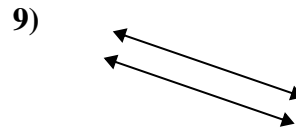
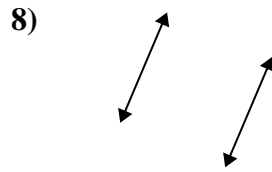
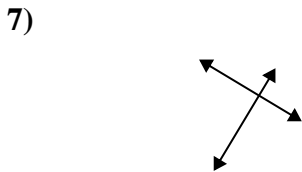
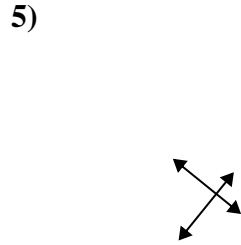
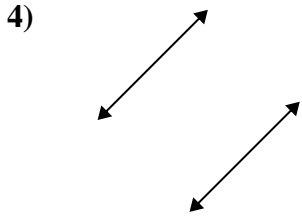
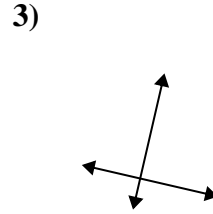
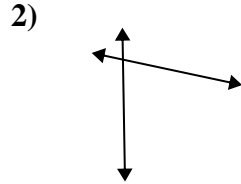
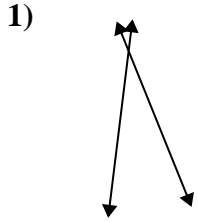




Utilice 'paralelo', 'perpendicular' (perpendicular) o 'inter' (intersección) para describir las líneas.

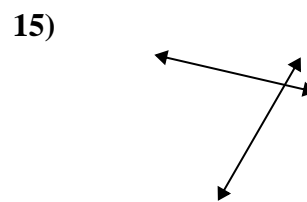
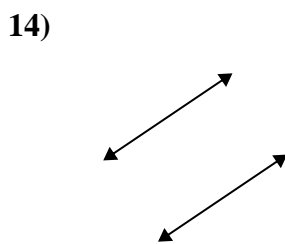
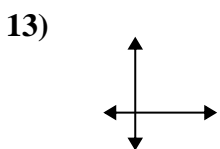
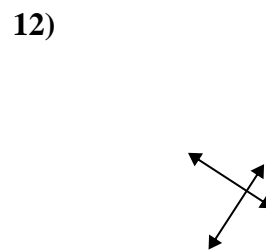
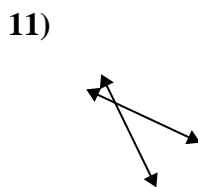
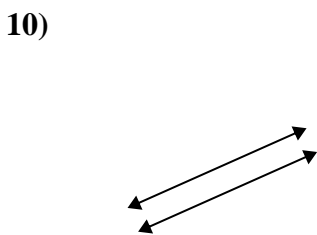
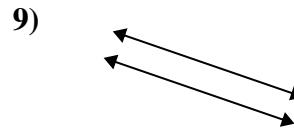
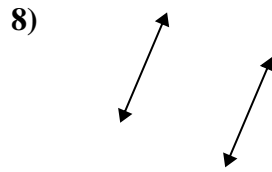
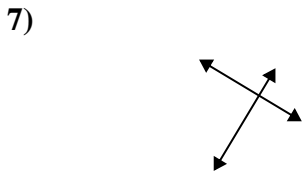
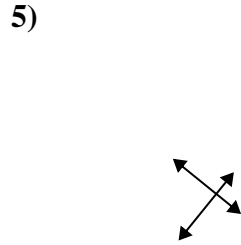
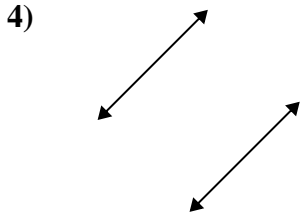
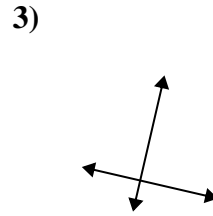
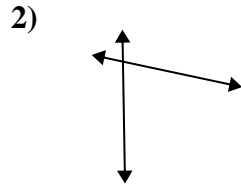
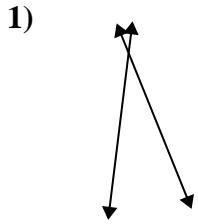
**Respuestas**



1. \_\_\_\_\_
2. \_\_\_\_\_
3. \_\_\_\_\_
4. \_\_\_\_\_
5. \_\_\_\_\_
6. \_\_\_\_\_
7. \_\_\_\_\_
8. \_\_\_\_\_
9. \_\_\_\_\_
10. \_\_\_\_\_
11. \_\_\_\_\_
12. \_\_\_\_\_
13. \_\_\_\_\_
14. \_\_\_\_\_
15. \_\_\_\_\_



Utilice 'paralelo', 'perpendicular' (perpendicular) o 'inter' (intersección) para describir las líneas.



Respuestas

1. inter

2. inter

3. perp & inter

4. paralelo

5. perp & inter

6. inter

7. perp & inter

8. paralelo

9. paralelo

10. paralelo

11. inter

12. perp & inter

13. perp & inter

14. paralelo

15. inter