




Medir el ancho y alto de cada bloque en pulgadas y en centímetros

Ej)



Respuestas

Ej. 2 1/2 1 6.4 2.5


1. _____

2. _____


3. _____

4. _____


1)



2)



3)



4)






Medir el ancho y alto de cada bloque en pulgadas y en centímetros


Ej)




1)



2)



3)



4)



Respuestas

Ej. 2 1/2 **1** 6.4 2.5

1. 4 1/2 1 1/2 11.4 **3.8**

2. **3** 1 7.6 2.5

3. **5** 1 1/2 12.7 **3.8**

4. **2** 0 1/2 **5.1** **1.3**