







Medir el ancho y alto de cada bloque en pulgadas y en centímetros



Respuestas

Ej. 3 1/2 0 1/2 8.9 1.3

1. _____

2. _____

3. _____

4. _____




Medir el ancho y alto de cada bloque en pulgadas y en centímetros

Ej)




1)




2)



3)



4)



Respuestas

Ej. 3 1/2 0 1/2 8.9 1.3

1. 1 1 1/2 2.5 3.8

2. 1 1/2 1 3.8 2.5

3. 5 1/2 1 1/2 14 3.8

4. 5 1 12.7 2.5