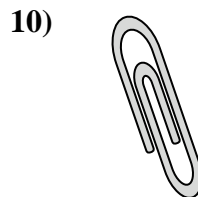
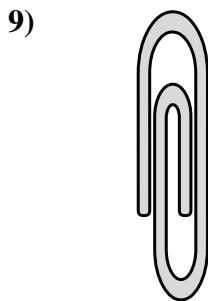
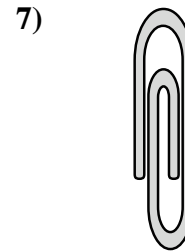
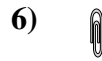
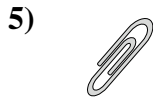
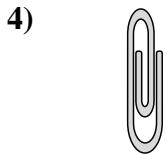
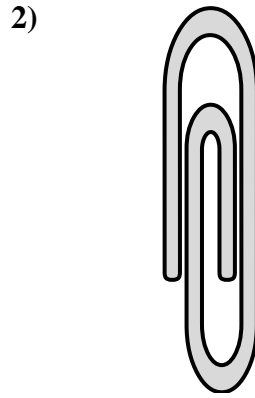
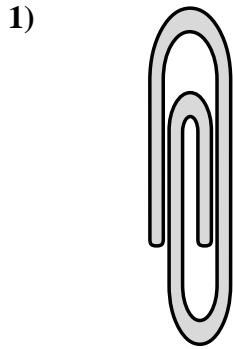
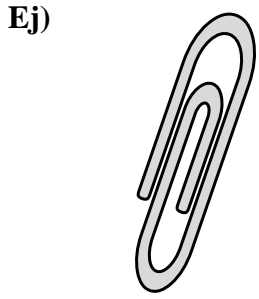






Mida cada ITEM punta a punta y luego coloque sus resultados en la gráfica de línea.

**Respuestas**



- Ej. 1 1/2
- 1. 1 3/4
- 2. 2
- 3. 1
- 4. 3/4
- 5. 1/2
- 6. 1/4
- 7. 1 1/4
- 8. 1/4
- 9. 1 1/2
- 10. 1
- 11. 1/2

Line Plot							
X	X		X		X		
X	X	X	X	X	X	X	X
1/4	1/2	3/4	1	1 1/4	1 1/2	1 3/4	2