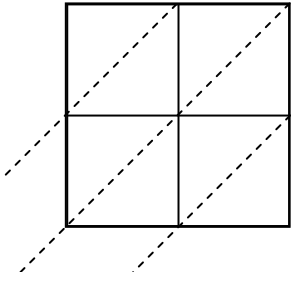


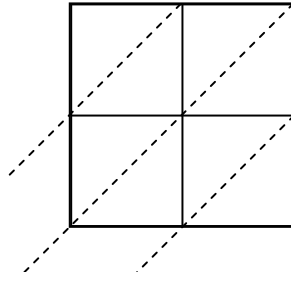


Usar la multiplicación en cuadrícula para resolver cada problema.

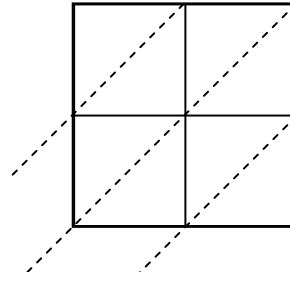
1)  $35 \times 11 =$



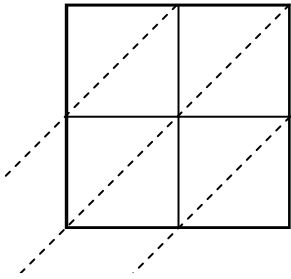
2)  $41 \times 55 =$



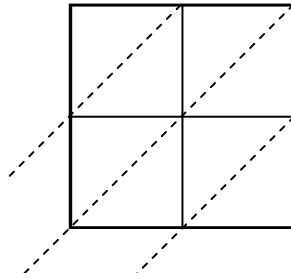
3)  $35 \times 39 =$



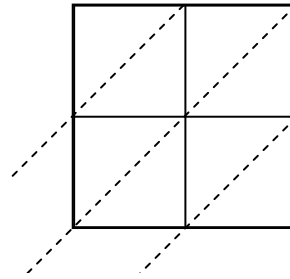
4)  $77 \times 58 =$



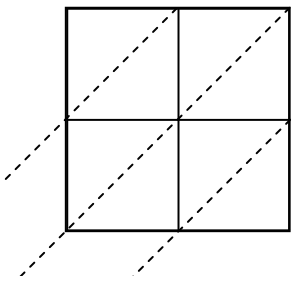
5)  $62 \times 51 =$



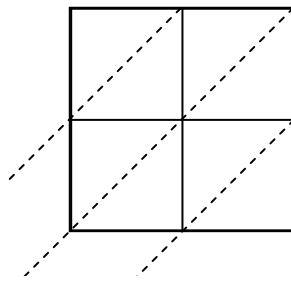
6)  $68 \times 18 =$



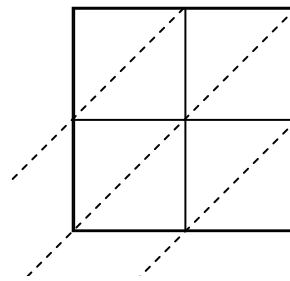
7)  $60 \times 32 =$



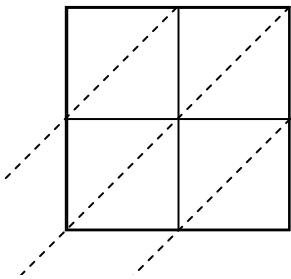
8)  $39 \times 90 =$



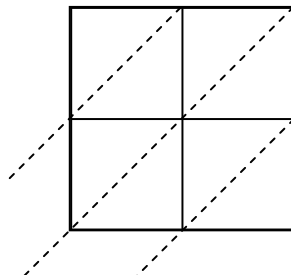
9)  $31 \times 95 =$



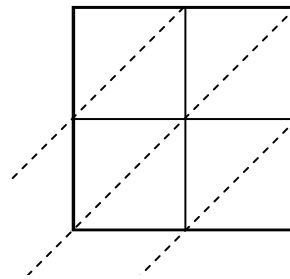
10)  $46 \times 83 =$



11)  $59 \times 59 =$



12)  $36 \times 62 =$



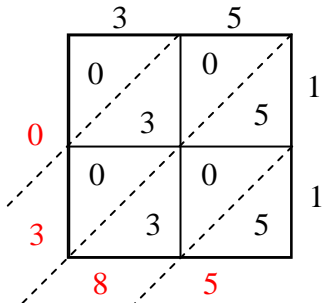
**Respuestas**

1. \_\_\_\_\_
2. \_\_\_\_\_
3. \_\_\_\_\_
4. \_\_\_\_\_
5. \_\_\_\_\_
6. \_\_\_\_\_
7. \_\_\_\_\_
8. \_\_\_\_\_
9. \_\_\_\_\_
10. \_\_\_\_\_
11. \_\_\_\_\_
12. \_\_\_\_\_

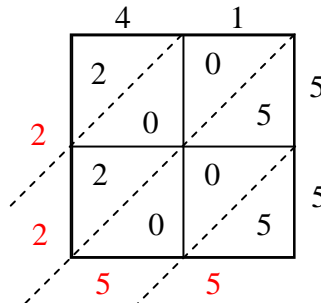


Usar la multiplicación en cuadrícula para resolver cada problema.

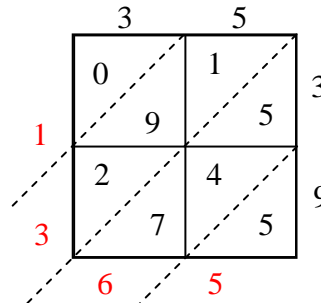
1)  $35 \times 11 =$



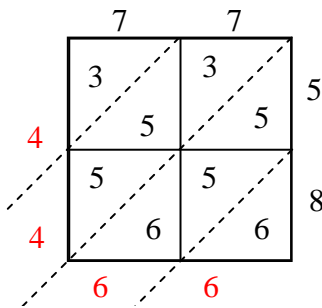
2)  $41 \times 55 =$



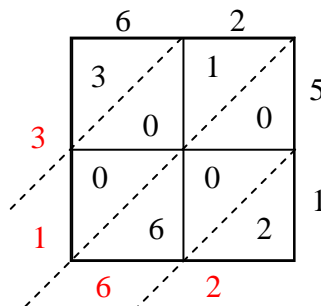
3)  $35 \times 39 =$



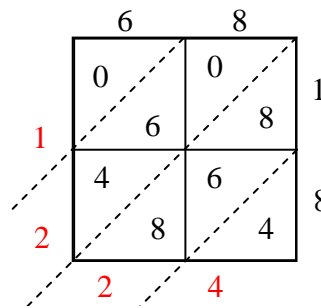
4)  $77 \times 58 =$



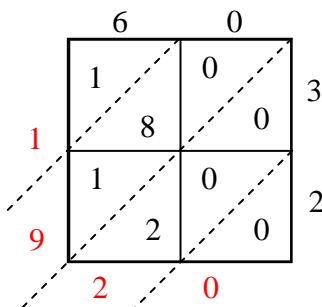
5)  $62 \times 51 =$



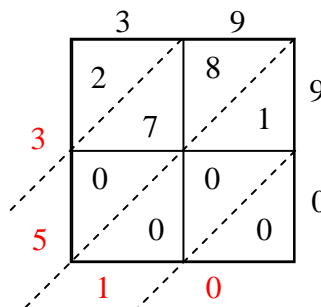
6)  $68 \times 18 =$



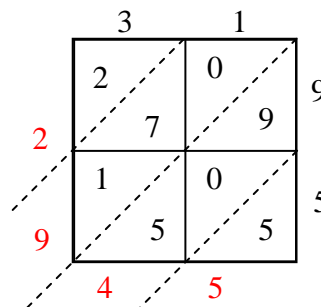
7)  $60 \times 32 =$



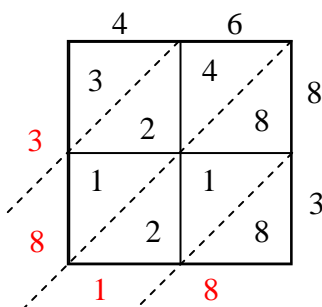
8)  $39 \times 90 =$



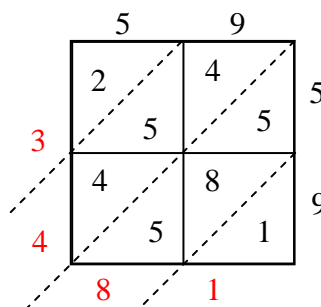
9)  $31 \times 95 =$



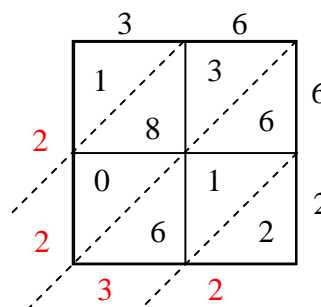
10)  $46 \times 83 =$



11)  $59 \times 59 =$



12)  $36 \times 62 =$



**Respuestas**

1. 385
2. 2,255
3. 1,365
4. 4,466
5. 3,162
6. 1,224
7. 1,920
8. 3,510
9. 2,945
10. 3,818
11. 3,481
12. 2,232