



Usar la multiplicación en cuadrícula para resolver cada problema.

1) $18 \times 35 =$



2) $53 \times 85 =$



3) $76 \times 55 =$



4) $52 \times 57 =$



5) $80 \times 99 =$



6) $38 \times 19 =$



7) $93 \times 53 =$



8) $27 \times 83 =$



9) $72 \times 60 =$



10) $64 \times 16 =$



11) $38 \times 21 =$



12) $43 \times 70 =$



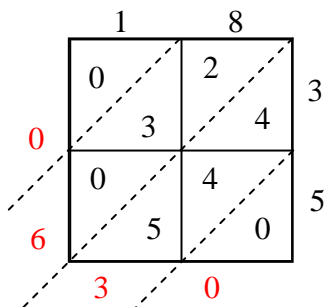
Respuestas

1. _____
2. _____
3. _____
4. _____
5. _____
6. _____
7. _____
8. _____
9. _____
10. _____
11. _____
12. _____

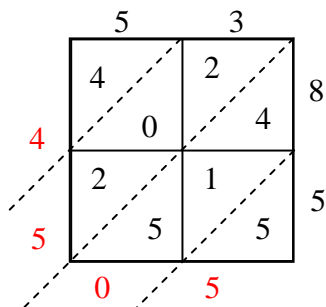


Usar la multiplicación en cuadrícula para resolver cada problema.

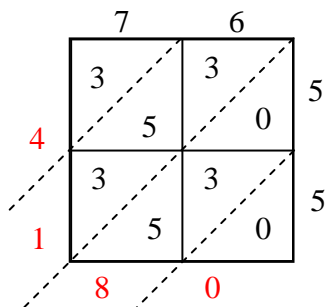
1) $18 \times 35 =$



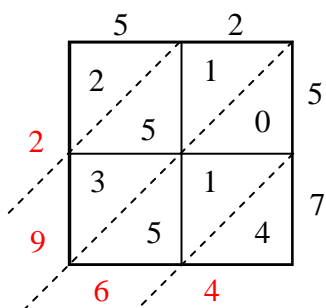
2) $53 \times 85 =$



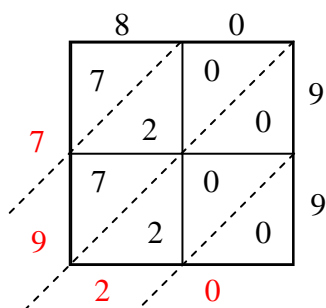
3) $76 \times 55 =$



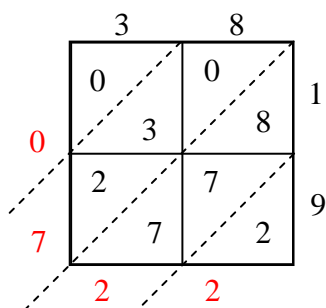
4) $52 \times 57 =$



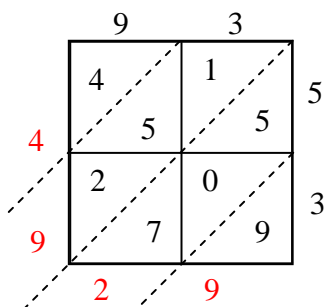
5) $80 \times 99 =$



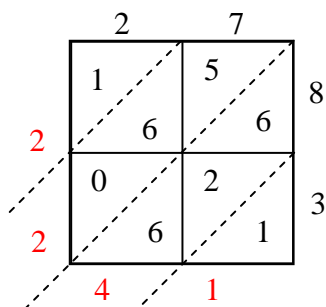
6) $38 \times 19 =$



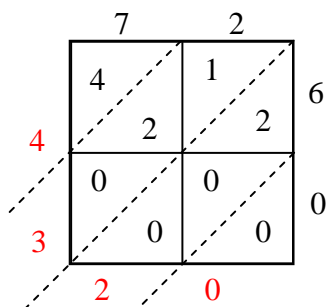
7) $93 \times 53 =$



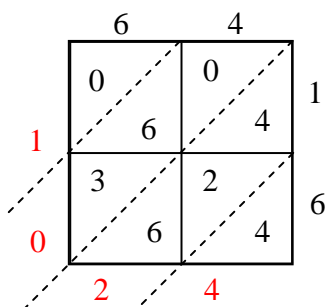
8) $27 \times 83 =$



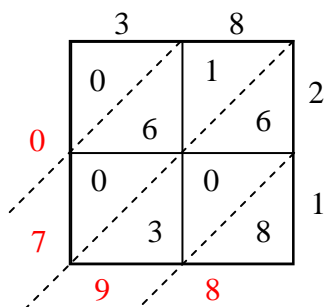
9) $72 \times 60 =$



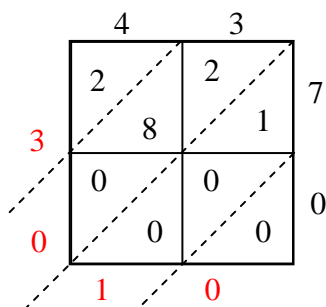
10) $64 \times 16 =$



11) $38 \times 21 =$



12) $43 \times 70 =$



Respuestas

1. **630**

2. **4,505**

3. **4,180**

4. **2,964**

5. **7,920**

6. **722**

7. **4,929**

8. **2,241**

9. **4,320**

10. **1,024**

11. **798**

12. **3,010**