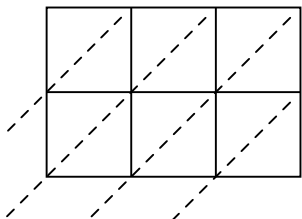


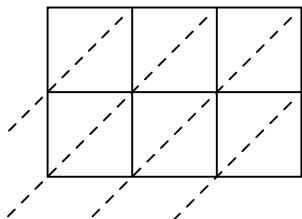


Usa la multiplicación en cuadrícula para resolver cada problema.

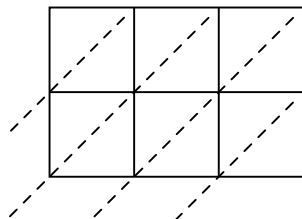
1) $828 \times 35 =$



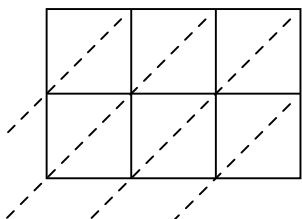
2) $953 \times 85 =$



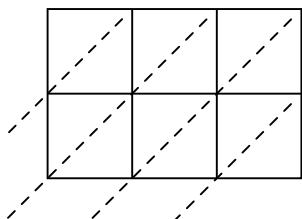
3) $706 \times 55 =$



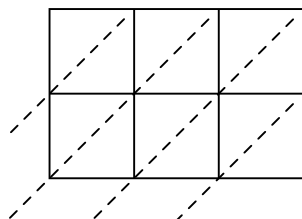
4) $862 \times 57 =$



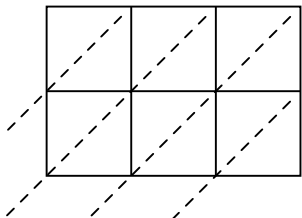
5) $350 \times 99 =$



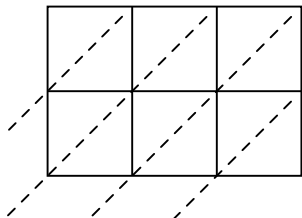
6) $488 \times 19 =$



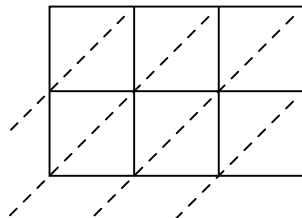
7) $543 \times 53 =$



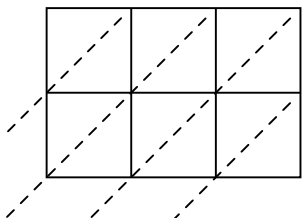
8) $387 \times 83 =$



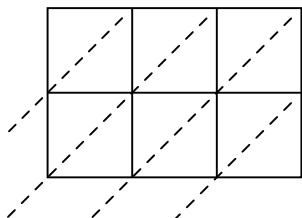
9) $702 \times 60 =$



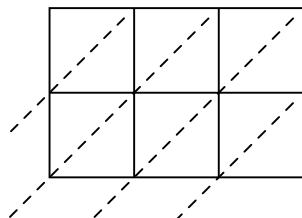
10) $244 \times 16 =$



11) $848 \times 21 =$



12) $673 \times 70 =$



Respuestas

1. _____

2. _____

3. _____

4. _____

5. _____

6. _____

7. _____

8. _____

9. _____

10. _____

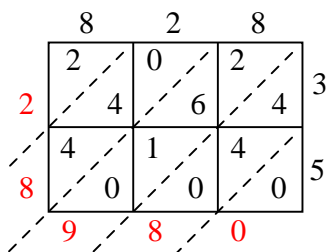
11. _____

12. _____

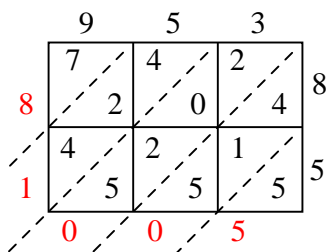


Usa la multiplicación en cuadrícula para resolver cada problema.

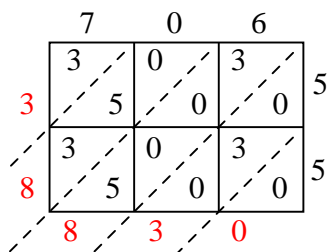
1) $828 \times 35 =$



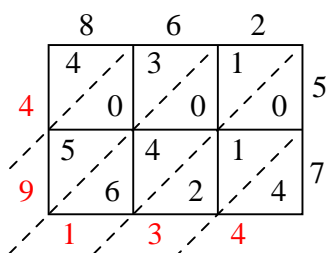
2) $953 \times 85 =$



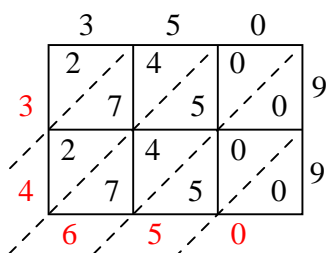
3) $706 \times 55 =$



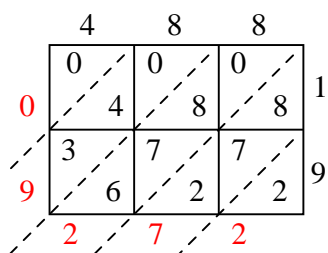
4) $862 \times 57 =$



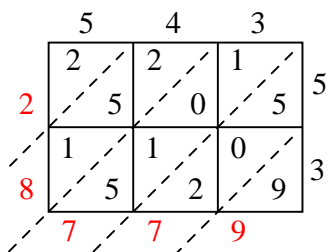
5) $350 \times 99 =$



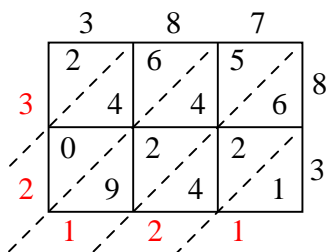
6) $488 \times 19 =$



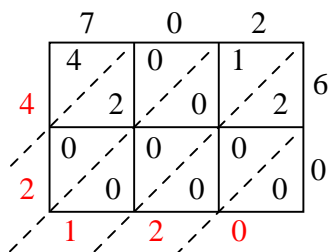
7) $543 \times 53 =$



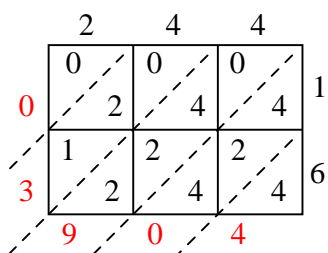
8) $387 \times 83 =$



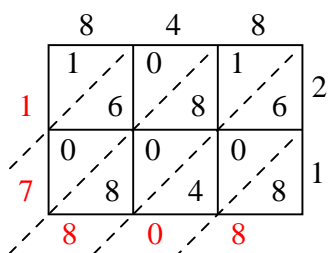
9) $702 \times 60 =$



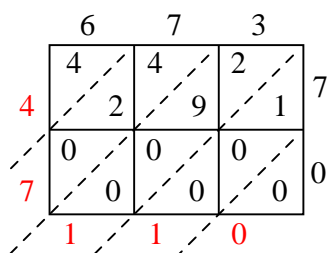
10) $244 \times 16 =$



11) $848 \times 21 =$



12) $673 \times 70 =$



Respuestas

1. 28,980
2. 81,005
3. 38,830
4. 49,134
5. 34,650
6. 9,272
7. 28,779
8. 32,121
9. 42,120
10. 3,904
11. 17,808
12. 47,110