

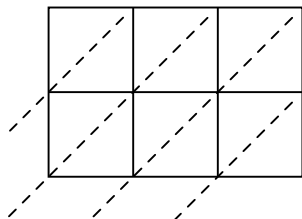


Usa la multiplicación en cuadrícula para resolver cada problema.

1) $617 \times 36 =$



2) $902 \times 60 =$



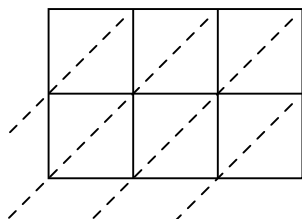
3) $936 \times 11 =$



4) $506 \times 97 =$



5) $375 \times 92 =$



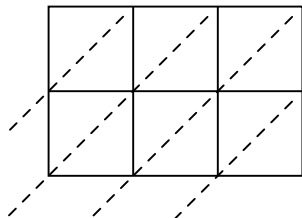
6) $944 \times 94 =$



7) $773 \times 32 =$



8) $444 \times 54 =$



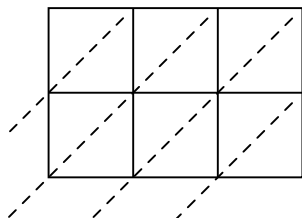
9) $950 \times 35 =$



10) $608 \times 49 =$



11) $289 \times 74 =$



12) $530 \times 32 =$



Respuestas

1. _____

2. _____

3. _____

4. _____

5. _____

6. _____

7. _____

8. _____

9. _____

10. _____

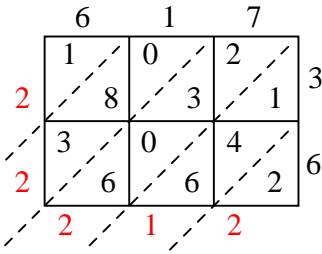
11. _____

12. _____

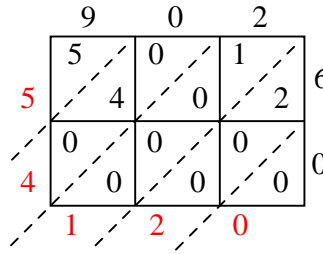


Usa la multiplicación en cuadrícula para resolver cada problema.

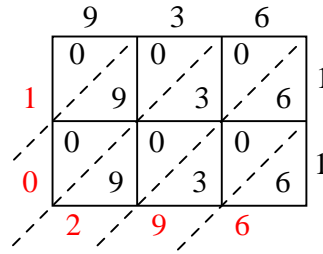
1) $617 \times 36 =$



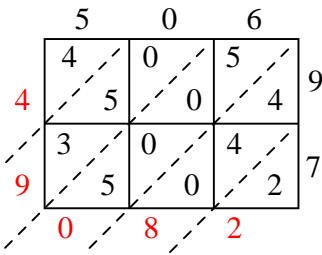
2) $902 \times 60 =$



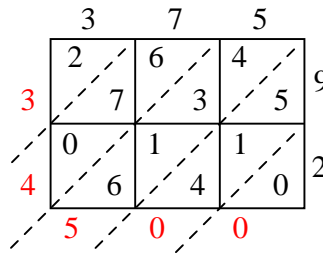
3) $936 \times 11 =$



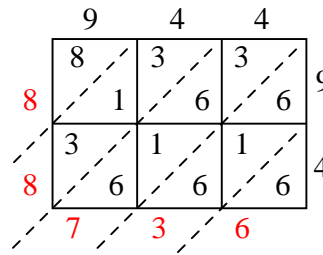
4) $506 \times 97 =$



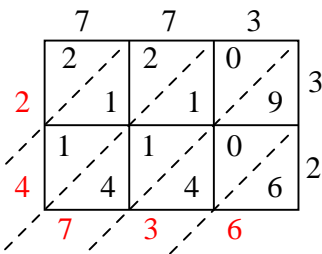
5) $375 \times 92 =$



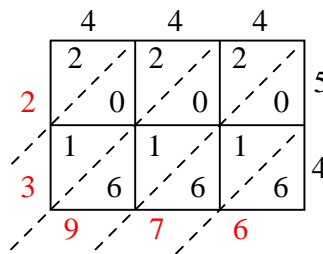
6) $944 \times 94 =$



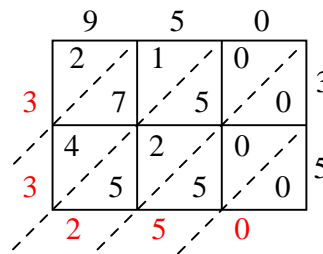
7) $773 \times 32 =$



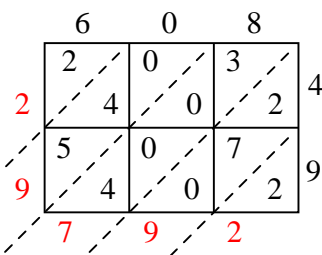
8) $444 \times 54 =$



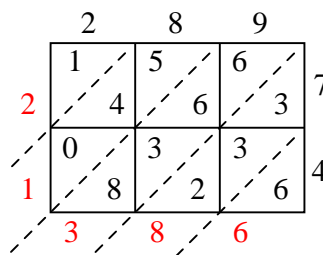
9) $950 \times 35 =$



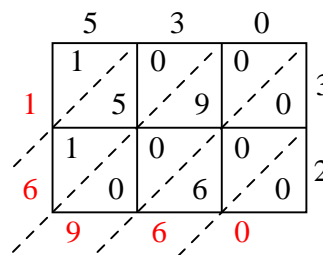
10) $608 \times 49 =$



11) $289 \times 74 =$



12) $530 \times 32 =$



Respuestas

1. 22,212
2. 54,120
3. 10,296
4. 49,082
5. 34,500
6. 88,736
7. 24,736
8. 23,976
9. 33,250
10. 29,792
11. 21,386
12. 16,960