



Usa la multiplicación en cuadrícula para resolver cada problema.

1) $133 \times 55 =$



2) $680 \times 53 =$



3) $362 \times 51 =$



4) $703 \times 44 =$



5) $560 \times 57 =$



6) $637 \times 90 =$



7) $711 \times 62 =$



8) $361 \times 36 =$



9) $743 \times 53 =$



10) $344 \times 41 =$



11) $279 \times 94 =$



12) $862 \times 89 =$



Respuestas

1. _____

2. _____

3. _____

4. _____

5. _____

6. _____

7. _____

8. _____

9. _____

10. _____

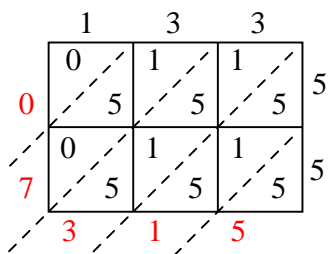
11. _____

12. _____

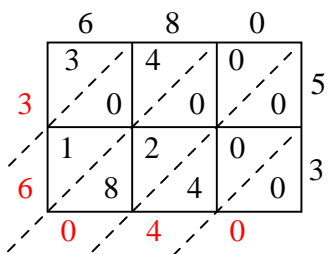


Usa la multiplicación en cuadrícula para resolver cada problema.

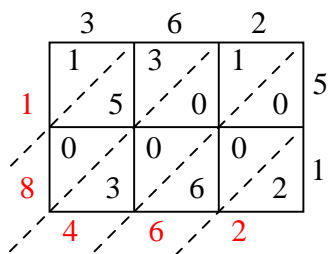
1) $133 \times 55 =$



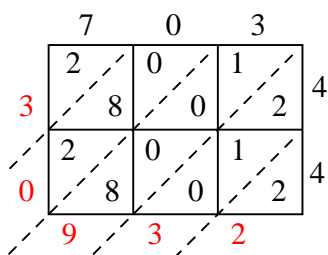
2) $680 \times 53 =$



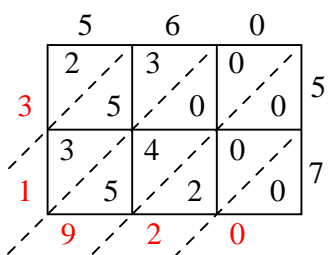
3) $362 \times 51 =$



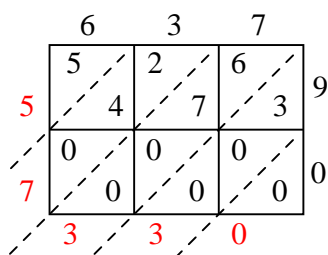
4) $703 \times 44 =$



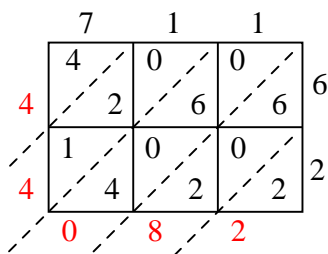
5) $560 \times 57 =$



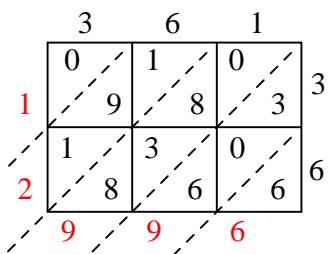
6) $637 \times 90 =$



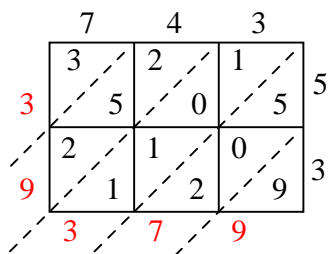
7) $711 \times 62 =$



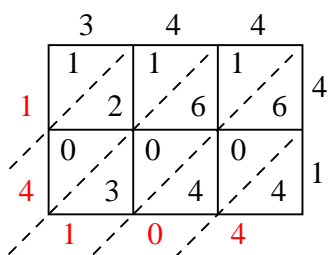
8) $361 \times 36 =$



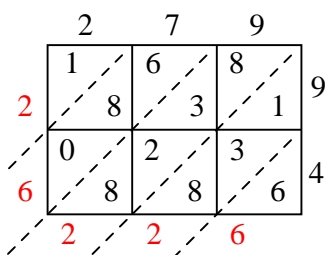
9) $743 \times 53 =$



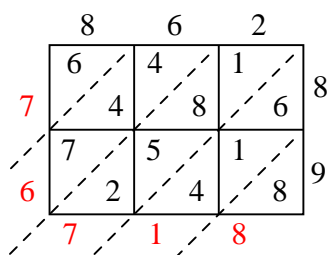
10) $344 \times 41 =$



11) $279 \times 94 =$



12) $862 \times 89 =$



Respuestas

1. **7,315**

2. **36,040**

3. **18,462**

4. **30,932**

5. **31,920**

6. **57,330**

7. **44,082**

8. **12,996**

9. **39,379**

10. **14,104**

11. **26,226**

12. **76,718**