




Escribir una ecuación para expresar los grupos y después encontrar el número de figuras.

Respuestas


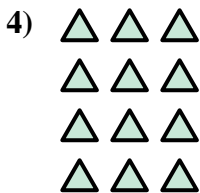



Ej. $3 \times 4 = 12$

1. _____

2. _____

3. _____

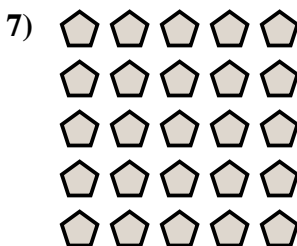


4. _____

5. _____

6. _____

7. _____

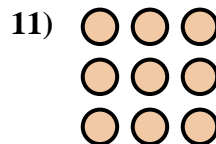
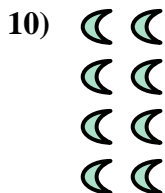



8. _____

9. _____

10. _____

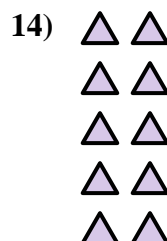
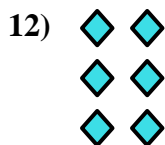
11. _____



12. _____

13. _____


14. _____



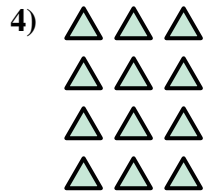



Escribir una ecuación para expresar los grupos y después encontrar el número de figuras.

Respuestas



Ej. $3 \times 4 = 12$



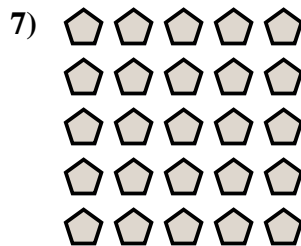
1. $2 \times 5 = 10$

2. $3 \times 5 = 15$

3. $4 \times 5 = 20$

4. $4 \times 3 = 12$

5. $5 \times 3 = 15$

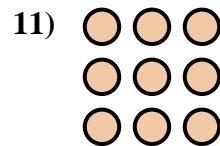
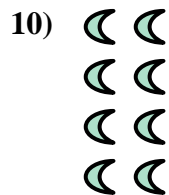



6. $2 \times 3 = 6$

7. $5 \times 5 = 25$

8. $2 \times 2 = 4$

9. $4 \times 4 = 16$



10. $4 \times 2 = 8$

11. $3 \times 3 = 9$

12. $3 \times 2 = 6$

13. $2 \times 4 = 8$

14. $5 \times 2 = 10$

