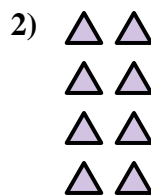
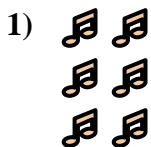
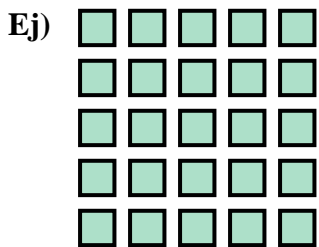




Escribir una ecuación para expresar los grupos y después encontrar el número de figuras.

Respuestas



Ej. $5 \times 5 = 25$

1. _____

2. _____

3. _____

4. _____

5. _____

6. _____

7. _____

8. _____

9. _____

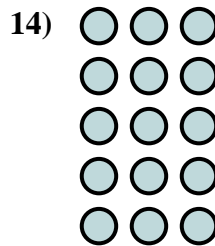
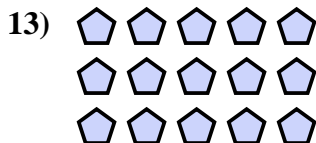
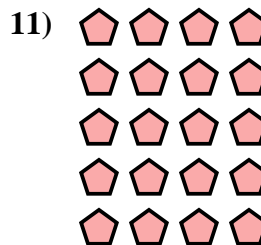
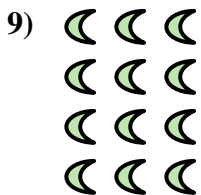


10. _____

11. _____

12. _____

13. _____

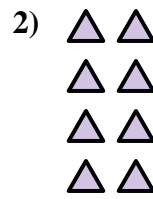
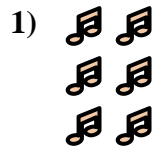
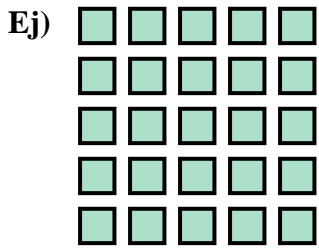
14. _____







Escribir una ecuación para expresar los grupos y después encontrar el número de figuras.

Respuestas



Ej. $5 \times 5 = 25$



1. $3 \times 2 = 6$

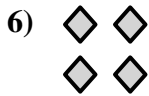
2. $4 \times 2 = 8$

3. $2 \times 3 = 6$

4. $4 \times 5 = 20$

5. $5 \times 2 = 10$

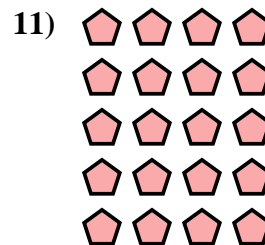
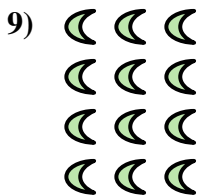
6. $2 \times 2 = 4$



7. $3 \times 4 = 12$

8. $2 \times 5 = 10$

9. $4 \times 3 = 12$



10. $4 \times 4 = 16$

11. $5 \times 4 = 20$

12. $3 \times 3 = 9$

13. $3 \times 5 = 15$

14. $5 \times 3 = 15$

