
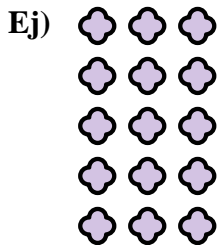




Escribir una ecuación para expresar los grupos y después encontrar el número de figuras.

Respuestas





Ej. $5 \times 3 = 15$

1. _____

2. _____

3. _____




4. _____

5. _____

6. _____


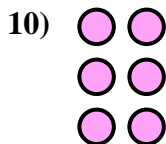
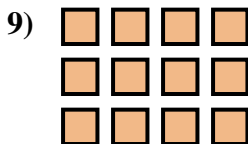
7. _____



8. _____

9. _____

10. _____

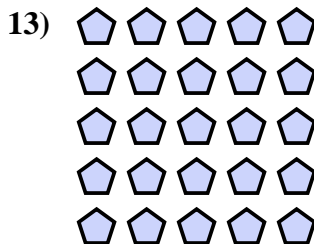


11. _____

12. _____

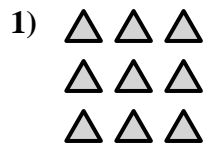
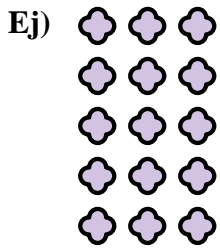
13. _____

14. _____

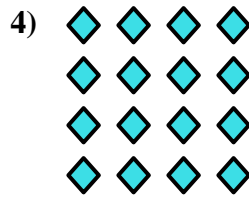





Escribir una ecuación para expresar los grupos y después encontrar el número de figuras.

Respuestas

Ej. $5 \times 3 = 15$



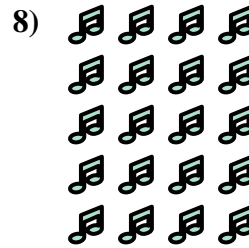
1. $3 \times 3 = 9$

2. $2 \times 3 = 6$

3. $4 \times 2 = 8$

4. $4 \times 4 = 16$

5. $2 \times 5 = 10$




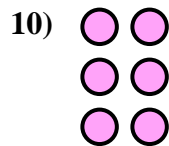

6. $2 \times 4 = 8$

7. $4 \times 3 = 12$

8. $5 \times 4 = 20$

9. $3 \times 4 = 12$

10. $3 \times 2 = 6$



11. $3 \times 5 = 15$

12. $4 \times 5 = 20$

13. $5 \times 5 = 25$

14. $2 \times 2 = 4$

