





Escribir una ecuación para expresar los grupos y después encontrar el número de figuras.

**Respuestas**



Ej.  $4 \times 4 = 16$

1. \_\_\_\_\_

2. \_\_\_\_\_

3. \_\_\_\_\_

4. \_\_\_\_\_

5. \_\_\_\_\_

6. \_\_\_\_\_

7. \_\_\_\_\_

8. \_\_\_\_\_

9. \_\_\_\_\_

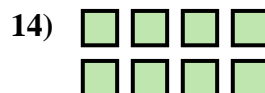
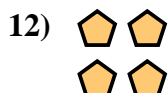


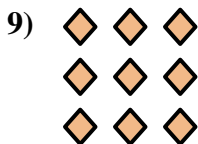
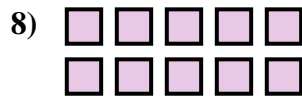
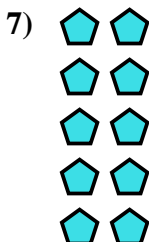

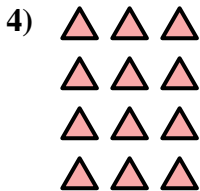
10. \_\_\_\_\_

11. \_\_\_\_\_

12. \_\_\_\_\_

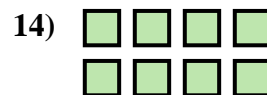

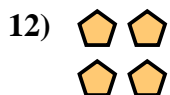

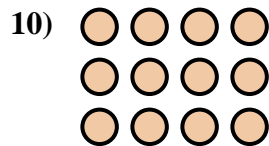

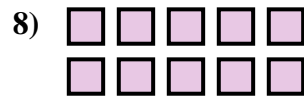
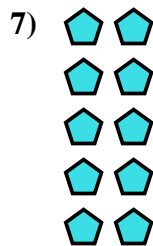
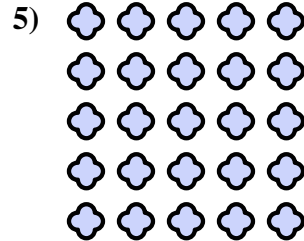
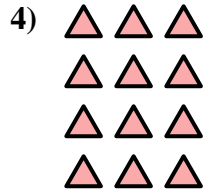

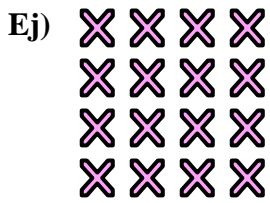
13. \_\_\_\_\_

14. \_\_\_\_\_





Escribir una ecuación para expresar los grupos y después encontrar el número de figuras.



**Respuestas**

Ej.  $4 \times 4 = 16$

1.  $5 \times 4 = 20$

2.  $4 \times 5 = 20$

3.  $2 \times 3 = 6$

4.  $4 \times 3 = 12$

5.  $5 \times 5 = 25$

6.  $3 \times 5 = 15$

7.  $5 \times 2 = 10$

8.  $2 \times 5 = 10$

9.  $3 \times 3 = 9$

10.  $3 \times 4 = 12$

11.  $4 \times 2 = 8$

12.  $2 \times 2 = 4$

13.  $3 \times 3 = 9$

14.  $2 \times 4 = 8$