

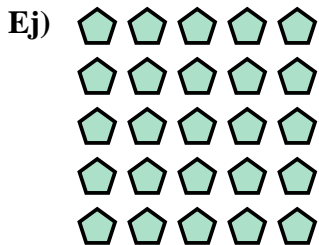




Escribir una ecuación para expresar los grupos y después encontrar el número de figuras.

Respuestas



Ej. $5 \times 5 = 25$

1. _____

2. _____

3. _____

4. _____

5. _____

6. _____

7. _____

8. _____

9. _____



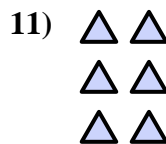




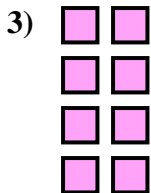
10. _____

11. _____

12. _____



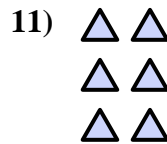
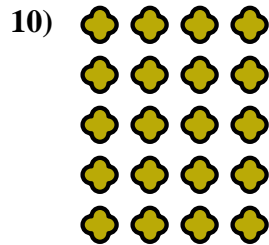


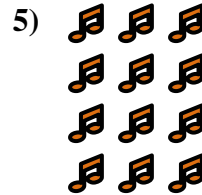
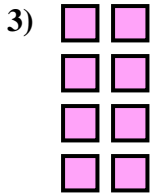


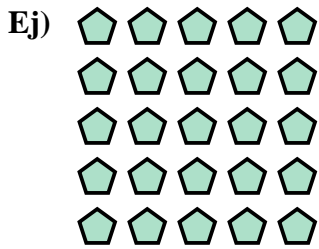
13. _____

14. _____





Escribir una ecuación para expresar los grupos y después encontrar el número de figuras.



Respuestas

Ej. $5 \times 5 = 25$

1. $5 \times 3 = 15$

2. $4 \times 5 = 20$

3. $4 \times 2 = 8$

4. $2 \times 3 = 6$

5. $4 \times 3 = 12$

6. $2 \times 4 = 8$

7. $4 \times 4 = 16$

8. $5 \times 2 = 10$

9. $3 \times 4 = 12$

10. $5 \times 4 = 20$

11. $3 \times 2 = 6$

12. $3 \times 5 = 15$

13. $2 \times 2 = 4$

14. $2 \times 5 = 10$