









































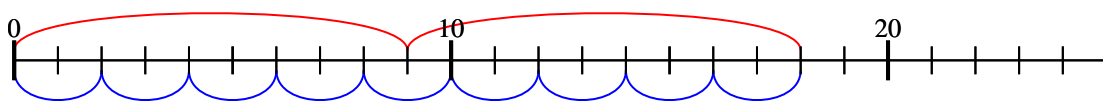




Usar la recta numérica para resolver cada problema.

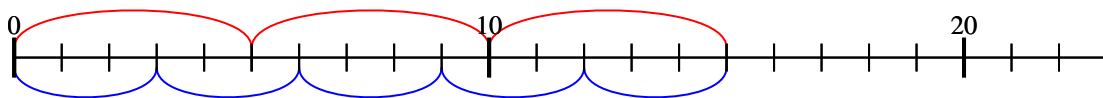
**Respuestas**

1)  $2 \times 9 =$   
 $9 \times 2 =$



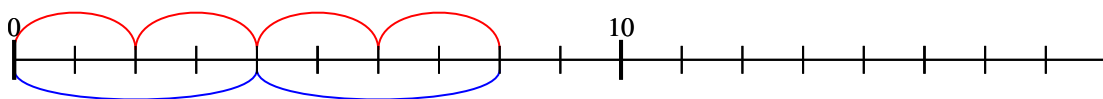
1. 18

2)  $3 \times 5 =$   
 $5 \times 3 =$



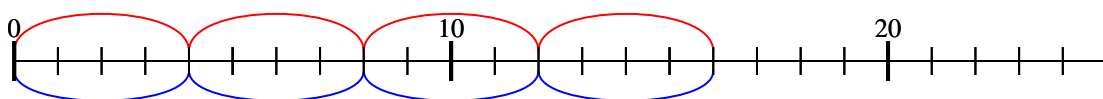
2. 15

3)  $4 \times 2 =$   
 $2 \times 4 =$



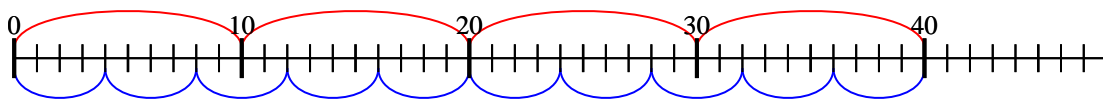
3. 8

4)  $4 \times 4 =$   
 $4 \times 4 =$



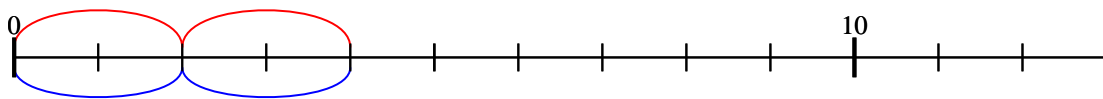
4. 16

5)  $4 \times 10 =$   
 $10 \times 4 =$



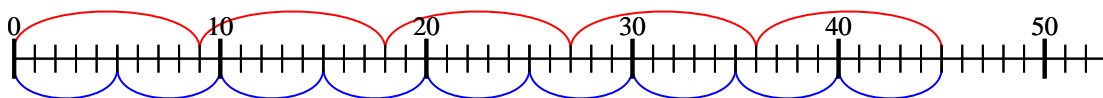
5. 40

6)  $2 \times 2 =$   
 $2 \times 2 =$



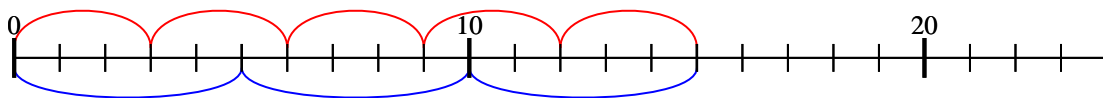
6. 4

7)  $5 \times 9 =$   
 $9 \times 5 =$



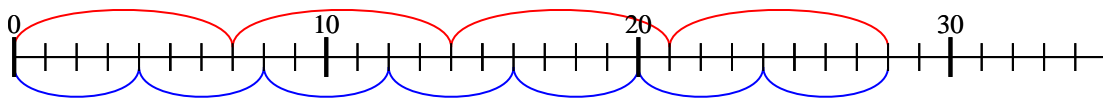
7. 45

8)  $5 \times 3 =$   
 $3 \times 5 =$



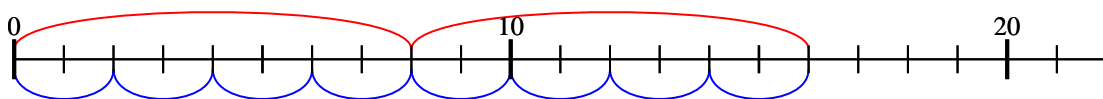
8. 15

9)  $4 \times 7 =$   
 $7 \times 4 =$



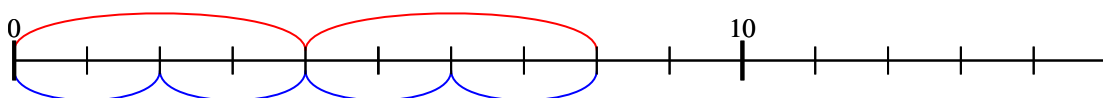
9. 28

10)  $2 \times 8 =$   
 $8 \times 2 =$



10. 16

11)  $2 \times 4 =$   
 $4 \times 2 =$



11. 8