





Usar las matrices proporcionadas para resolver cada problema.


1)  $29 \times 20 =$




2)  $18 \times 10 =$




3)  $11 \times 10 =$




4)  $17 \times 10 =$



5)  $10 \times 18 =$



6)  $10 \times 11 =$



**Respuestas**

1. \_\_\_\_\_

2. \_\_\_\_\_

3. \_\_\_\_\_

4. \_\_\_\_\_

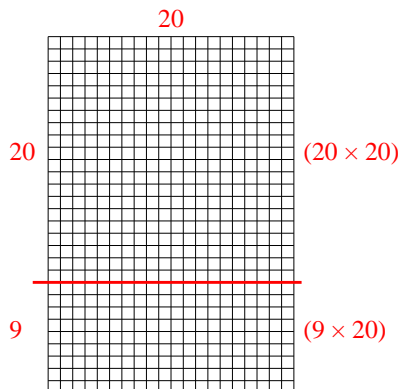
5. \_\_\_\_\_

6. \_\_\_\_\_



Usar las matrices proporcionadas para resolver cada problema.

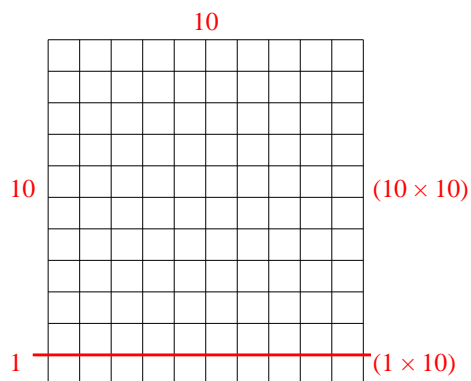
1)  $29 \times 20 =$



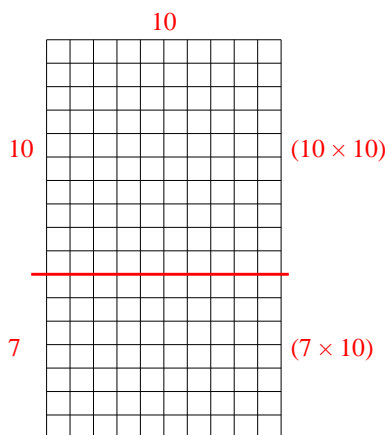
2)  $18 \times 10 =$



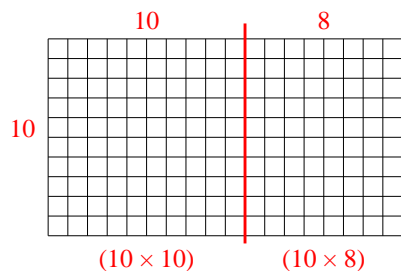
3)  $11 \times 10 =$



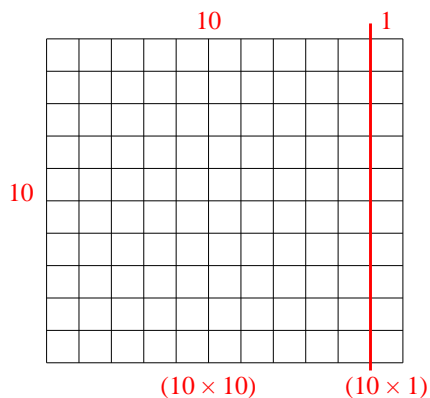
4)  $17 \times 10 =$



5)  $10 \times 18 =$



6)  $10 \times 11 =$



**Respuestas**

1. 580

2. 180

3. 110

4. 170

5. 180

6. 110