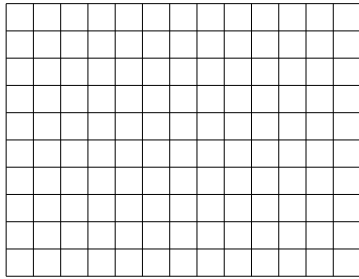





Usar las matrices proporcionadas para resolver cada problema.

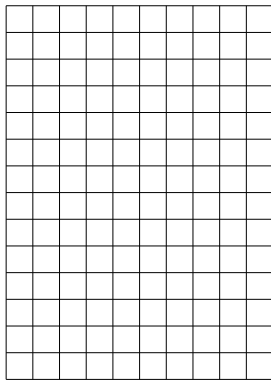
1) $10 \times 13 =$




2) $18 \times 10 =$




3) $14 \times 10 =$




4) $16 \times 10 =$



5) $10 \times 15 =$



6) $10 \times 14 =$



Respuestas

1. _____

2. _____

3. _____

4. _____

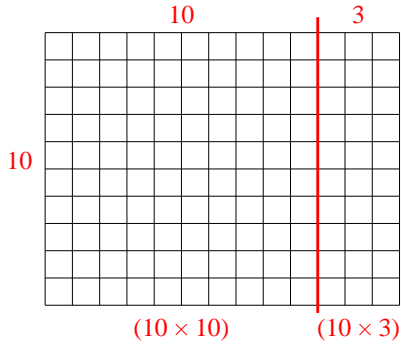
5. _____

6. _____

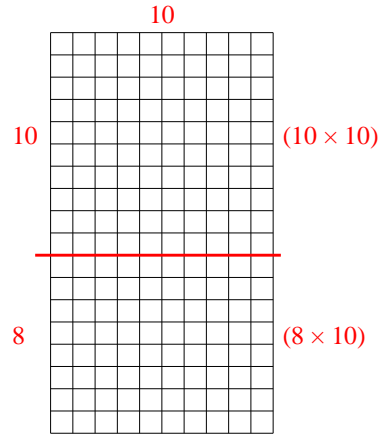


Usar las matrices proporcionadas para resolver cada problema.

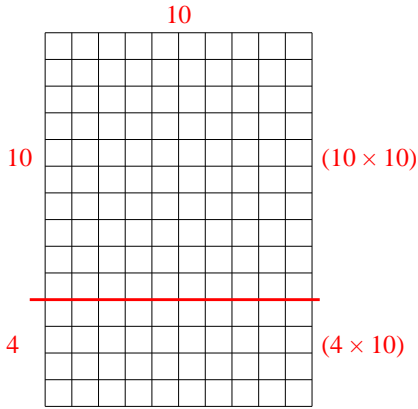
1) $10 \times 13 =$



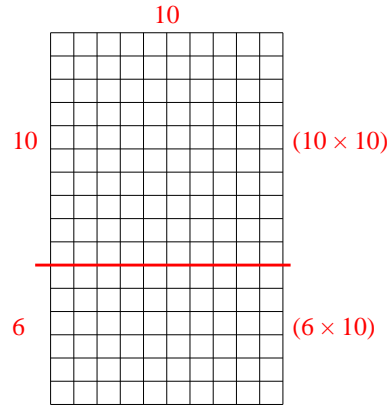
2) $18 \times 10 =$



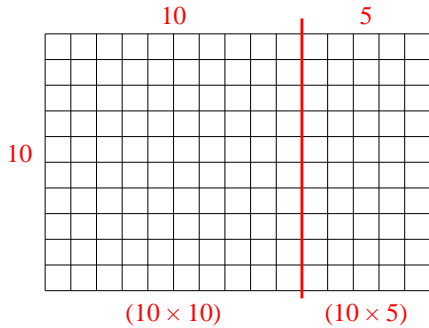
3) $14 \times 10 =$



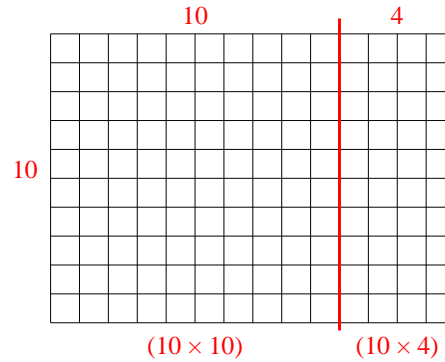
4) $16 \times 10 =$



5) $10 \times 15 =$



6) $10 \times 14 =$



Respuestas

1. 130

2. 180

3. 140

4. 160

5. 150

6. 140