





Usar las matrices proporcionadas para resolver cada problema.


1)  $22 \times 20 =$




2)  $12 \times 10 =$




3)  $10 \times 15 =$




4)  $15 \times 10 =$



5)  $11 \times 10 =$



6)  $10 \times 19 =$



**Respuestas**

1. \_\_\_\_\_

2. \_\_\_\_\_

3. \_\_\_\_\_

4. \_\_\_\_\_

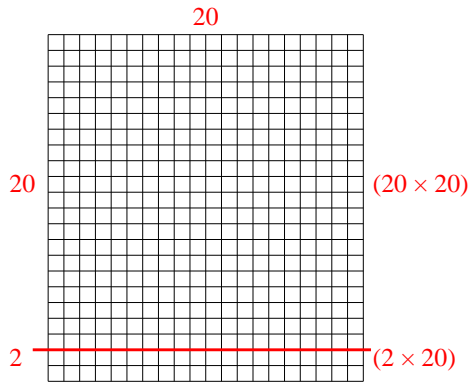
5. \_\_\_\_\_

6. \_\_\_\_\_

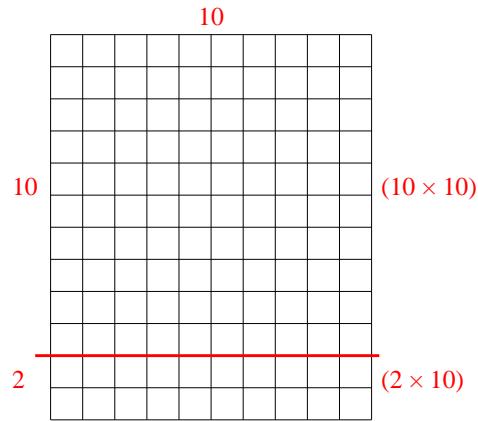


Usar las matrices proporcionadas para resolver cada problema.

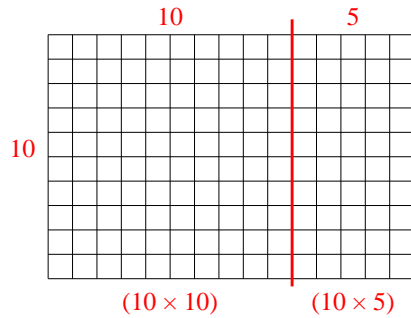
1)  $22 \times 20 =$



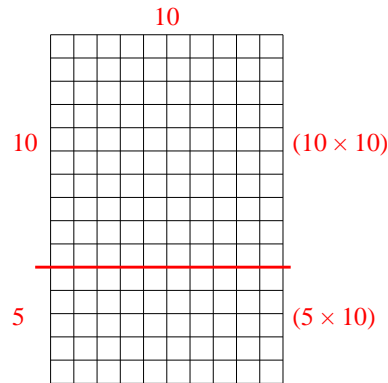
2)  $12 \times 10 =$



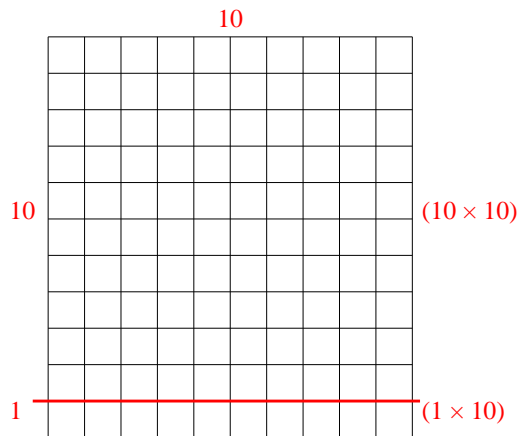
3)  $10 \times 15 =$



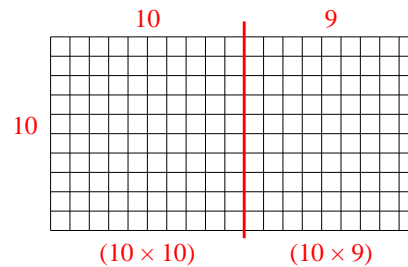
4)  $15 \times 10 =$



5)  $11 \times 10 =$



6)  $10 \times 19 =$



**Respuestas**

1. 440
2. 120
3. 150
4. 150
5. 110
6. 190