





Usar la matriz proporcionada para resolver cada problema.


1) $62 \times 69 =$



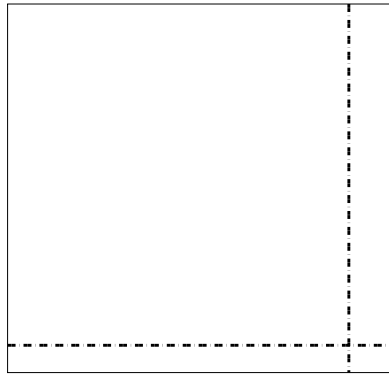
2) $53 \times 39 =$




3) $57 \times 66 =$




4) $54 \times 57 =$



5) $46 \times 42 =$



6) $34 \times 27 =$



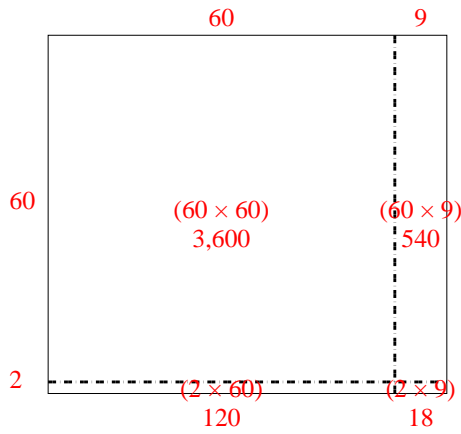
Respuestas

- 1. _____
- 2. _____
- 3. _____
- 4. _____
- 5. _____
- 6. _____

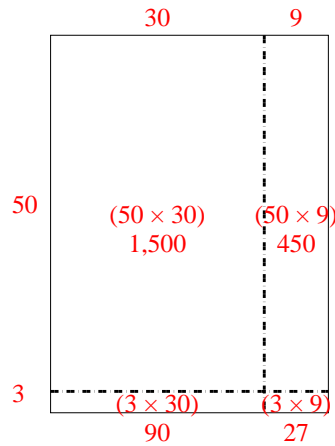


Usar la matriz proporcionada para resolver cada problema.

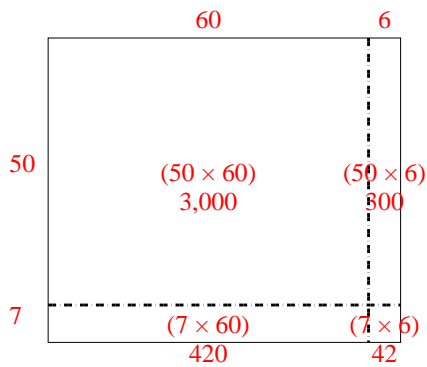
1) $62 \times 69 =$



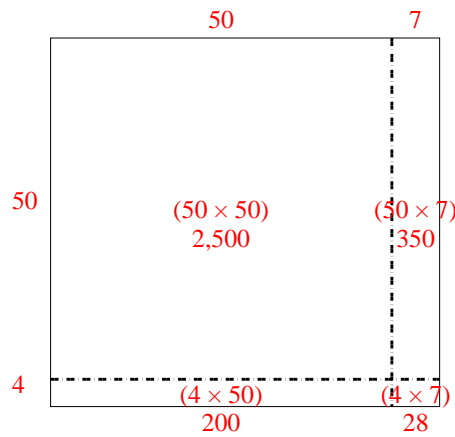
2) $53 \times 39 =$



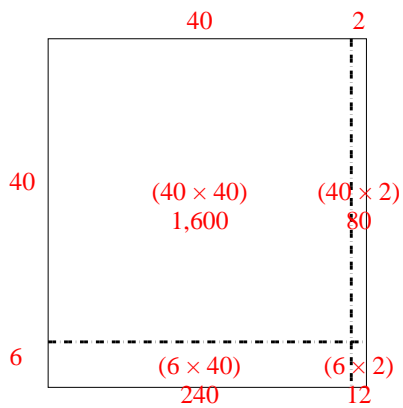
3) $57 \times 66 =$



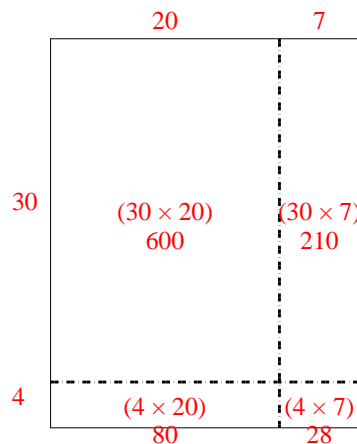
4) $54 \times 57 =$



5) $46 \times 42 =$



6) $34 \times 27 =$



Respuestas

1. 4,278

2. 2,067

3. 3,762

4. 3,078

5. 1,932

6. 918