





Usar la matriz proporcionada para resolver cada problema.

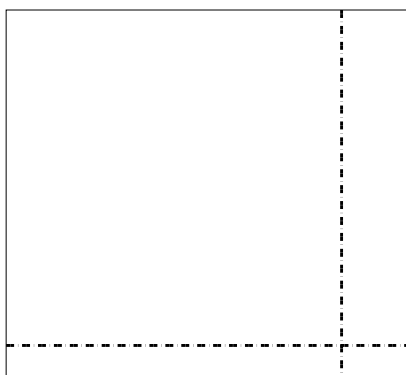
1) $48 \times 23 =$




2) $45 \times 44 =$




3) $33 \times 36 =$




4) $37 \times 24 =$



5) $39 \times 14 =$



6) $35 \times 12 =$



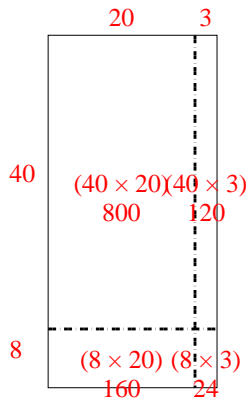
Respuestas

- 1. _____
- 2. _____
- 3. _____
- 4. _____
- 5. _____
- 6. _____

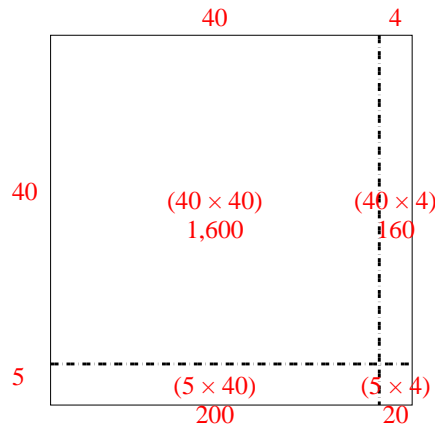


Usar la matriz proporcionada para resolver cada problema.

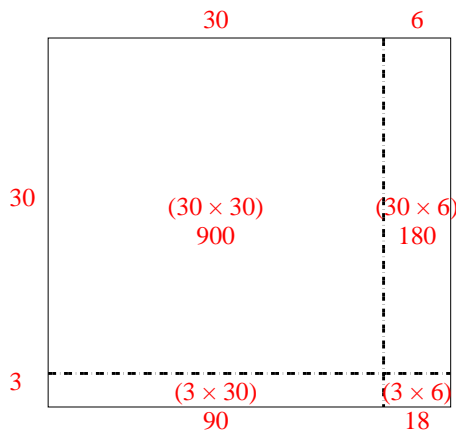
1) $48 \times 23 =$



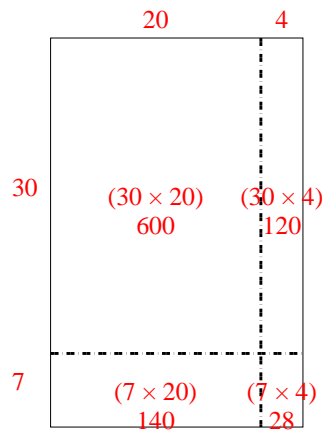
2) $45 \times 44 =$



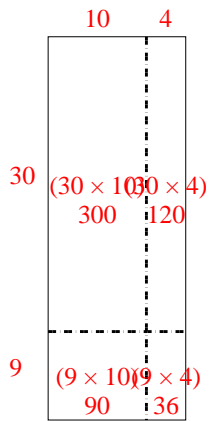
3) $33 \times 36 =$



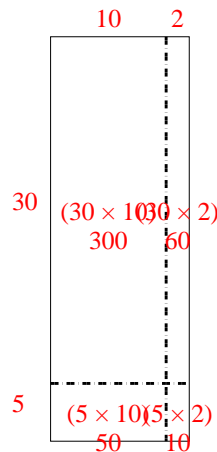
4) $37 \times 24 =$



5) $39 \times 14 =$



6) $35 \times 12 =$



Respuestas

1. 1,104

2. 1,980

3. 1,188

4. 888

5. 546

6. 420