


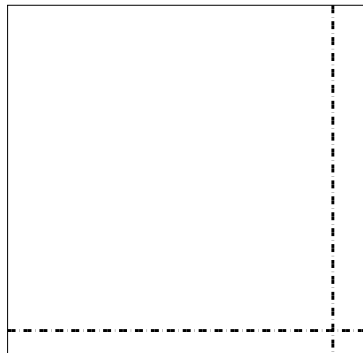


Usar la matriz proporcionada para resolver cada problema.


1) $46 \times 26 =$




2) $43 \times 45 =$




3) $39 \times 43 =$




4) $32 \times 49 =$



5) $49 \times 33 =$



6) $44 \times 32 =$



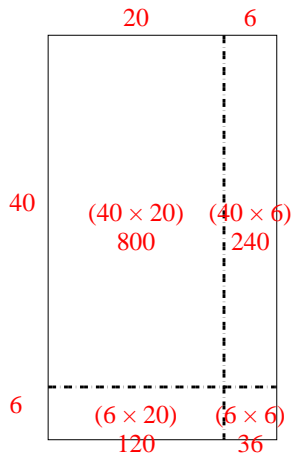
Respuestas

- 1. _____
- 2. _____
- 3. _____
- 4. _____
- 5. _____
- 6. _____

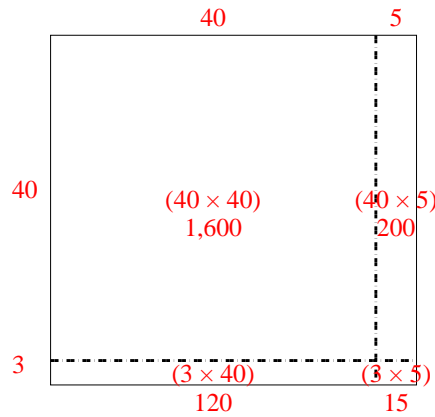


Usar la matriz proporcionada para resolver cada problema.

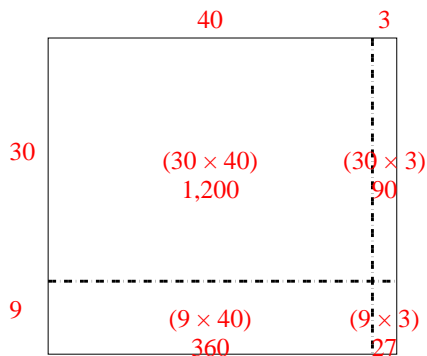
1) $46 \times 26 =$



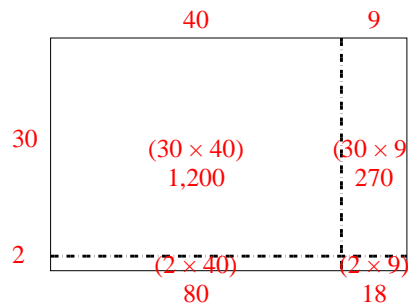
2) $43 \times 45 =$



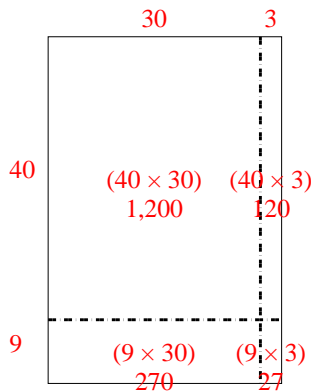
3) $39 \times 43 =$



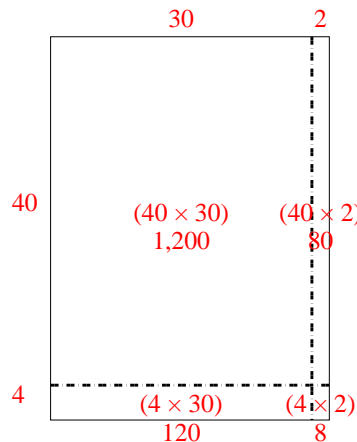
4) $32 \times 49 =$



5) $49 \times 33 =$



6) $44 \times 32 =$



Respuestas

1. **1,196**

2. **1,935**

3. **1,677**

4. **1,568**

5. **1,617**

6. **1,408**