





Usar la matriz proporcionada para resolver cada problema.


1)  $30 \times 32 =$




2)  $20 \times 23 =$




3)  $25 \times 20 =$




4)  $26 \times 20 =$



5)  $22 \times 20 =$



6)  $20 \times 21 =$



**Respuestas**

1. \_\_\_\_\_

2. \_\_\_\_\_

3. \_\_\_\_\_

4. \_\_\_\_\_

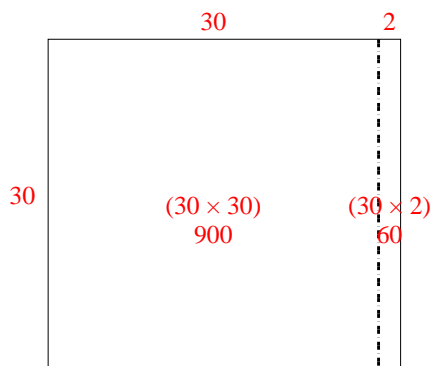
5. \_\_\_\_\_

6. \_\_\_\_\_

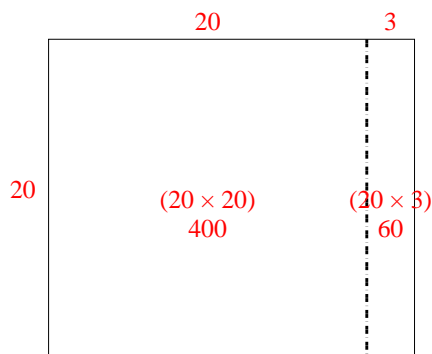


Usar la matriz proporcionada para resolver cada problema.

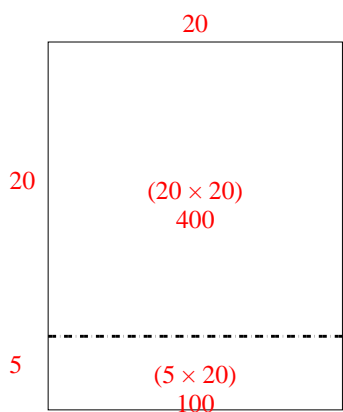
1)  $30 \times 32 =$



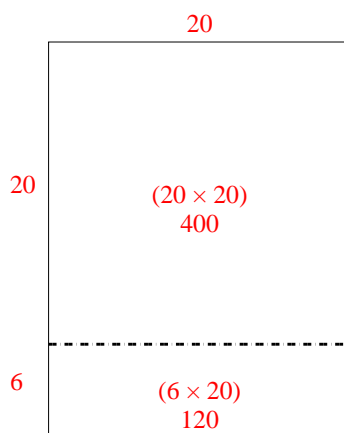
2)  $20 \times 23 =$



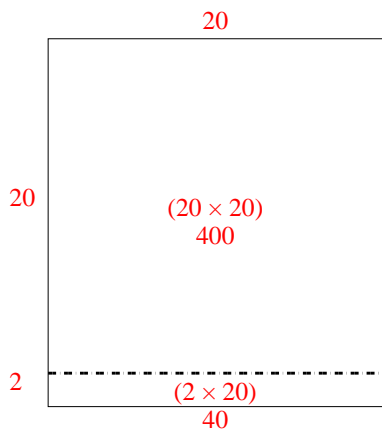
3)  $25 \times 20 =$



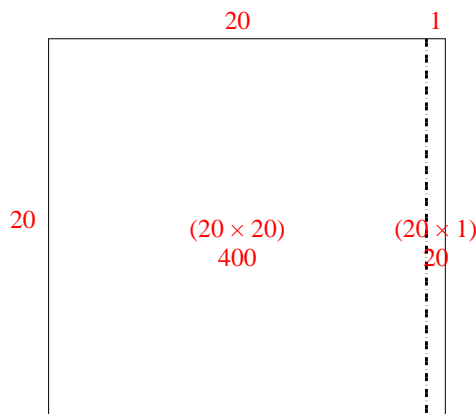
4)  $26 \times 20 =$



5)  $22 \times 20 =$



6)  $20 \times 21 =$



**Respuestas**

1. **960**

2. **460**

3. **500**

4. **520**

5. **440**

6. **420**