





Usar la matriz proporcionada para resolver cada problema.

1)  $21 \times 20 =$




2)  $25 \times 20 =$




3)  $20 \times 22 =$




4)  $20 \times 29 =$



5)  $27 \times 20 =$



6)  $28 \times 20 =$



**Respuestas**

1. \_\_\_\_\_

2. \_\_\_\_\_

3. \_\_\_\_\_

4. \_\_\_\_\_

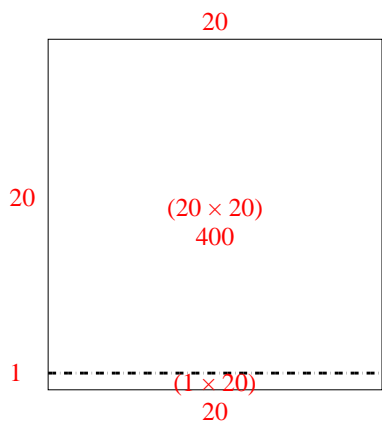
5. \_\_\_\_\_

6. \_\_\_\_\_

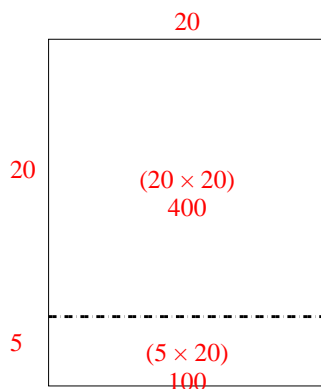


Usar la matriz proporcionada para resolver cada problema.

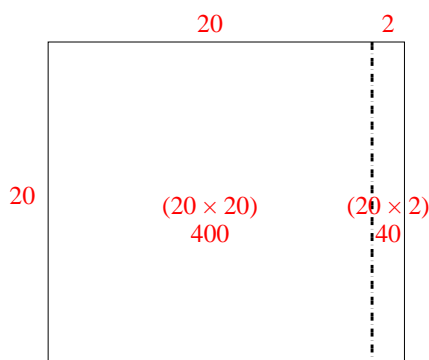
1)  $21 \times 20 =$



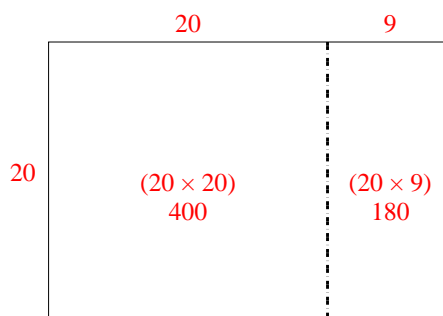
2)  $25 \times 20 =$



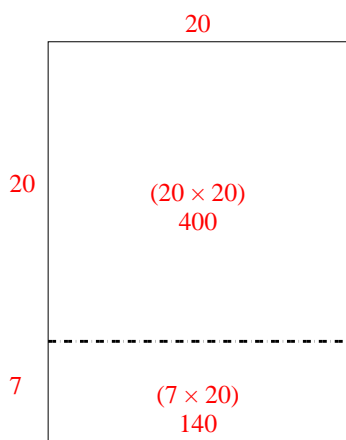
3)  $20 \times 22 =$



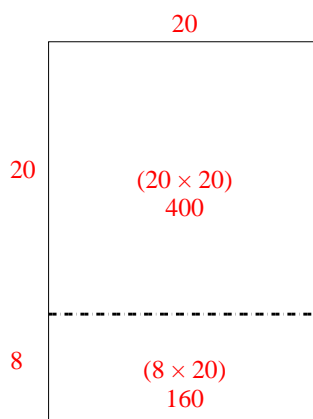
4)  $20 \times 29 =$



5)  $27 \times 20 =$



6)  $28 \times 20 =$



**Respuestas**

1. **420**

2. **500**

3. **440**

4. **580**

5. **540**

6. **560**