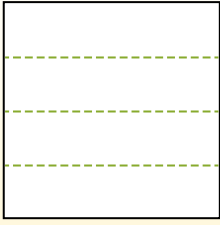


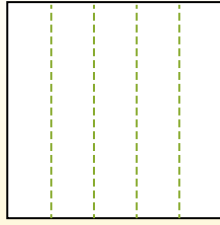


Dividir la forma que se muestra y después cuenta para encontrar el número de cajas.

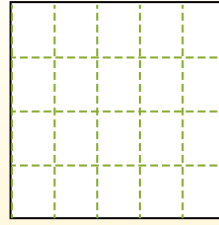
Las filas van de izquierda a derecha.




Las columnas van de arriba a abajo.




Aqui tem 4 linhas e 5 colunas .
Existem 20 caixas no total.




1) 2 filas
5 columnas




2) 3 filas
5 columnas




3) 5 filas
5 columnas




4) 4 filas
3 columnas




5) 5 filas
3 columnas




6) 2 filas
3 columnas




7) 5 filas
4 columnas



8) 2 filas
2 columnas



9) 4 filas
4 columnas



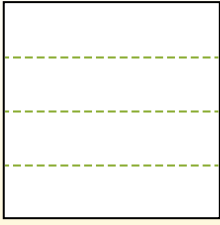
Respuestas

- 1. _____
- 2. _____
- 3. _____
- 4. _____
- 5. _____
- 6. _____
- 7. _____
- 8. _____
- 9. _____

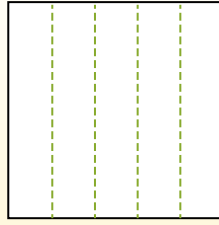


Dividir la forma que se muestra y después cuenta para encontrar el número de cajas.

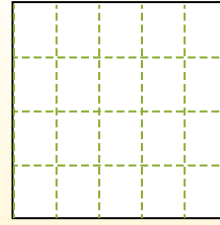
Las filas van de izquierda a derecha.



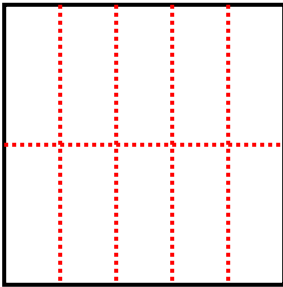
Las columnas van de arriba a abajo.



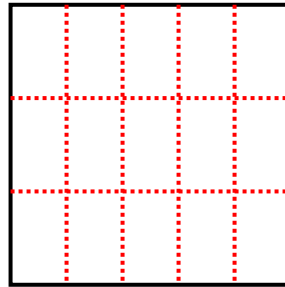
Aqui tem 4 linhas e 5 colunas. Existem 20 caixas no total.



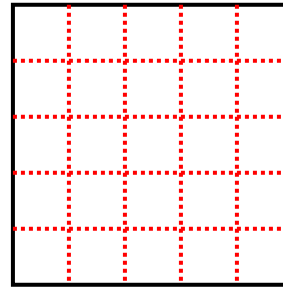
1) 2 filas
5 columnas



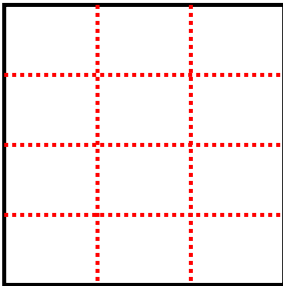
2) 3 filas
5 columnas



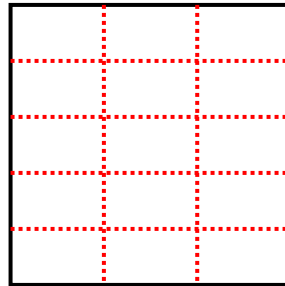
3) 5 filas
5 columnas



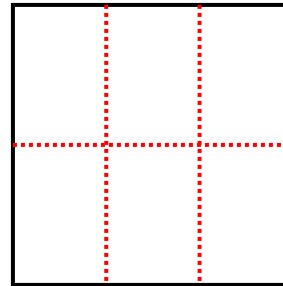
4) 4 filas
3 columnas



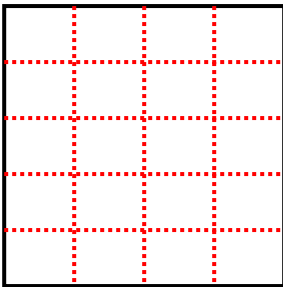
5) 5 filas
3 columnas



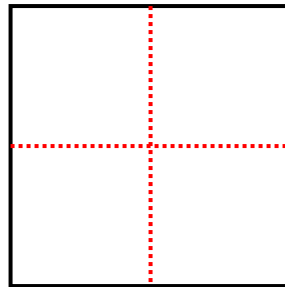
6) 2 filas
3 columnas



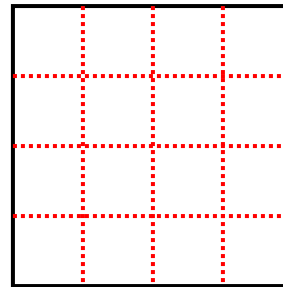
7) 5 filas
4 columnas



8) 2 filas
2 columnas



9) 4 filas
4 columnas



Respuestas

- 1. 10
- 2. 15
- 3. 25
- 4. 12
- 5. 15
- 6. 6
- 7. 20
- 8. 4
- 9. 16