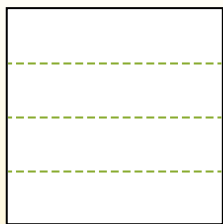


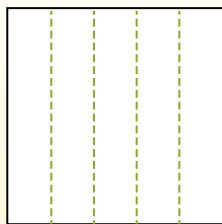


Dividir la forma que se muestra y después cuenta para encontrar el número de cajas.

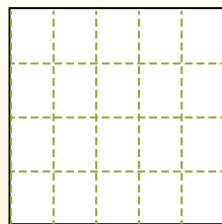
Las filas van de izquierda a derecha.




Las columnas van de arriba a abajo.




Aqui tem 4 linhas e 5 colunas .
Existem 20 caixas no total.




1) 5 filas
4 columnas




2) 4 filas
4 columnas




3) 2 filas
3 columnas




4) 4 filas
3 columnas




5) 5 filas
5 columnas




6) 3 filas
5 columnas




7) 5 filas
2 columnas



8) 2 filas
5 columnas



9) 3 filas
3 columnas



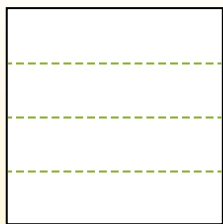
Respuestas

1. _____
2. _____
3. _____
4. _____
5. _____
6. _____
7. _____
8. _____
9. _____

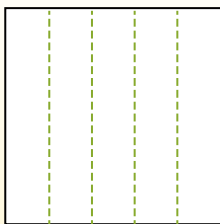


Dividir la forma que se muestra y después cuenta para encontrar el número de cajas.

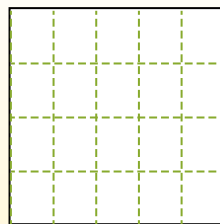
Las filas van de izquierda a derecha.



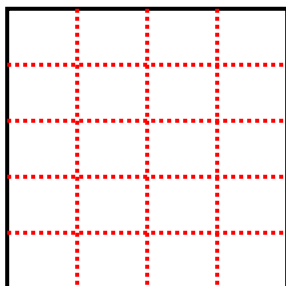
Las columnas van de arriba a abajo.




Aqui tem 4 linhas e 5 colunas .
Existem 20 caixas no total.



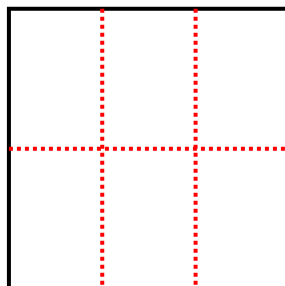
1) 5 filas
4 columnas



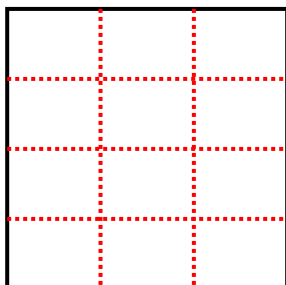
2) 4 filas
4 columnas



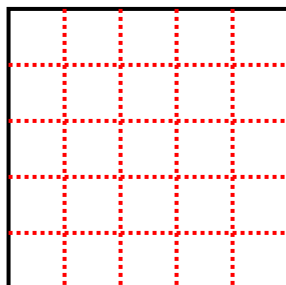
3) 2 filas
3 columnas



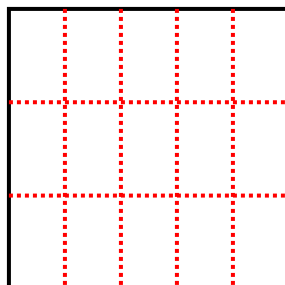
4) 4 filas
3 columnas



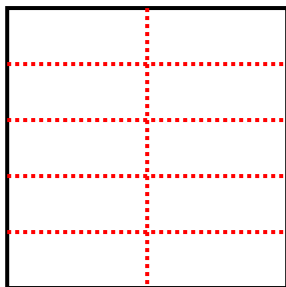
5) 5 filas
5 columnas



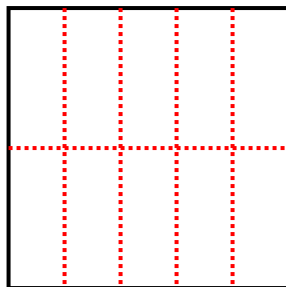
6) 3 filas
5 columnas



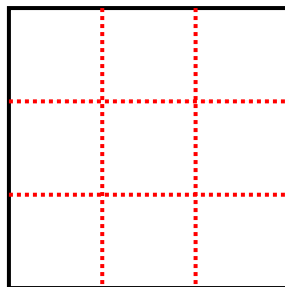
7) 5 filas
2 columnas



8) 2 filas
5 columnas



9) 3 filas
3 columnas



Respuestas

1. **20**

2. **16**

3. **6**

4. **12**

5. **25**

6. **15**

7. **10**

8. **10**

9. **9**