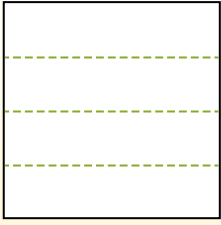


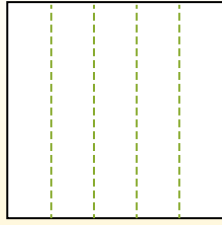


Dividir la forma que se muestra y después cuenta para encontrar el número de cajas.

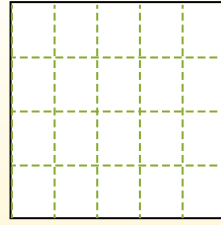
Las filas van de izquierda a derecha.




Las columnas van de arriba a abajo.




Aqui tem 4 linhas e 5 colunas .
Existem 20 caixas no total.




1) 3 filas
5 columnas




2) 3 filas
3 columnas




3) 2 filas
5 columnas




4) 3 filas
2 columnas




5) 4 filas
3 columnas




6) 4 filas
4 columnas




7) 4 filas
2 columnas



8) 3 filas
4 columnas



9) 5 filas
5 columnas



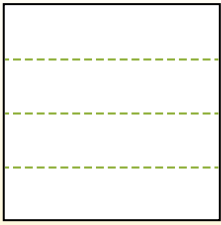
Respuestas

- 1. _____
- 2. _____
- 3. _____
- 4. _____
- 5. _____
- 6. _____
- 7. _____
- 8. _____
- 9. _____

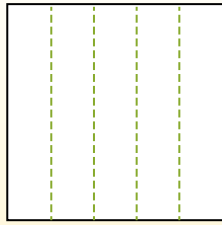


Dividir la forma que se muestra y después cuenta para encontrar el número de cajas.

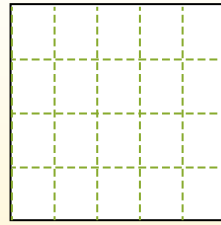
Las filas van de izquierda a derecha.



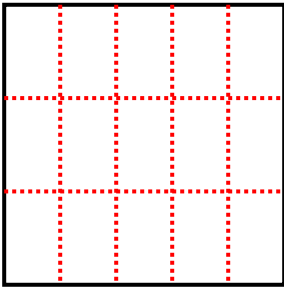
Las columnas van de arriba a abajo.



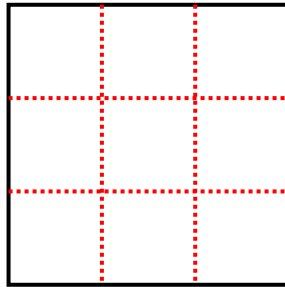
Aqui tem 4 linhas e 5 colunas .
Existem 20 caixas no total.



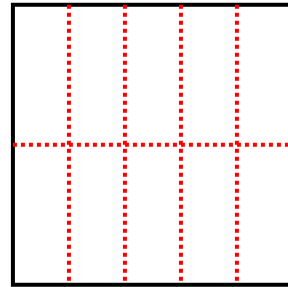
1) 3 filas
5 columnas



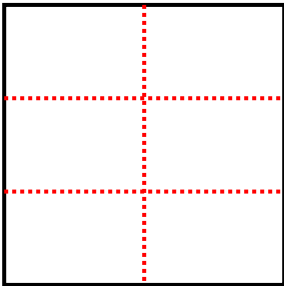
2) 3 filas
3 columnas



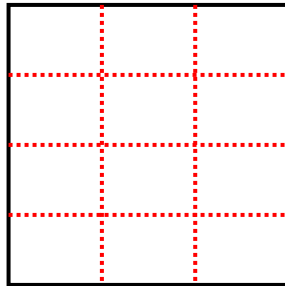
3) 2 filas
5 columnas



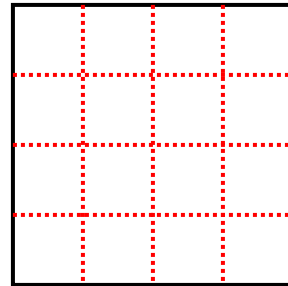
4) 3 filas
2 columnas



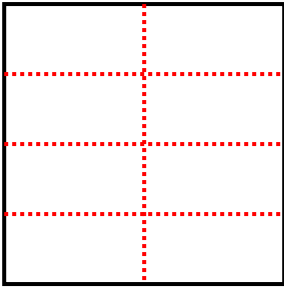
5) 4 filas
3 columnas



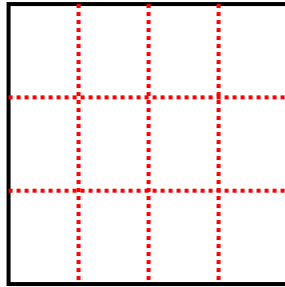
6) 4 filas
4 columnas



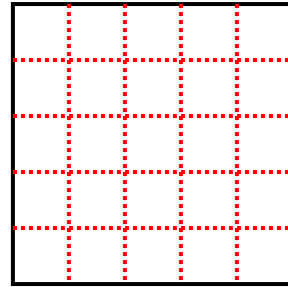
7) 4 filas
2 columnas



8) 3 filas
4 columnas



9) 5 filas
5 columnas



Respuestas

1. **15**

2. **9**

3. **10**

4. **6**

5. **12**

6. **16**

7. **8**

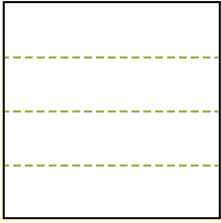
8. **12**

9. **25**

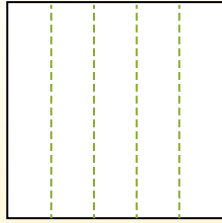


Dividir la forma que se muestra y después cuenta para encontrar el número de cajas.

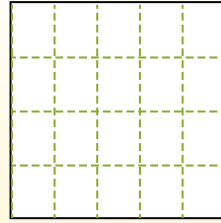
Las filas van de izquierda a derecha.



Las columnas van de arriba a abajo.




Aqui tem 4 linhas e 5 colunas .
Existem 20 caixas no total.



Respuestas

- 1. _____
- 2. _____
- 3. _____
- 4. _____
- 5. _____
- 6. _____
- 7. _____
- 8. _____
- 9. _____

1) 3 filas
3 columnas




2) 3 filas
2 columnas



3) 2 filas
2 columnas




4) 4 filas
3 columnas




5) 4 filas
2 columnas




6) 4 filas
4 columnas




7) 3 filas
5 columnas



8) 2 filas
5 columnas



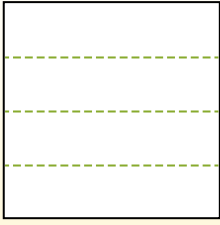
9) 2 filas
4 columnas



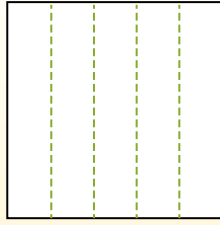


Dividir la forma que se muestra y después cuenta para encontrar el número de cajas.

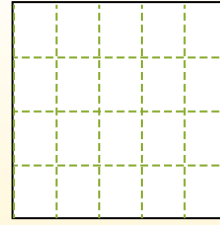
Las filas van de izquierda a derecha.



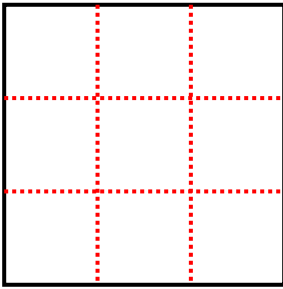
Las columnas van de arriba a abajo.



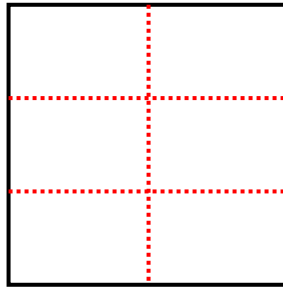
Aqui tem 4 linhas e 5 colunas .
Existem 20 caixas no total.



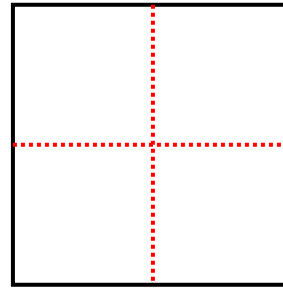
1) 3 filas
3 columnas



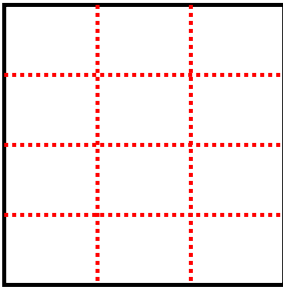
2) 3 filas
2 columnas



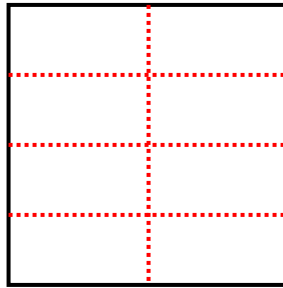
3) 2 filas
2 columnas



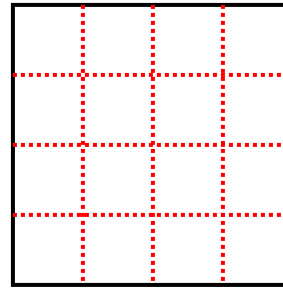
4) 4 filas
3 columnas



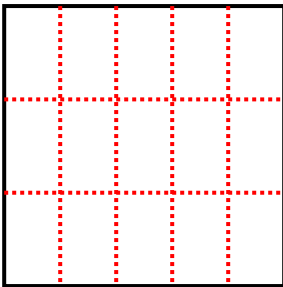
5) 4 filas
2 columnas



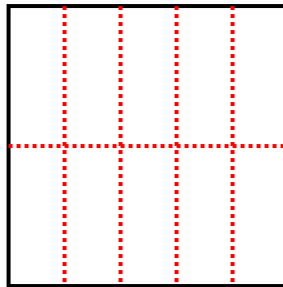
6) 4 filas
4 columnas



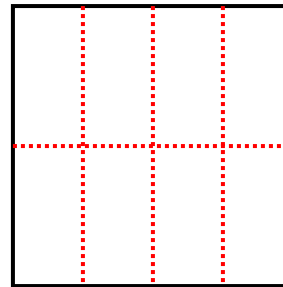
7) 3 filas
5 columnas



8) 2 filas
5 columnas



9) 2 filas
4 columnas



Respuestas

1. 9

2. 6

3. 4

4. 12

5. 8

6. 16

7. 15

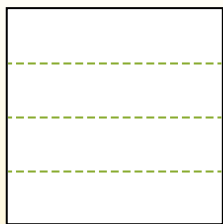
8. 10

9. 8

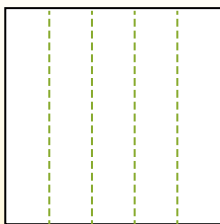


Dividir la forma que se muestra y después cuenta para encontrar el número de cajas.

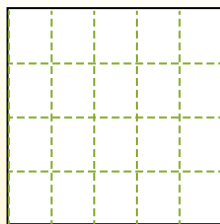
Las filas van de izquierda a derecha.




Las columnas van de arriba a abajo.




Aqui tem 4 linhas e 5 colunas .
Existem 20 caixas no total.




1) 3 filas
2 columnas




2) 4 filas
2 columnas




3) 2 filas
3 columnas




4) 5 filas
4 columnas




5) 5 filas
2 columnas




6) 2 filas
2 columnas




7) 3 filas
4 columnas



8) 5 filas
5 columnas



9) 4 filas
3 columnas



Respuestas

- 1. _____
- 2. _____
- 3. _____
- 4. _____
- 5. _____
- 6. _____
- 7. _____
- 8. _____
- 9. _____

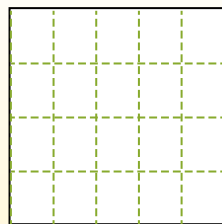
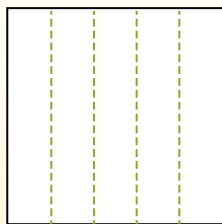
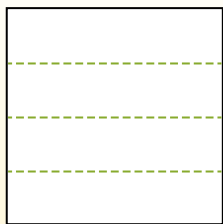


Dividir la forma que se muestra y después cuenta para encontrar el número de cajas.

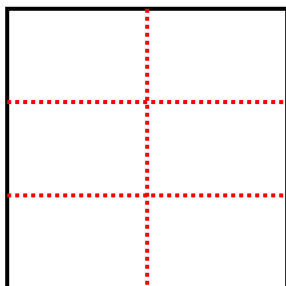
Las filas van de izquierda a derecha.

Las columnas van de arriba a abajo.

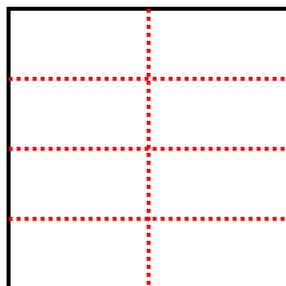
Aqui tem 4 linhas e 5 colunas .
Existem 20 caixas no total.



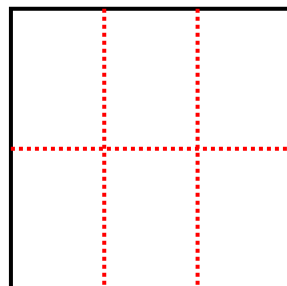
1) 3 filas
2 columnas



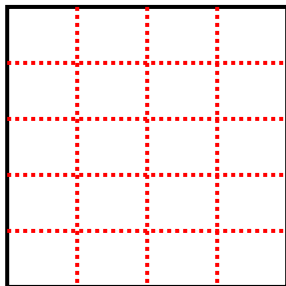
2) 4 filas
2 columnas



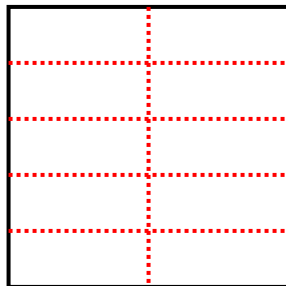
3) 2 filas
3 columnas



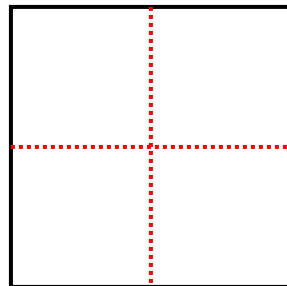
4) 5 filas
4 columnas



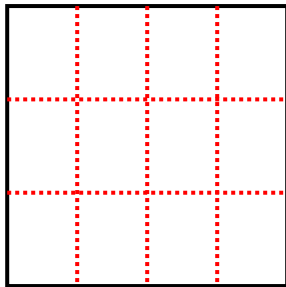
5) 5 filas
2 columnas



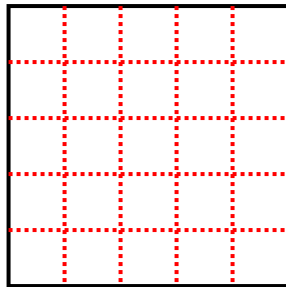
6) 2 filas
2 columnas



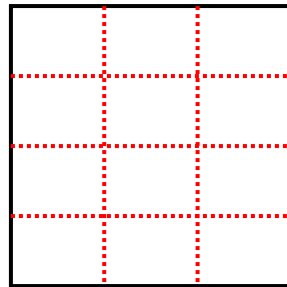
7) 3 filas
4 columnas



8) 5 filas
5 columnas



9) 4 filas
3 columnas



Respuestas

1. 6

2. 8

3. 6

4. 20

5. 10

6. 4

7. 12

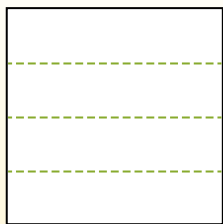
8. 25

9. 12

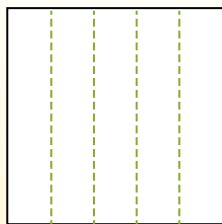


Dividir la forma que se muestra y después cuenta para encontrar el número de cajas.

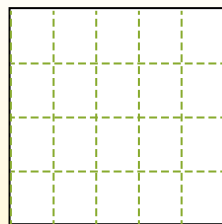
Las filas van de izquierda a derecha.




Las columnas van de arriba a abajo.




Aqui tem 4 linhas e 5 colunas .
Existem 20 caixas no total.




1) 3 filas
3 columnas




2) 2 filas
3 columnas




3) 4 filas
2 columnas




4) 4 filas
4 columnas




5) 2 filas
5 columnas




6) 2 filas
4 columnas




7) 4 filas
3 columnas



8) 5 filas
4 columnas



9) 5 filas
3 columnas



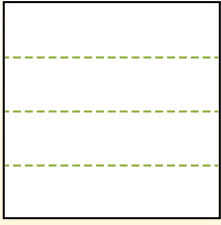
Respuestas

- 1. _____
- 2. _____
- 3. _____
- 4. _____
- 5. _____
- 6. _____
- 7. _____
- 8. _____
- 9. _____

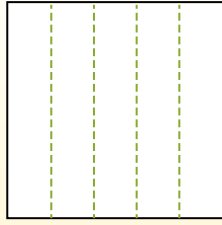


Dividir la forma que se muestra y después cuenta para encontrar el número de cajas.

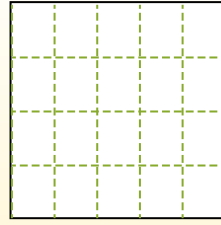
Las filas van de izquierda a derecha.



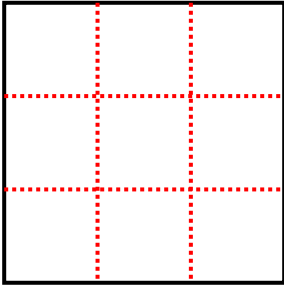
Las columnas van de arriba a abajo.



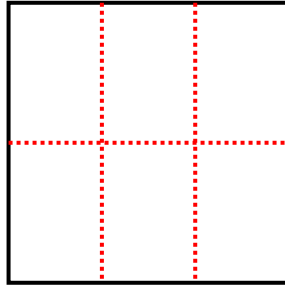
Aqui tem 4 linhas e 5 colunas .
Existem 20 caixas no total.



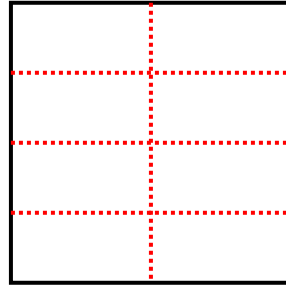
1) 3 filas
3 columnas




2) 2 filas
3 columnas



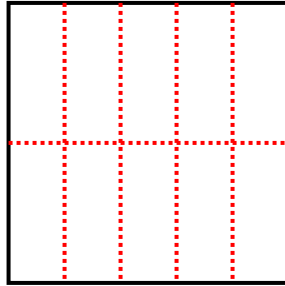
3) 4 filas
2 columnas



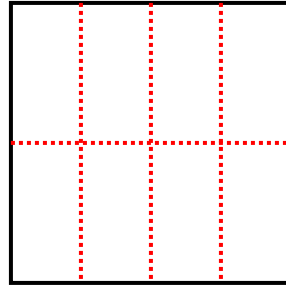
4) 4 filas
4 columnas



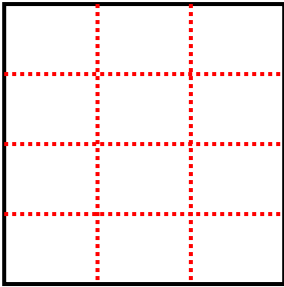
5) 2 filas
5 columnas



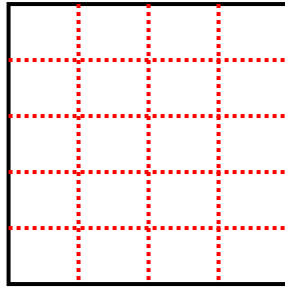
6) 2 filas
4 columnas



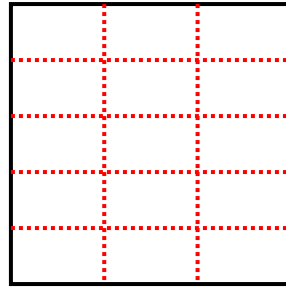
7) 4 filas
3 columnas



8) 5 filas
4 columnas



9) 5 filas
3 columnas



Respuestas

1. 9

2. 6

3. 8

4. 16

5. 10

6. 8

7. 12

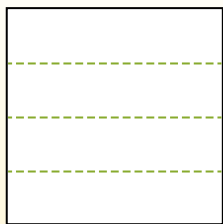
8. 20

9. 15

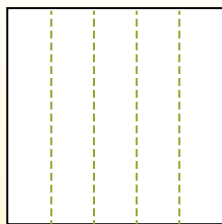


Dividir la forma que se muestra y después cuenta para encontrar el número de cajas.

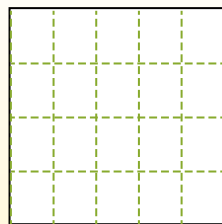
Las filas van de izquierda a derecha.




Las columnas van de arriba a abajo.




Aqui tem 4 linhas e 5 colunas .
Existem 20 caixas no total.




1) 5 filas
2 columnas




2) 3 filas
3 columnas




3) 2 filas
3 columnas




4) 3 filas
4 columnas




5) 2 filas
2 columnas




6) 5 filas
4 columnas




7) 3 filas
2 columnas



8) 5 filas
3 columnas



9) 2 filas
5 columnas



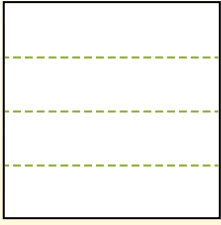
Respuestas

- 1. _____
- 2. _____
- 3. _____
- 4. _____
- 5. _____
- 6. _____
- 7. _____
- 8. _____
- 9. _____

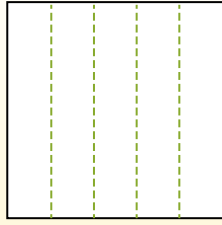


Dividir la forma que se muestra y después cuenta para encontrar el número de cajas.

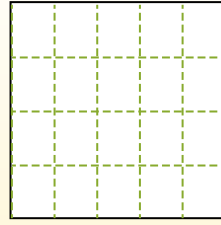
Las filas van de izquierda a derecha.



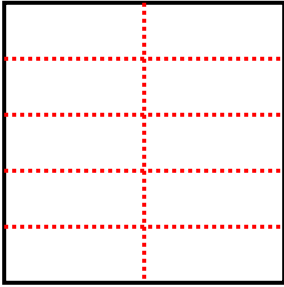
Las columnas van de arriba a abajo.



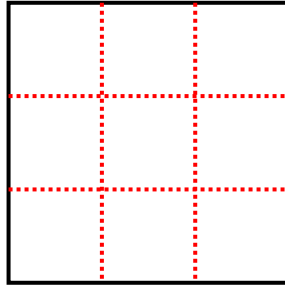
Aqui tem 4 linhas e 5 colunas .
Existem 20 caixas no total.



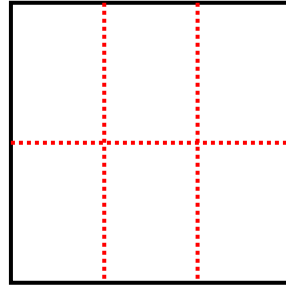
1) 5 filas
2 columnas



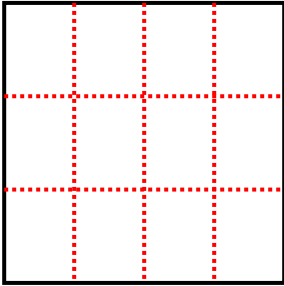
2) 3 filas
3 columnas



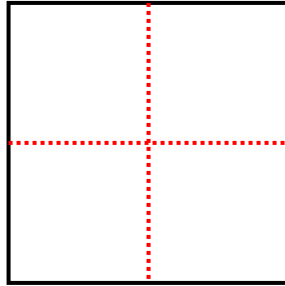
3) 2 filas
3 columnas



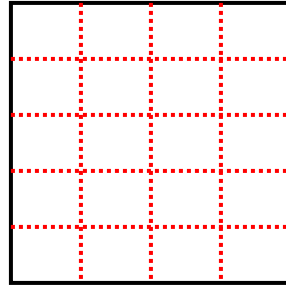
4) 3 filas
4 columnas



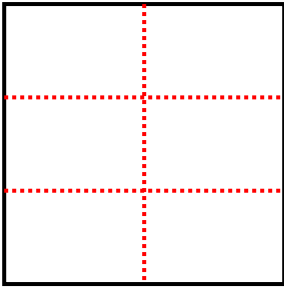
5) 2 filas
2 columnas



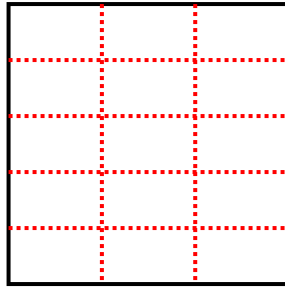
6) 5 filas
4 columnas



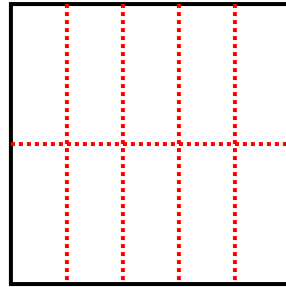
7) 3 filas
2 columnas



8) 5 filas
3 columnas



9) 2 filas
5 columnas



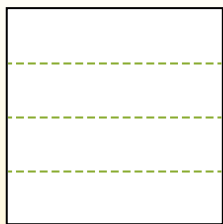
Respuestas

- 1. 10
- 2. 9
- 3. 6
- 4. 12
- 5. 4
- 6. 20
- 7. 6
- 8. 15
- 9. 10

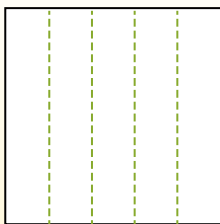


Dividir la forma que se muestra y después cuenta para encontrar el número de cajas.

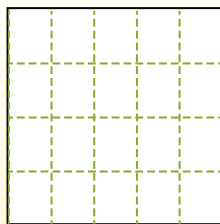
Las filas van de izquierda a derecha.




Las columnas van de arriba a abajo.




Aqui tem 4 linhas e 5 colunas .
Existem 20 caixas no total.




1) 2 filas
4 columnas




2) 5 filas
2 columnas




3) 3 filas
4 columnas




4) 3 filas
5 columnas




5) 2 filas
3 columnas




6) 4 filas
3 columnas




7) 5 filas
3 columnas



8) 3 filas
2 columnas



9) 3 filas
3 columnas



Respuestas

- 1. _____
- 2. _____
- 3. _____
- 4. _____
- 5. _____
- 6. _____
- 7. _____
- 8. _____
- 9. _____

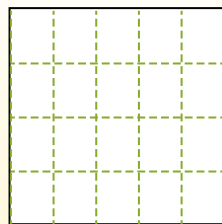
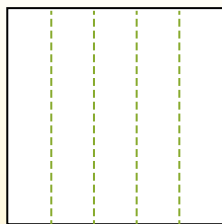
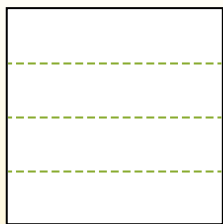


Dividir la forma que se muestra y después cuenta para encontrar el número de cajas.

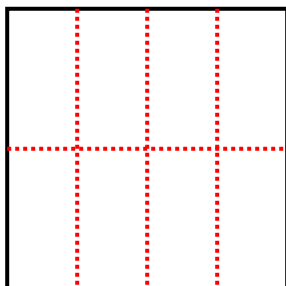
Las filas van de izquierda a derecha.

Las columnas van de arriba a abajo.

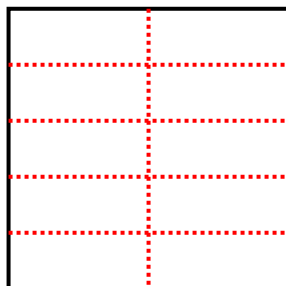
Aqui tem 4 linhas e 5 colunas .
Existem 20 caixas no total.



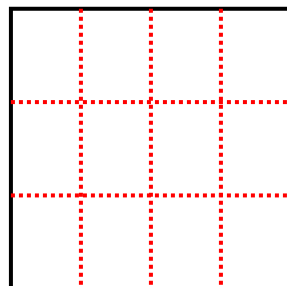
1) 2 filas
4 columnas



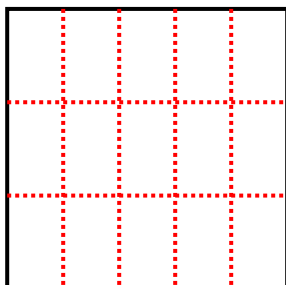
2) 5 filas
2 columnas



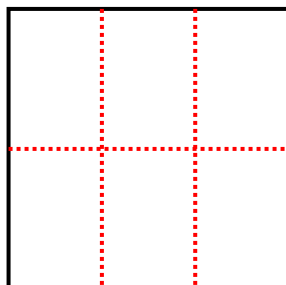
3) 3 filas
4 columnas



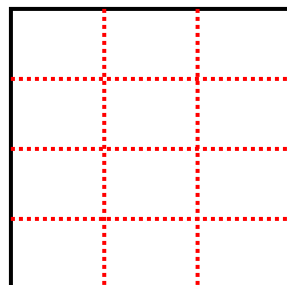
4) 3 filas
5 columnas



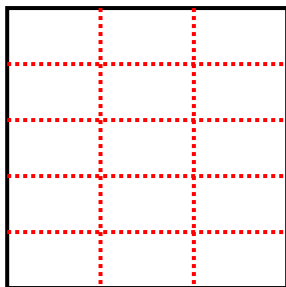
5) 2 filas
3 columnas



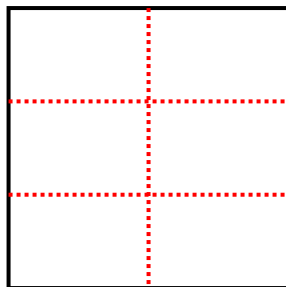
6) 4 filas
3 columnas



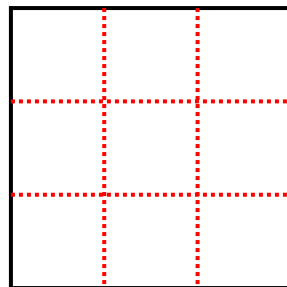
7) 5 filas
3 columnas



8) 3 filas
2 columnas



9) 3 filas
3 columnas



Respuestas

1. 8

2. 10

3. 12

4. 15

5. 6

6. 12

7. 15

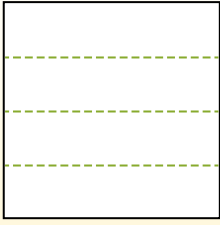
8. 6

9. 9

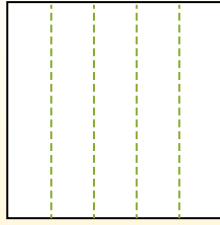


Dividir la forma que se muestra y después cuenta para encontrar el número de cajas.

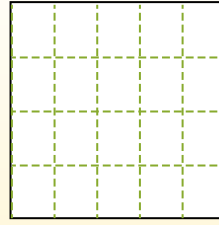
Las filas van de izquierda a derecha.




Las columnas van de arriba a abajo.




Aqui tem 4 linhas e 5 colunas .
Existem 20 caixas no total.




1) 4 filas
2 columnas




2) 2 filas
2 columnas




3) 5 filas
3 columnas




4) 5 filas
4 columnas




5) 3 filas
2 columnas




6) 4 filas
3 columnas




7) 5 filas
2 columnas



8) 4 filas
4 columnas



9) 3 filas
3 columnas



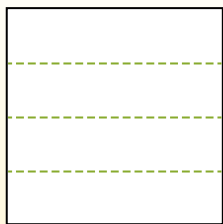
Respuestas

1. _____
2. _____
3. _____
4. _____
5. _____
6. _____
7. _____
8. _____
9. _____

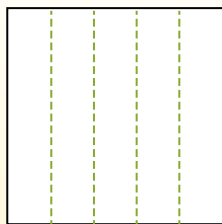


Dividir la forma que se muestra y después cuenta para encontrar el número de cajas.

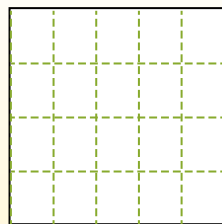
Las filas van de izquierda a derecha.



Las columnas van de arriba a abajo.

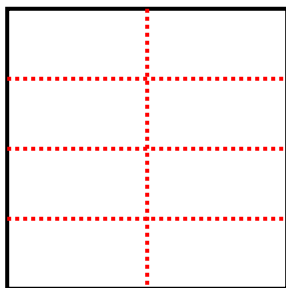


Aqui tem 4 linhas e 5 colunas .
Existem 20 caixas no total.



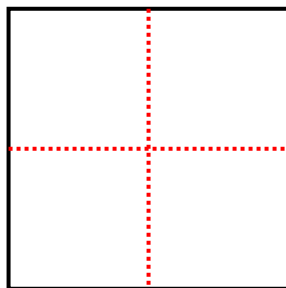
1) 4 filas

2 columnas



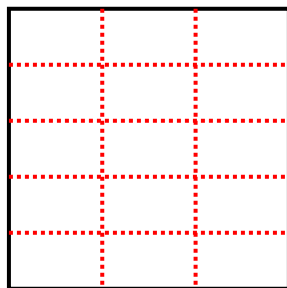
2) 2 filas

2 columnas




3) 5 filas

3 columnas



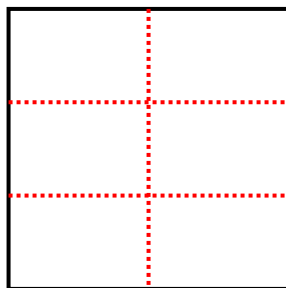
4) 5 filas

4 columnas



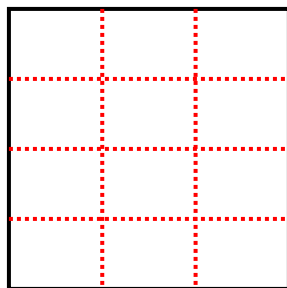
5) 3 filas

2 columnas



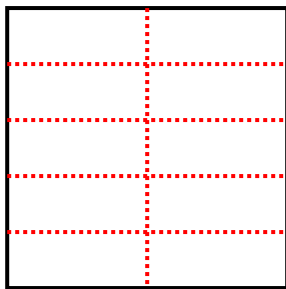
6) 4 filas

3 columnas



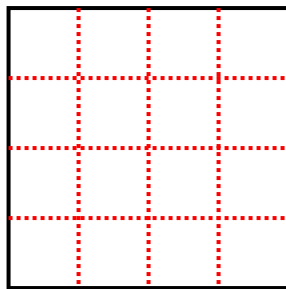
7) 5 filas

2 columnas



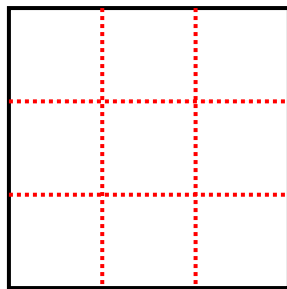
8) 4 filas

4 columnas



9) 3 filas

3 columnas



Respuestas

1. 8

2. 4

3. 15

4. 20

5. 6

6. 12

7. 10

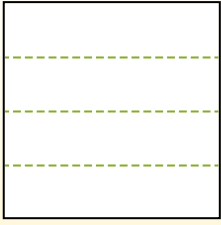
8. 16

9. 9

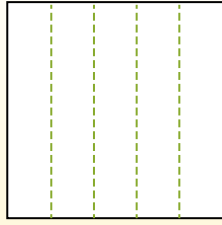


Dividir la forma que se muestra y después cuenta para encontrar el número de cajas.

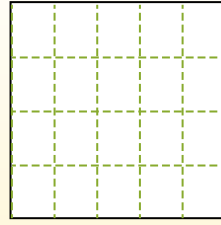
Las filas van de izquierda a derecha.




Las columnas van de arriba a abajo.




Aqui tem 4 linhas e 5 colunas .
Existem 20 caixas no total.




1) 5 filas
4 columnas




2) 4 filas
4 columnas




3) 2 filas
3 columnas




4) 4 filas
3 columnas




5) 5 filas
5 columnas




6) 3 filas
5 columnas




7) 5 filas
2 columnas



8) 2 filas
5 columnas



9) 3 filas
3 columnas



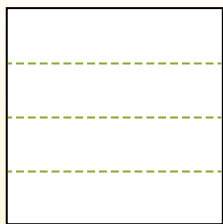
Respuestas

- 1. _____
- 2. _____
- 3. _____
- 4. _____
- 5. _____
- 6. _____
- 7. _____
- 8. _____
- 9. _____

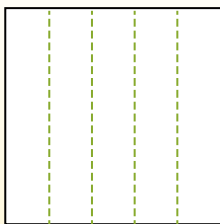


Dividir la forma que se muestra y después cuenta para encontrar el número de cajas.

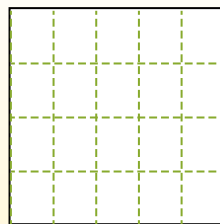
Las filas van de izquierda a derecha.



Las columnas van de arriba a abajo.

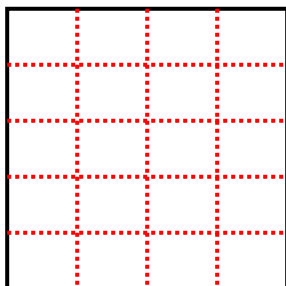


Aqui tem 4 linhas e 5 colunas .
Existem 20 caixas no total.




1) 5 filas

4 columnas



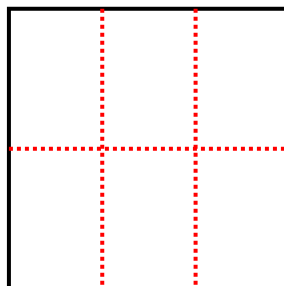
2) 4 filas

4 columnas



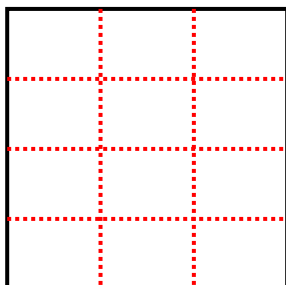
3) 2 filas

3 columnas



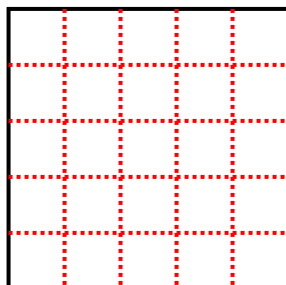
4) 4 filas

3 columnas



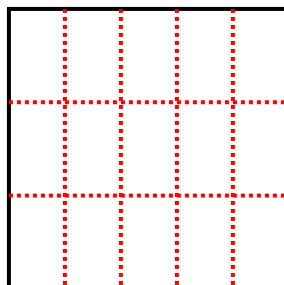
5) 5 filas

5 columnas



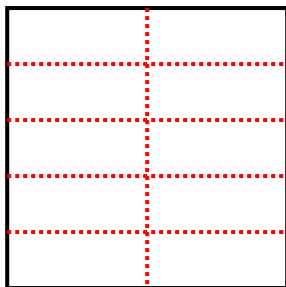
6) 3 filas

5 columnas



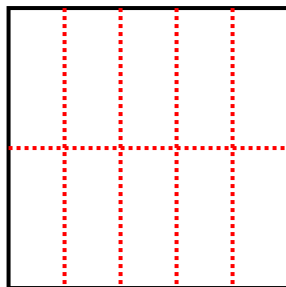
7) 5 filas

2 columnas



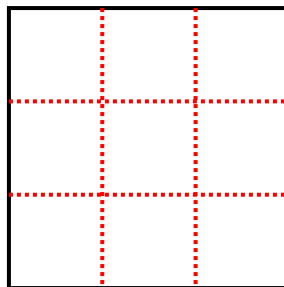
8) 2 filas

5 columnas



9) 3 filas

3 columnas



Respuestas

1. **20**

2. **16**

3. **6**

4. **12**

5. **25**

6. **15**

7. **10**

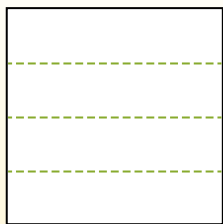
8. **10**

9. **9**

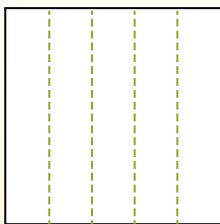


Dividir la forma que se muestra y después cuenta para encontrar el número de cajas.

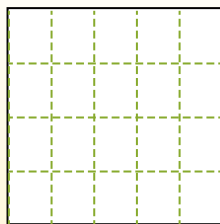
Las filas van de izquierda a derecha.




Las columnas van de arriba a abajo.




Aqui tem 4 linhas e 5 colunas .
Existem 20 caixas no total.




1) 3 filas
3 columnas




2) 2 filas
3 columnas




3) 4 filas
3 columnas




4) 5 filas
4 columnas




5) 2 filas
5 columnas




6) 3 filas
2 columnas




7) 2 filas
4 columnas



8) 4 filas
4 columnas



9) 5 filas
3 columnas



Respuestas

- 1. _____
- 2. _____
- 3. _____
- 4. _____
- 5. _____
- 6. _____
- 7. _____
- 8. _____
- 9. _____

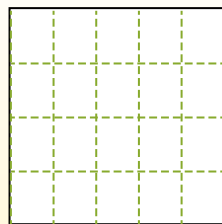
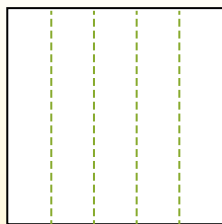
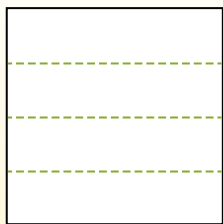


Dividir la forma que se muestra y después cuenta para encontrar el número de cajas.

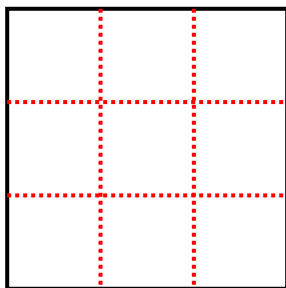
Las filas van de izquierda a derecha.

Las columnas van de arriba a abajo.

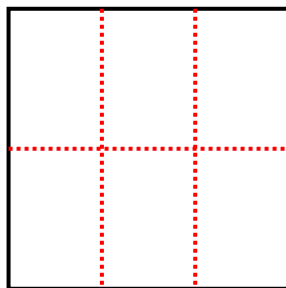
Aqui tem 4 linhas e 5 colunas .
Existem 20 caixas no total.



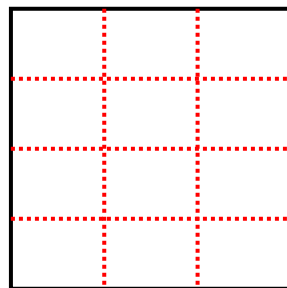
1) 3 filas
3 columnas




2) 2 filas
3 columnas



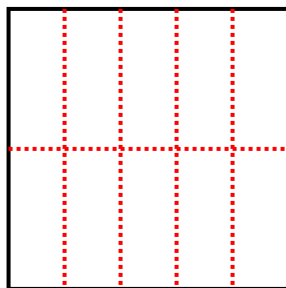
3) 4 filas
3 columnas



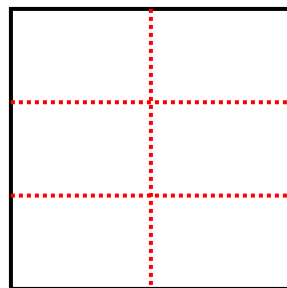
4) 5 filas
4 columnas



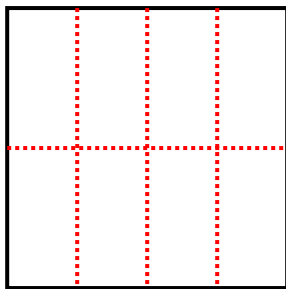
5) 2 filas
5 columnas



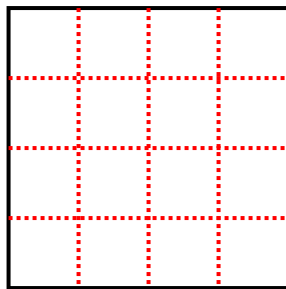
6) 3 filas
2 columnas



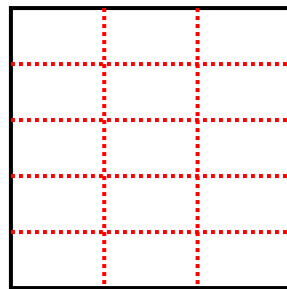
7) 2 filas
4 columnas



8) 4 filas
4 columnas



9) 5 filas
3 columnas



Respuestas

1. 9

2. 6

3. 12

4. 20

5. 10

6. 6

7. 8


8. 16

9. 15

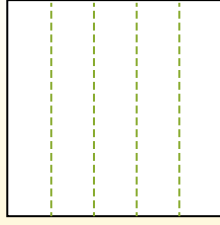


Dividir la forma que se muestra y después cuenta para encontrar el número de cajas.


Las filas van de izquierda a derecha.



Las columnas van de arriba a abajo.




Aqui tem 4 linhas e 5 colunas .
Existem 20 caixas no total.




Respuestas

- 1. _____
- 2. _____
- 3. _____
- 4. _____
- 5. _____
- 6. _____
- 7. _____
- 8. _____
- 9. _____


1) 2 filas
5 columnas




2) 3 filas
5 columnas




3) 5 filas
5 columnas




4) 4 filas
3 columnas




5) 5 filas
3 columnas




6) 2 filas
3 columnas




7) 5 filas
4 columnas



8) 2 filas
2 columnas



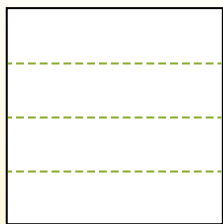
9) 4 filas
4 columnas



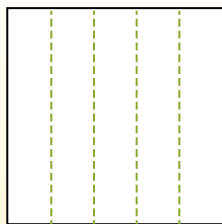


Dividir la forma que se muestra y después cuenta para encontrar el número de cajas.

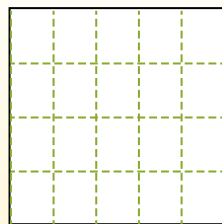
Las filas van de izquierda a derecha.



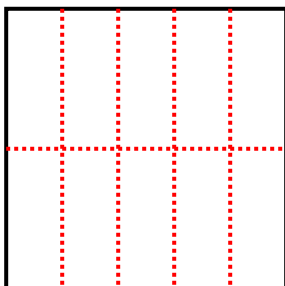
Las columnas van de arriba a abajo.



Aqui tem 4 linhas e 5 colunas. Existem 20 caixas no total.



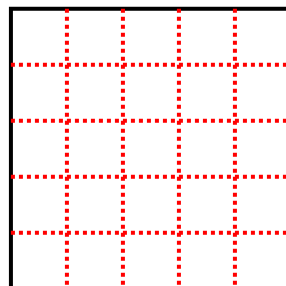
1) 2 filas
5 columnas



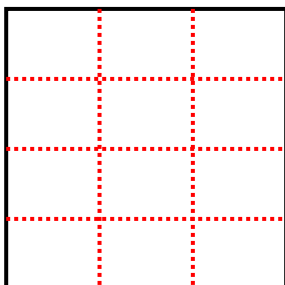
2) 3 filas
5 columnas



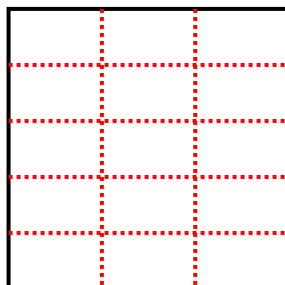
3) 5 filas
5 columnas



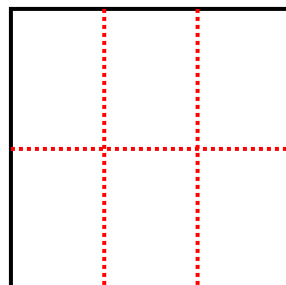
4) 4 filas
3 columnas



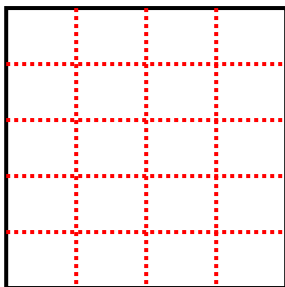
5) 5 filas
3 columnas



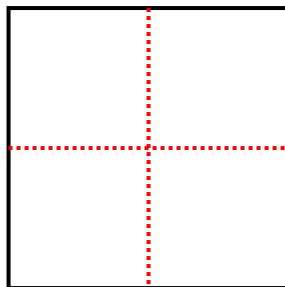
6) 2 filas
3 columnas



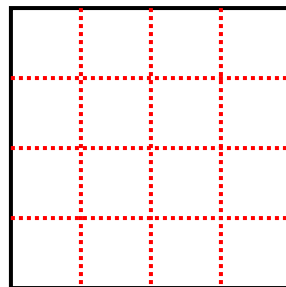
7) 5 filas
4 columnas



8) 2 filas
2 columnas



9) 4 filas
4 columnas



Respuestas

1. **10**

2. **15**

3. **25**

4. **12**

5. **15**

6. **6**

7. **20**

8. **4**

9. **16**