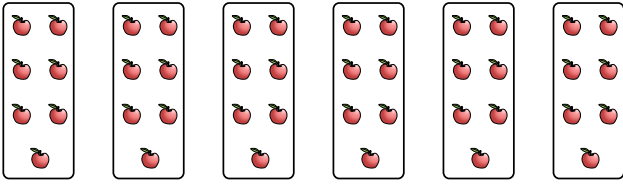


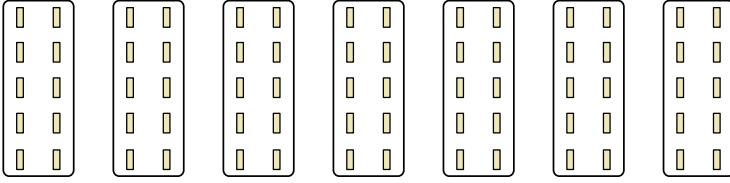


Expresar cada grupo como un problema de multiplicación.

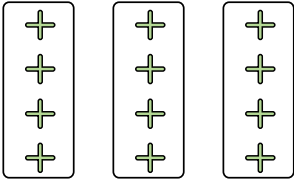
Ej)




1)



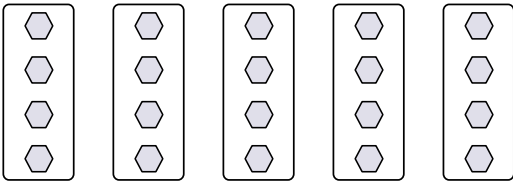
2)



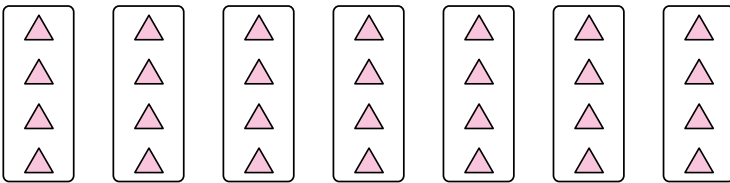
3)



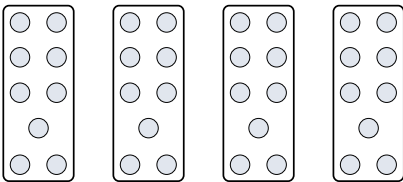
4)




5)



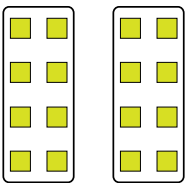
6)



7)



8)



Respuestas

Ej. $6 \times 7 = 42$

1. _____

2. _____

3. _____

4. _____

5. _____

6. _____

7. _____

8. _____



Expresar cada grupo como un problema de multiplicación.

Ej)

1)

2)

3)

4)

5)

6)

7)

8)

Respuestas

- Ej. 6×7=42
1. 7×10=70
2. 3×4=12
3. 3×7=21
4. 5×4=20
5. 7×4=28
6. 4×9=36
7. 4×10=40
8. 2×8=16