



Expresar cada grupo como un problema de multiplicación.

**Respuestas**

Ej)

Ej.  $8 \times 8 = 64$

1)

1. \_\_\_\_\_

2)

2. \_\_\_\_\_

3)

3. \_\_\_\_\_

4)

4. \_\_\_\_\_

5)

5. \_\_\_\_\_

6)

6. \_\_\_\_\_

7)

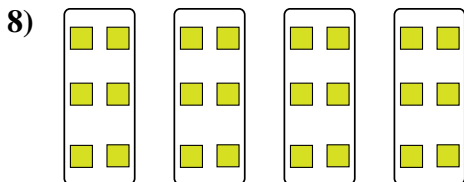
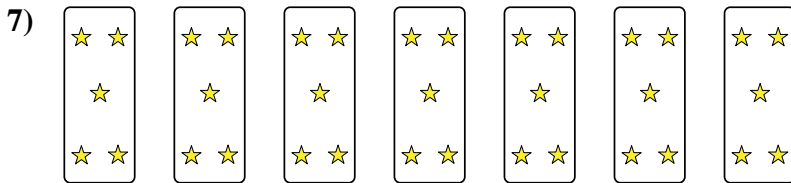
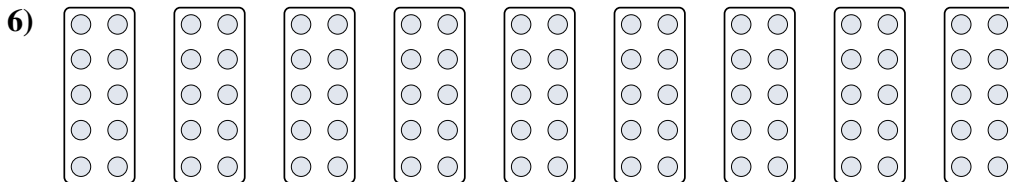
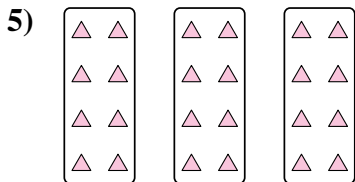
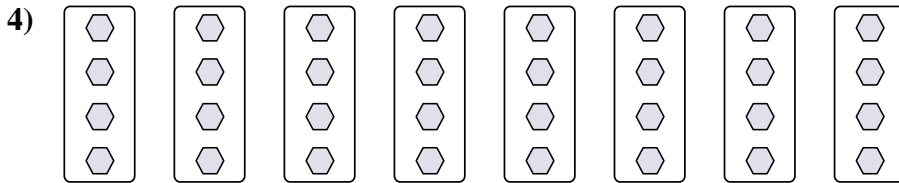

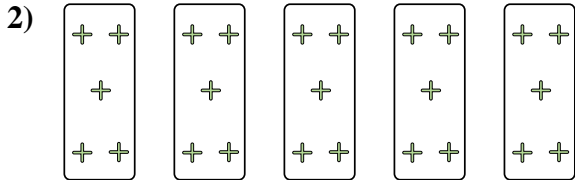
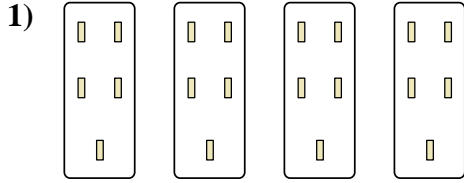

7. \_\_\_\_\_

8)

8. \_\_\_\_\_



Expresar cada grupo como un problema de multiplicación.



**Respuestas**

Ej. 8×8=64

1. 4×5=20

2. 5×5=25

3. 7×10=70

4. 8×4=32

5. 3×8=24

6. 9×10=90

7. 7×5=35

8. 4×6=24