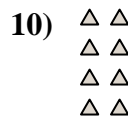
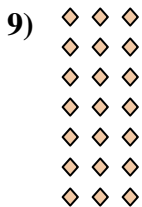


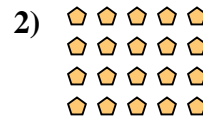






Escribir cada matriz como un problema de multiplicación y resolver.



**Respuestas**

Ej. 5 × 8 = 40

1. 10 × 5 = 50

2. 4 × 5 = 20

3. 2 × 8 = 16

4. 3 × 9 = 27

5. 7 × 2 = 14

6. 4 × 4 = 16

7. 2 × 2 = 4

8. 8 × 2 = 16

9. 7 × 3 = 21

10. 4 × 2 = 8

11. 10 × 2 = 20