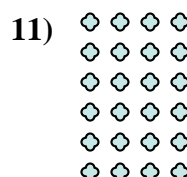
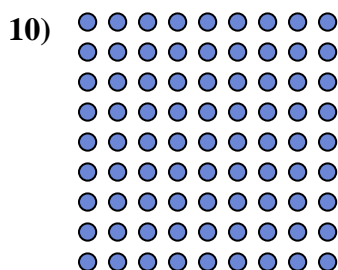



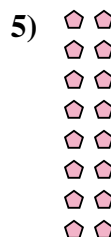

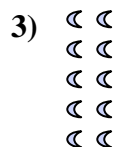







Escribir cada matriz como un problema de multiplicación y resolver.



Respuestas

Ej. 7 × 7 = 49

1. 8 × 6 = 48

2. 6 × 8 = 48

3. 5 × 2 = 10

4. 10 × 8 = 80

5. 8 × 2 = 16

6. 9 × 10 = 90

7. 3 × 8 = 24

8. 8 × 9 = 72

9. 3 × 9 = 27

10. 9 × 9 = 81

11. 6 × 4 = 24

