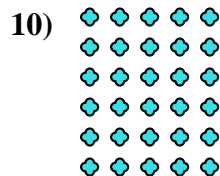



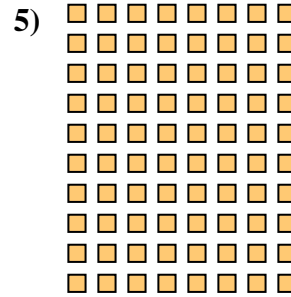









Escribir cada matriz como un problema de multiplicación y resolver.



**Respuestas**

Ej.  $3 \times 10 = 30$

1.  $4 \times 9 = 36$

2.  $7 \times 10 = 70$

3.  $9 \times 3 = 27$

4.  $10 \times 7 = 70$

5.  $10 \times 8 = 80$

6.  $4 \times 8 = 32$

7.  $8 \times 9 = 72$

8.  $3 \times 9 = 27$

9.  $5 \times 9 = 45$

10.  $6 \times 5 = 30$

11.  $2 \times 8 = 16$