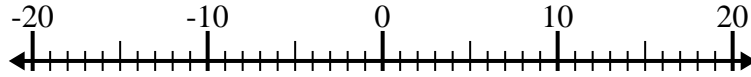


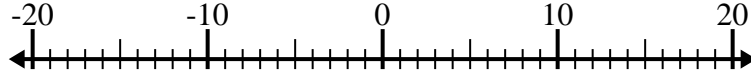


Resolver cada problema. Usar la recta numérica si lo necesitas.

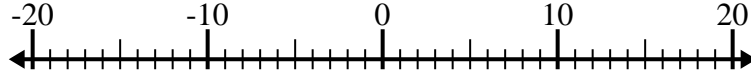
1) $(-2) + (-8) =$ _____



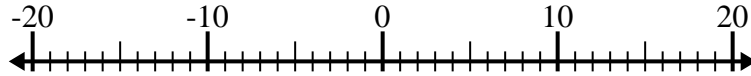
2) $9 - (-7) =$ _____



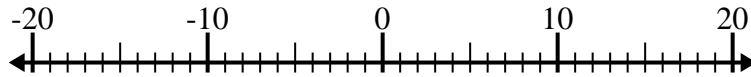
3) $(-7) + 13 =$ _____



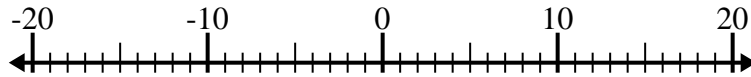
4) $(-11) - 3 =$ _____



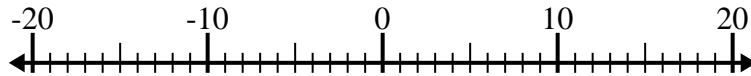
5) $1 + (-2) =$ _____



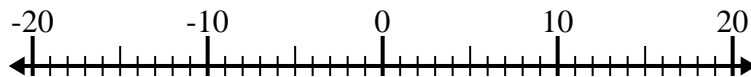
6) $(-8) - (-4) =$ _____



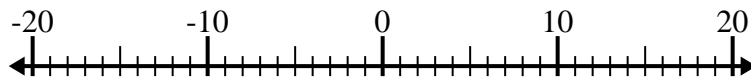
7) $(-4) - (-13) =$ _____



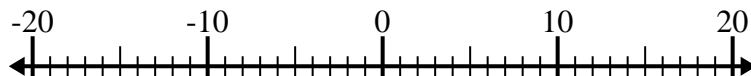
8) $1 - (-14) =$ _____



9) $(-7) + 15 =$ _____



10) $(-5) + (-4) =$ _____



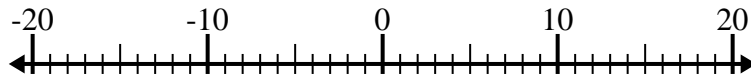
Respuestas

1. _____
2. _____
3. _____
4. _____
5. _____
6. _____
7. _____
8. _____
9. _____
10. _____

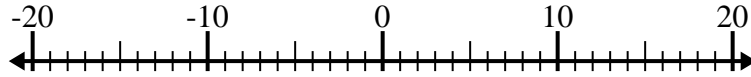


Resolver cada problema. Usar la recta numérica si lo necesitas.

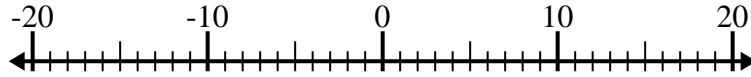
1) $(-2) + (-8) = \underline{-10}$



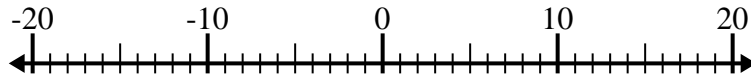
2) $9 - (-7) = \underline{16}$



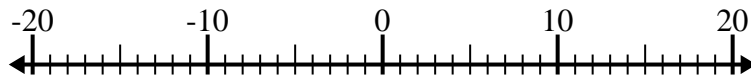
3) $(-7) + 13 = \underline{6}$



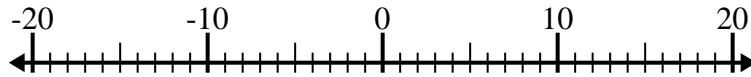
4) $(-11) - 3 = \underline{-14}$



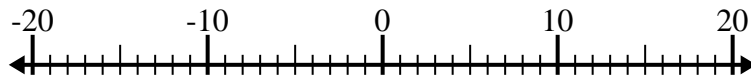
5) $1 + (-2) = \underline{-1}$



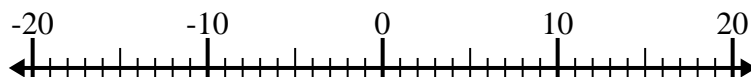
6) $(-8) - (-4) = \underline{-4}$



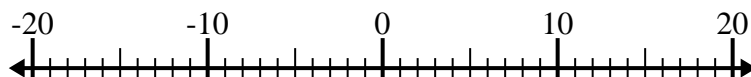
7) $(-4) - (-13) = \underline{9}$



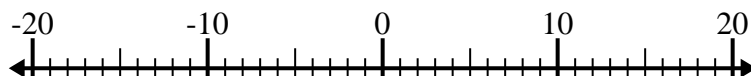
8) $1 - (-14) = \underline{15}$



9) $(-7) + 15 = \underline{8}$



10) $(-5) + (-4) = \underline{-9}$

**Respuestas**1. **-10**2. **16**3. **6**4. **-14**5. **-1**6. **-4**7. **9**8. **15**9. **8**10. **-9**