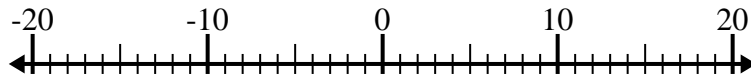


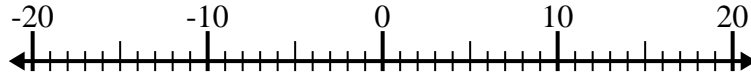


Resolver cada problema. Usar la recta numérica si lo necesitas.

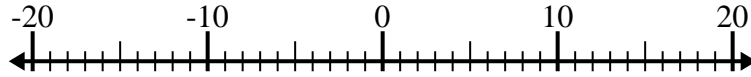
1) $(-12) - (-8) =$ _____



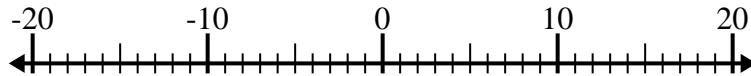
2) $(-7) + (-5) =$ _____



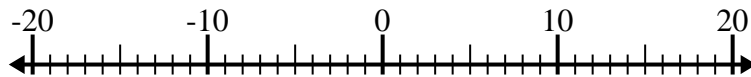
3) $13 + (-4) =$ _____



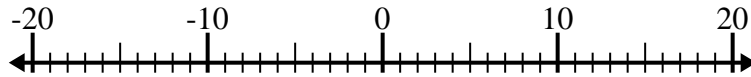
4) $(-6) + 7 =$ _____



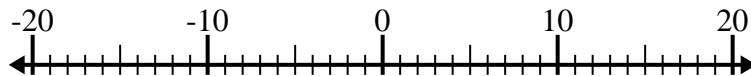
5) $9 + (-10) =$ _____



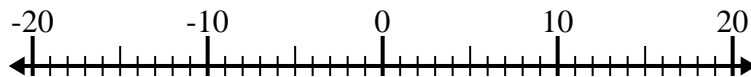
6) $(-2) + 4 =$ _____



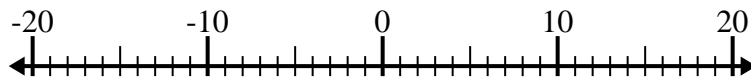
7) $(-6) - (-15) =$ _____



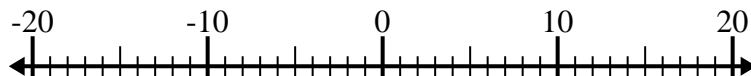
8) $(-11) - 3 =$ _____



9) $(-5) - 2 =$ _____



10) $11 - (-4) =$ _____

**Respuestas**

1. _____

2. _____

3. _____

4. _____

5. _____

6. _____

7. _____

8. _____

9. _____

10. _____

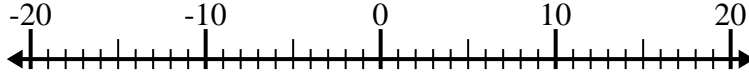


Resolver cada problema. Usar la recta numérica si lo necesitas.

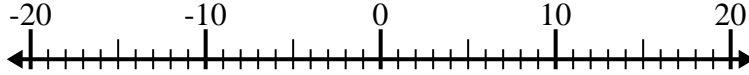
1) $(-12) - (-8) = \underline{-4}$



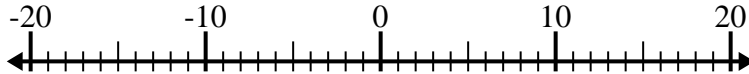
2) $(-7) + (-5) = \underline{-12}$



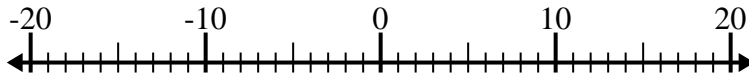
3) $13 + (-4) = \underline{9}$



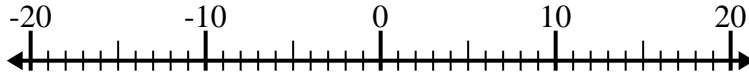
4) $(-6) + 7 = \underline{1}$



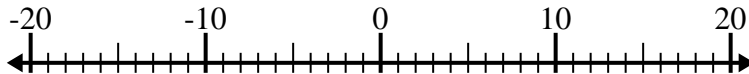
5) $9 + (-10) = \underline{-1}$



6) $(-2) + 4 = \underline{2}$



7) $(-6) - (-15) = \underline{9}$



8) $(-11) - 3 = \underline{-14}$



9) $(-5) - 2 = \underline{-7}$



10) $11 - (-4) = \underline{15}$

**Respuestas**1. **-4**2. **-12**3. **9**4. **1**5. **-1**6. **2**7. **9**8. **-14**9. **-7**10. **15**