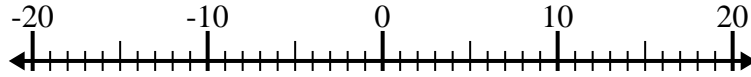


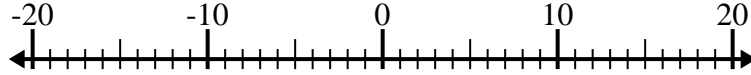


Resolver cada problema. Usar la recta numérica si lo necesitas.

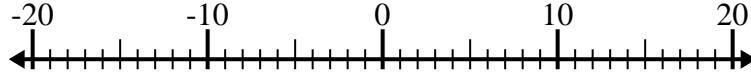
1) $(-4) - (-1) =$ _____



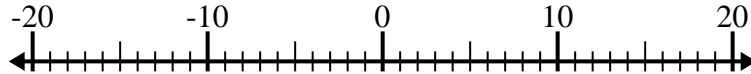
2) $(-11) + 14 =$ _____



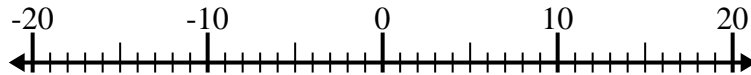
3) $(-8) - 12 =$ _____



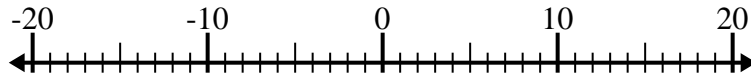
4) $4 + (-5) =$ _____



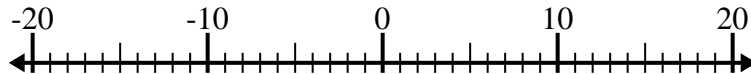
5) $11 - (-3) =$ _____



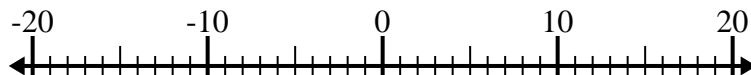
6) $(-13) - 6 =$ _____



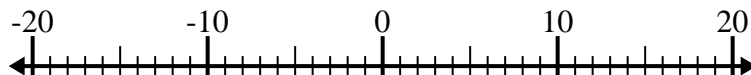
7) $12 + (-8) =$ _____



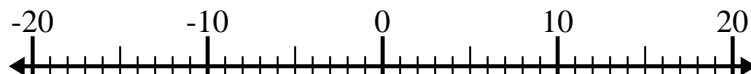
8) $(-7) - (-12) =$ _____



9) $(-3) + (-1) =$ _____



10) $(-5) + 2 =$ _____



Respuestas

1. _____

2. _____

3. _____

4. _____

5. _____

6. _____

7. _____

8. _____

9. _____

10. _____

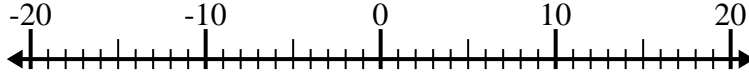


Resolver cada problema. Usar la recta numérica si lo necesitas.

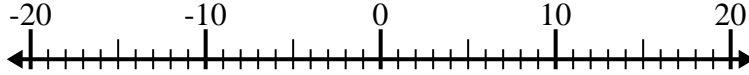
1) $(-4) - (-1) = \underline{-3}$



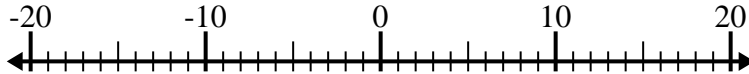
2) $(-11) + 14 = \underline{3}$



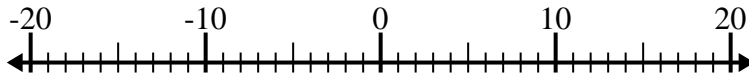
3) $(-8) - 12 = \underline{-20}$



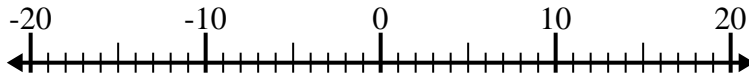
4) $4 + (-5) = \underline{-1}$



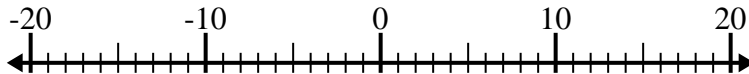
5) $11 - (-3) = \underline{14}$



6) $(-13) - 6 = \underline{-19}$



7) $12 + (-8) = \underline{4}$



8) $(-7) - (-12) = \underline{5}$



9) $(-3) + (-1) = \underline{-4}$



10) $(-5) + 2 = \underline{-3}$

**Respuestas**1. **-3**2. **3**3. **-20**4. **-1**5. **14**6. **-19**7. **4**8. **5**9. **-4**10. **-3**