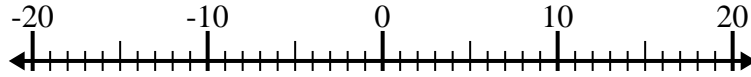


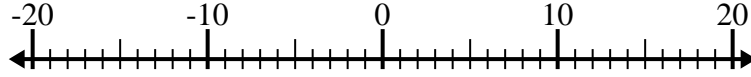


Resolver cada problema. Usar la recta numérica si lo necesitas.

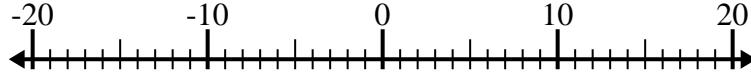
1) $2 + (-6) =$ _____



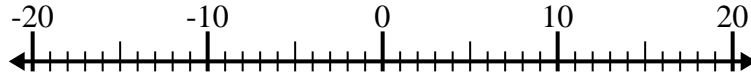
2) $(-12) - (-9) =$ _____



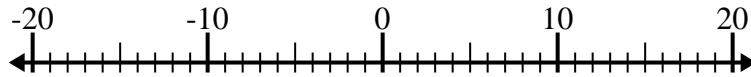
3) $2 - (-5) =$ _____



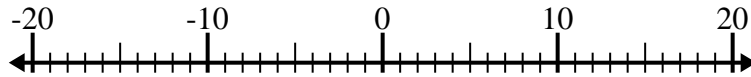
4) $(-12) + 7 =$ _____



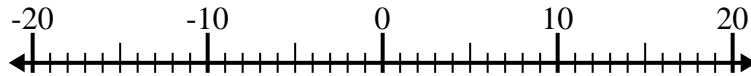
5) $10 - (-6) =$ _____



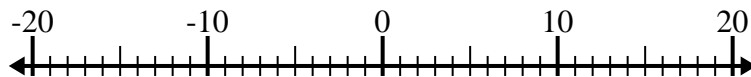
6) $(-12) + (-6) =$ _____



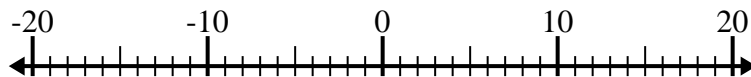
7) $(-15) - 4 =$ _____



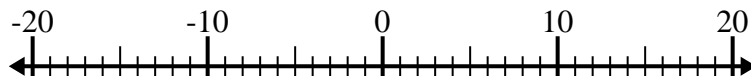
8) $(-5) + 4 =$ _____



9) $(-5) - 12 =$ _____



10) $(-3) - (-13) =$ _____



Respuestas

1. _____
2. _____
3. _____
4. _____
5. _____
6. _____
7. _____
8. _____
9. _____
10. _____



Resolver cada problema. Usar la recta numérica si lo necesitas.

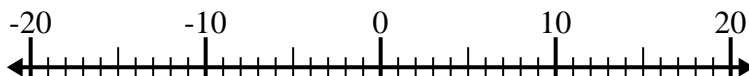
1) $2 + (-6) = \underline{-4}$



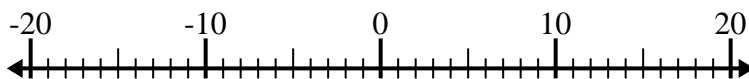
2) $(-12) - (-9) = \underline{-3}$



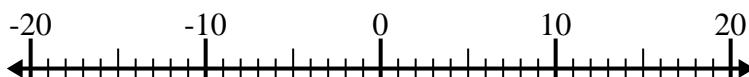
3) $2 - (-5) = \underline{7}$



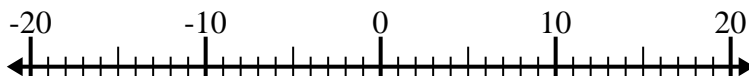
4) $(-12) + 7 = \underline{-5}$



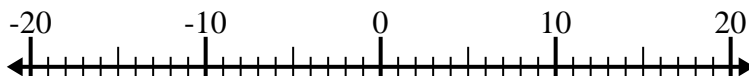
5) $10 - (-6) = \underline{16}$



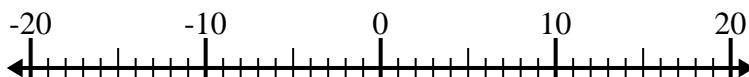
6) $(-12) + (-6) = \underline{-18}$



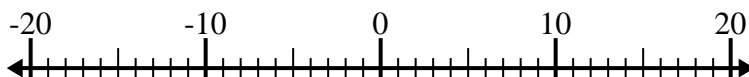
7) $(-15) - 4 = \underline{-19}$



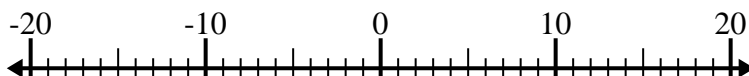
8) $(-5) + 4 = \underline{-1}$



9) $(-5) - 12 = \underline{-17}$



10) $(-3) - (-13) = \underline{10}$

**Respuestas**1. **-4**2. **-3**3. **7**4. **-5**5. **16**6. **-18**7. **-19**8. **-1**9. **-17**10. **10**