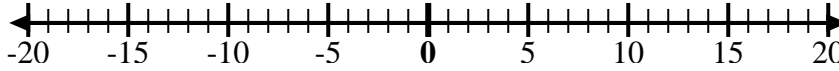


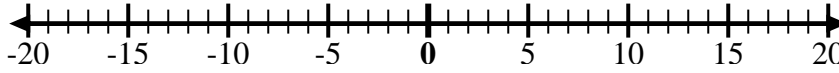


Utilice las rectas numéricas para mostrar cada expresión y resolver.

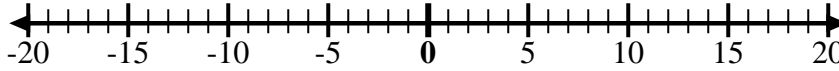
Ej) Empiece en -9
y agregue 5



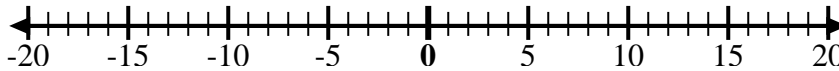
1) Empiece en
-10 y agregue
14



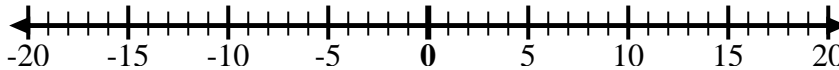
2) Empiece en 3
y agregue -10



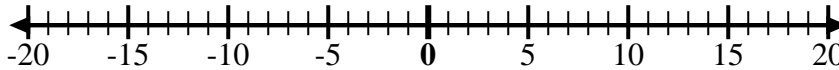
3) Empiece en 7
y agregue -6



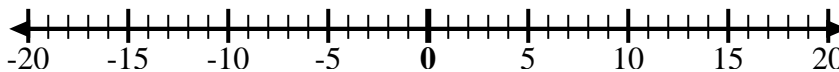
4) Empiece en -8
y agregue -2



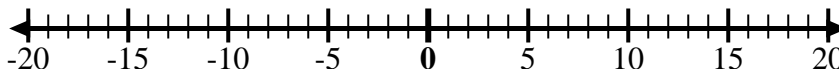
5) Empiece en 5
y agregue -9



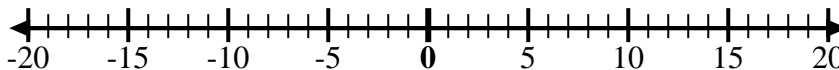
6) Empiece en -5
y agregue 4



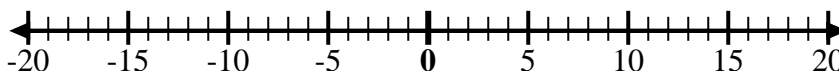
7) Empiece en -6
y agregue 9



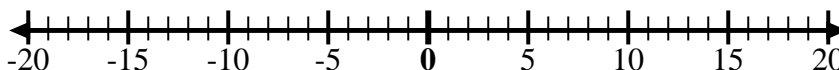
8) Empiece en -4
y agregue 14



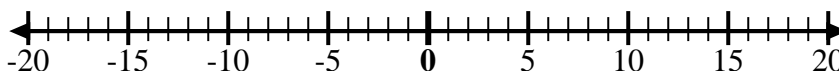
9) Empiece en -4
y agregue -3



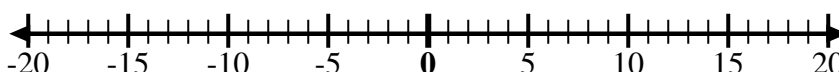
10) Empiece en -7
y agregue -2



11) Empiece en 0
y agregue -7



12) Empiece en -2
y agregue -2



Respuestas

Ej. $-9 + 5 = -4$

1. _____

2. _____

3. _____

4. _____

5. _____

6. _____

7. _____

8. _____

9. _____

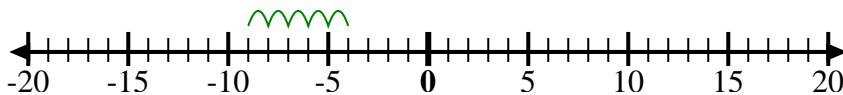
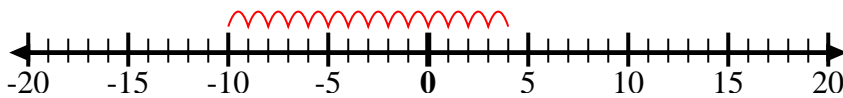
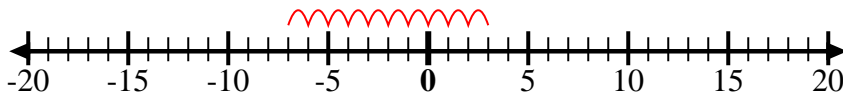
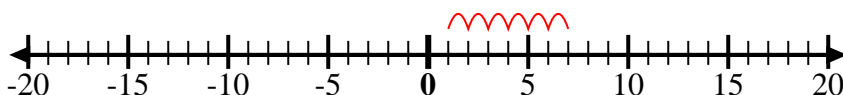
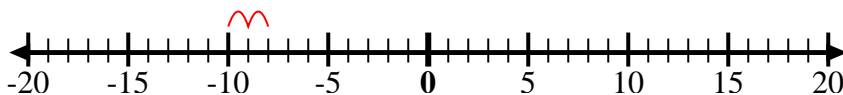
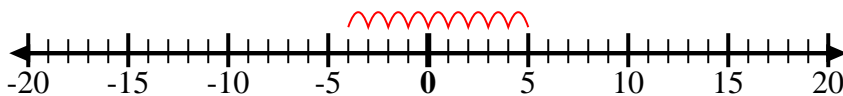
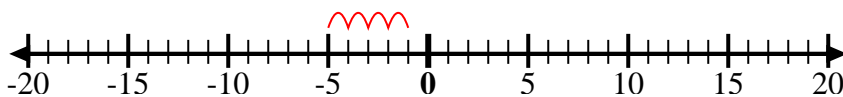
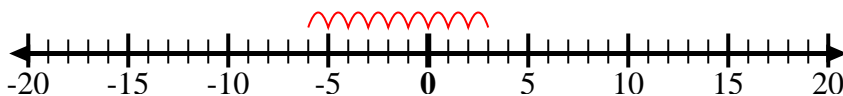
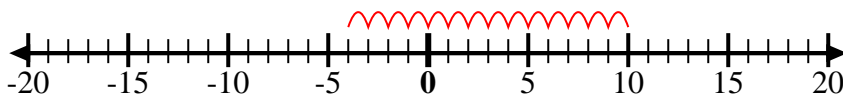
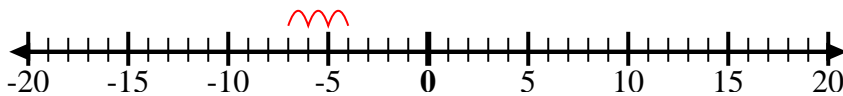
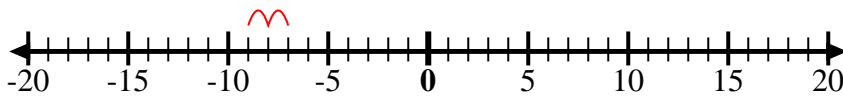
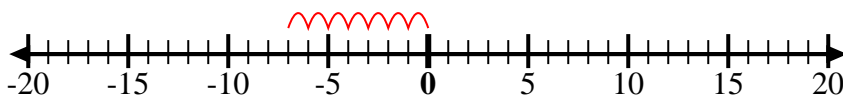
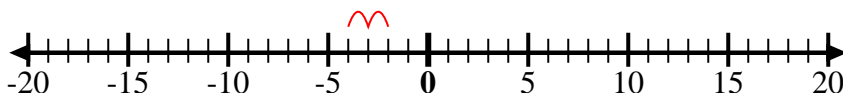
10. _____

11. _____

12. _____



Utilice las rectas numéricas para mostrar cada expresión y resolver.

Ej) Empiece en -9
y agregue 51) Empiece en
-10 y agregue
142) Empiece en 3
y agregue -103) Empiece en 7
y agregue -64) Empiece en -8
y agregue -25) Empiece en 5
y agregue -96) Empiece en -5
y agregue 47) Empiece en -6
y agregue 98) Empiece en -4
y agregue 149) Empiece en -4
y agregue -310) Empiece en -7
y agregue -211) Empiece en 0
y agregue -712) Empiece en -2
y agregue -2**Respuestas**

Ej. $-9 + 5 = -4$

1. $-10 + 14 = 4$

2. $3 + -10 = -7$

3. $7 + -6 = 1$

4. $-8 + -2 = -10$

5. $5 + -9 = -4$

6. $-5 + 4 = -1$

7. $-6 + 9 = 3$

8. $-4 + 14 = 10$

9. $-4 + -3 = -7$

10. $-7 + -2 = -9$

11. $0 + -7 = -7$

12. $-2 + -2 = -4$