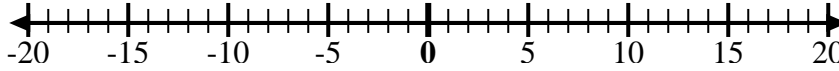


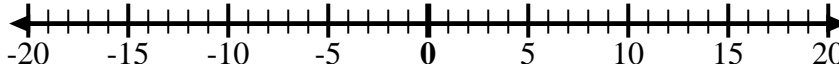


Utilice las rectas numéricas para mostrar cada expresión y resolver.

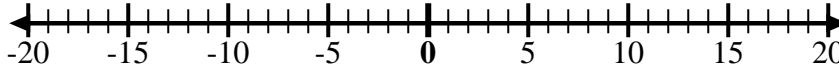
Ej) Empiece en 7
y agregue -7



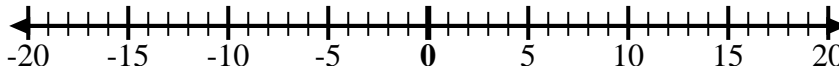
1) Empiece en 2
y agregue -11



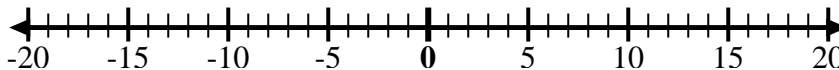
2) Empiece en -4
y agregue -3



3) Empiece en -7
y agregue -2



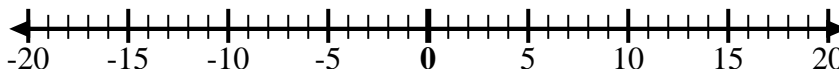
4) Empiece en -8
y agregue 5



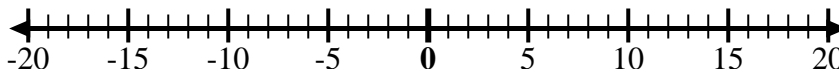
5) Empiece en -9
y agregue 14



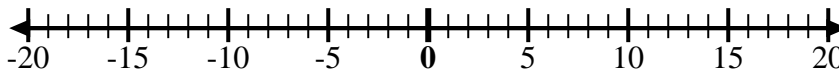
6) Empiece en -8
y agregue -2



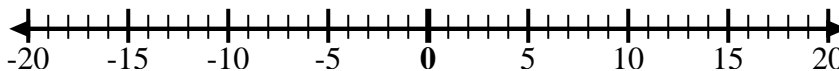
7) Empiece en -5
y agregue -2



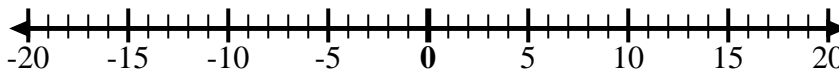
8) Empiece en -3
y agregue -6



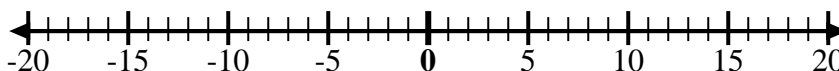
9) Empiece en 4
y agregue -9



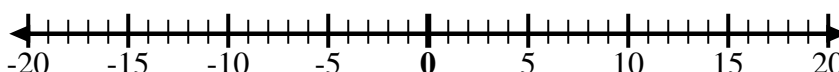
10) Empiece en 0
y agregue -10



11) Empiece en -6
y agregue -2



12) Empiece en 9
y agregue -6



Respuestas

Ej. $7 + -7 = 0$

1. _____

2. _____

3. _____

4. _____

5. _____

6. _____

7. _____

8. _____

9. _____

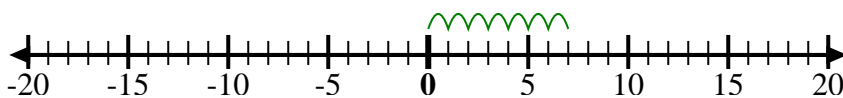
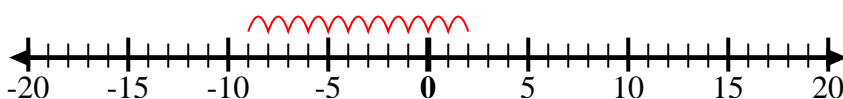
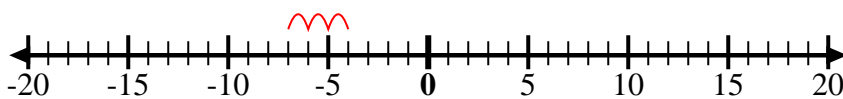
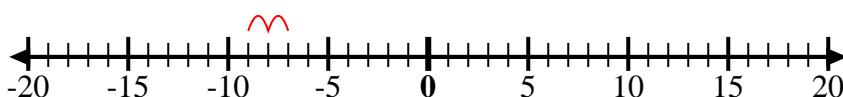
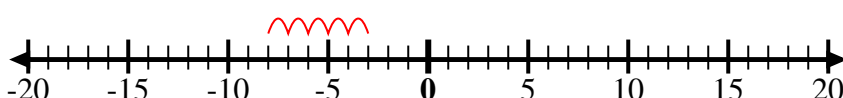
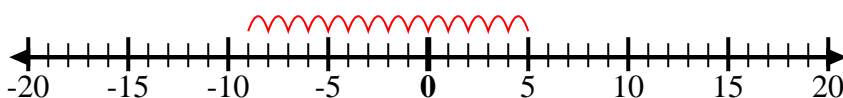
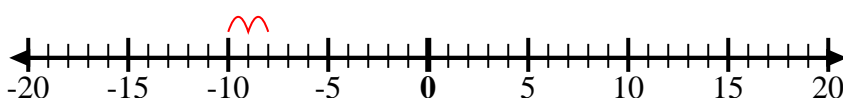
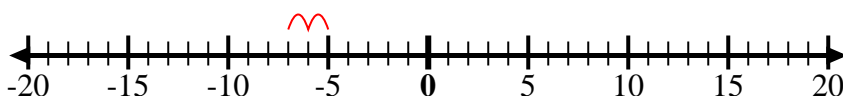
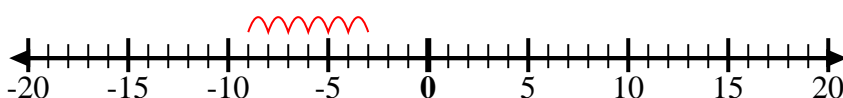
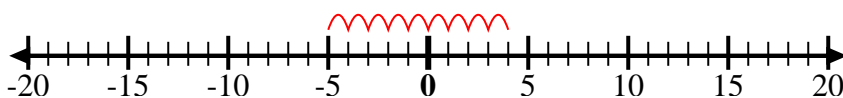
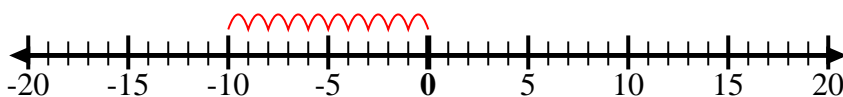
10. _____

11. _____

12. _____



Utilice las rectas numéricas para mostrar cada expresión y resolver.

Ej) Empiece en 7
y agregue -71) Empiece en 2
y agregue -112) Empiece en -4
y agregue -33) Empiece en -7
y agregue -24) Empiece en -8
y agregue 55) Empiece en -9
y agregue 146) Empiece en -8
y agregue -27) Empiece en -5
y agregue -28) Empiece en -3
y agregue -69) Empiece en 4
y agregue -910) Empiece en 0
y agregue -1011) Empiece en -6
y agregue -212) Empiece en 9
y agregue -6**Respuestas**

Ej. $7 + -7 = 0$

1. $2 + -11 = -9$

2. $-4 + -3 = -7$

3. $-7 + -2 = -9$

4. $-8 + 5 = -3$

5. $-9 + 14 = 5$

6. $-8 + -2 = -10$

7. $-5 + -2 = -7$

8. $-3 + -6 = -9$

9. $4 + -9 = -5$

10. $0 + -10 = -10$

11. $-6 + -2 = -8$

12. $9 + -6 = 3$