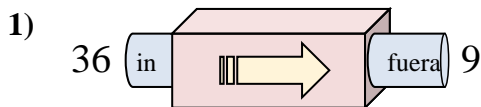
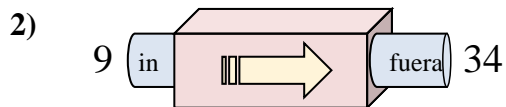




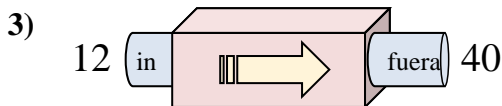
Determinar cuál regla está usando la máquina de funciones.

Respuestas

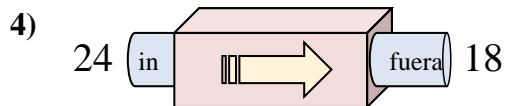
- A. Agregar 30
- B. Restar 32
- C. Restar 31
- D. Restar 27



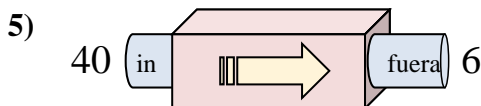
- A. Agregar 23
- B. Restar 29
- C. Restar 21
- D. Agregar 25



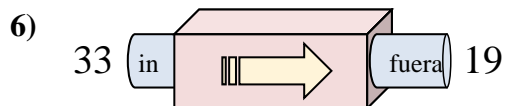
- A. Restar 30
- B. Agregar 33
- C. Agregar 29
- D. Agregar 28



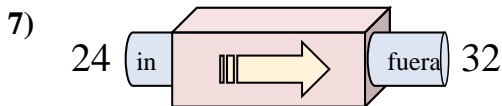
- A. Agregar 4
- B. Restar 2
- C. Restar 6
- D. Restar 5



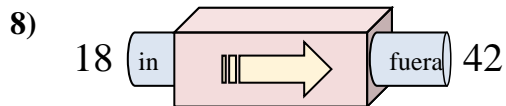
- A. Agregar 29
- B. Restar 39
- C. Restar 34
- D. Agregar 30



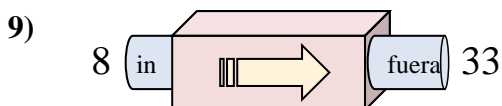
- A. Agregar 16
- B. Restar 17
- C. Restar 14
- D. Restar 9



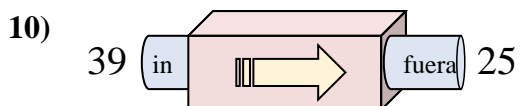
- A. Agregar 11
- B. Agregar 8
- C. Restar 12
- D. Agregar 12



- A. Agregar 24
- B. Agregar 23
- C. Restar 23
- D. Agregar 21



- A. Agregar 25
- B. Restar 24
- C. Restar 26
- D. Agregar 27

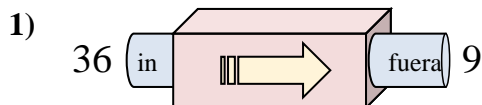


- A. Agregar 9
- B. Agregar 14
- C. Restar 10
- D. Restar 14

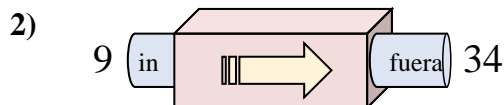
1. _____
2. _____
3. _____
4. _____
5. _____
6. _____
7. _____
8. _____
9. _____
10. _____



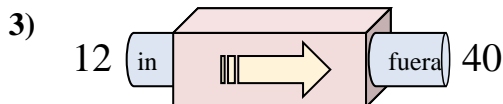
Determinar cuál regla está usando la máquina de funciones.

Respuestas

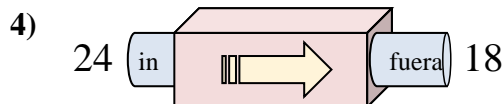
- A. Agregar 30
- B. Restar 32
- C. Restar 31
- D. Restar 27



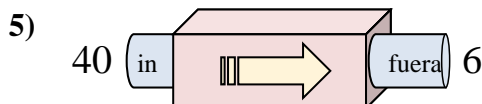
- A. Agregar 23
- B. Restar 29
- C. Restar 21
- D. Agregar 25



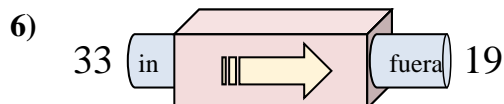
- A. Restar 30
- B. Agregar 33
- C. Agregar 29
- D. Agregar 28



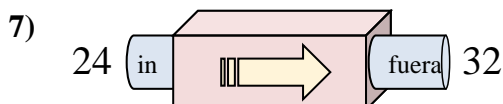
- A. Agregar 4
- B. Restar 2
- C. Restar 6
- D. Restar 5



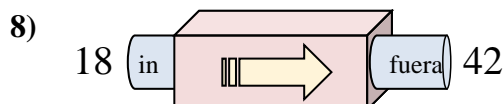
- A. Agregar 29
- B. Restar 39
- C. Restar 34
- D. Agregar 30



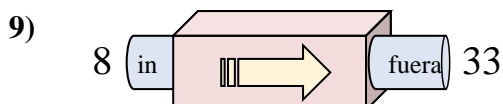
- A. Agregar 16
- B. Restar 17
- C. Restar 14
- D. Restar 9



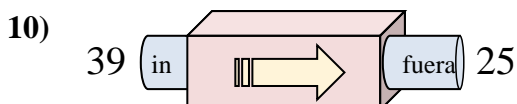
- A. Agregar 11
- B. Agregar 8
- C. Restar 12
- D. Agregar 12



- A. Agregar 24
- B. Agregar 23
- C. Restar 23
- D. Agregar 21



- A. Agregar 25
- B. Restar 24
- C. Restar 26
- D. Agregar 27



- A. Agregar 9
- B. Agregar 14
- C. Restar 10
- D. Restar 14

1. **D**2. **D**3. **D**4. **C**5. **C**6. **C**7. **B**8. **A**9. **A**10. **D**