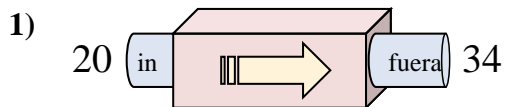
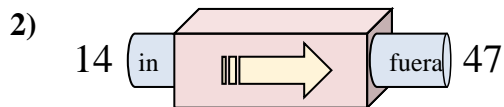




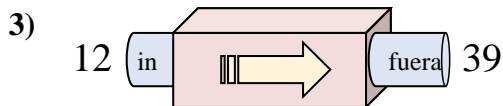
Determinar cuál regla está usando la máquina de funciones.

**Respuestas**

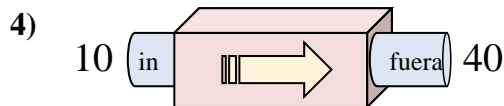
- A. Restar 13
- B. Agregar 14
- C. Agregar 12
- D. Agregar 9



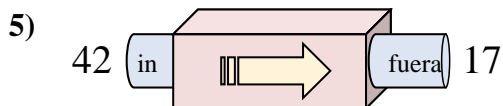
- A. Agregar 32
- B. Agregar 33
- C. Restar 35
- D. Agregar 37



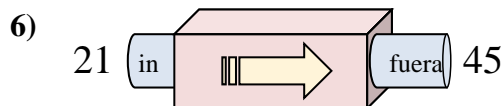
- A. Agregar 31
- B. Agregar 27
- C. Agregar 26
- D. Restar 24



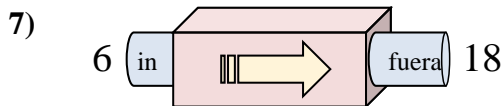
- A. Restar 28
- B. Restar 31
- C. Agregar 26
- D. Agregar 30



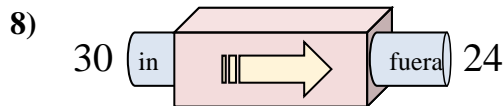
- A. Restar 29
- B. Agregar 24
- C. Restar 25
- D. Agregar 22



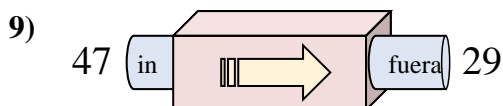
- A. Agregar 24
- B. Agregar 27
- C. Restar 29
- D. Agregar 25



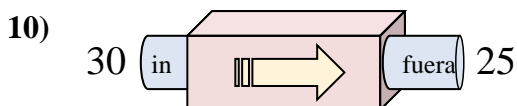
- A. Agregar 9
- B. Agregar 12
- C. Restar 9
- D. Agregar 14



- A. Restar 6
- B. Agregar 5
- C. Restar 11
- D. Restar 10



- A. Agregar 22
- B. Restar 18
- C. Restar 21
- D. Restar 19



- A. Agregar 8
- B. Agregar 10
- C. Restar 7
- D. Restar 5

1. \_\_\_\_\_

2. \_\_\_\_\_

3. \_\_\_\_\_

4. \_\_\_\_\_

5. \_\_\_\_\_

6. \_\_\_\_\_

7. \_\_\_\_\_

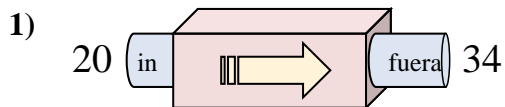
8. \_\_\_\_\_

9. \_\_\_\_\_

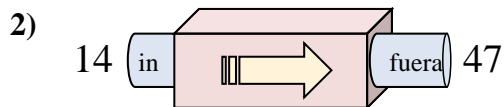
10. \_\_\_\_\_



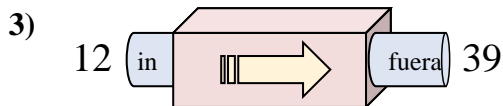
Determinar cuál regla está usando la máquina de funciones.

**Respuestas**

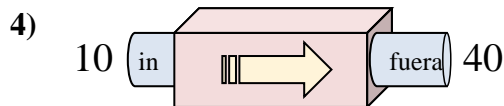
- A. Restar 13  
B. Agregar 14  
C. Agregar 12  
D. Agregar 9



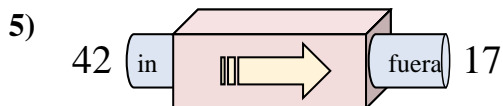
- A. Agregar 32  
B. Agregar 33  
C. Restar 35  
D. Agregar 37



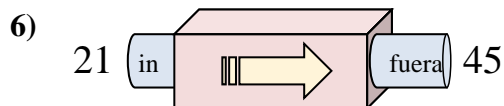
- A. Agregar 31  
B. Agregar 27  
C. Agregar 26  
D. Restar 24



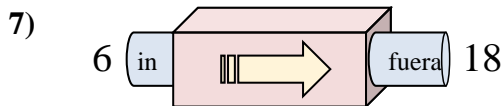
- A. Restar 28  
B. Restar 31  
C. Agregar 26  
D. Agregar 30



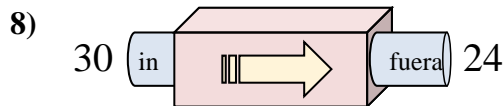
- A. Restar 29  
B. Agregar 24  
C. Restar 25  
D. Agregar 22



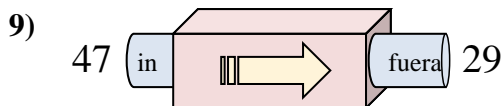
- A. Agregar 24  
B. Agregar 27  
C. Restar 29  
D. Agregar 25



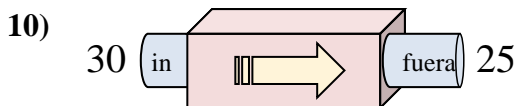
- A. Agregar 9  
B. Agregar 12  
C. Restar 9  
D. Agregar 14



- A. Restar 6  
B. Agregar 5  
C. Restar 11  
D. Restar 10



- A. Agregar 22  
B. Restar 18  
C. Restar 21  
D. Restar 19



- A. Agregar 8  
B. Agregar 10  
C. Restar 7  
D. Restar 5

1. **B**2. **B**3. **B**4. **D**5. **C**6. **A**7. **B**8. **A**9. **B**10. **D**